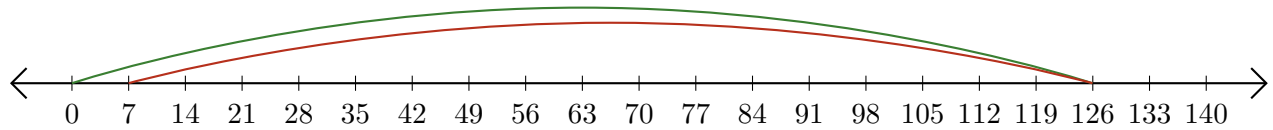


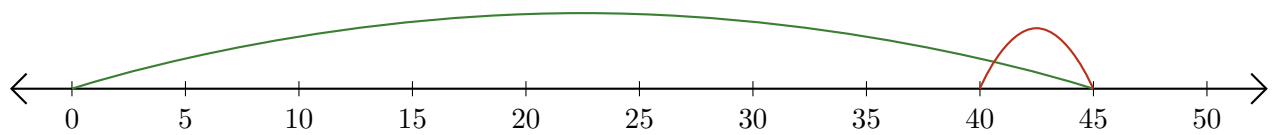
# Leer Rectas Numéricas (C)

Escriba la pregunta que representa cada recta numérica.

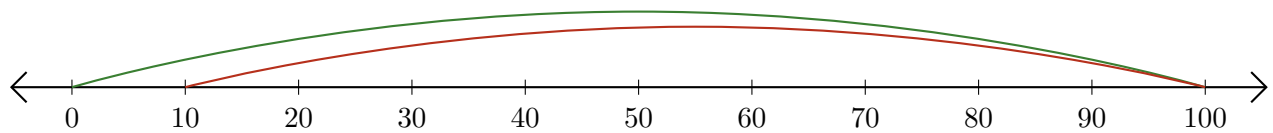
1. \_\_\_\_\_ - \_\_\_\_\_ = \_\_\_\_\_



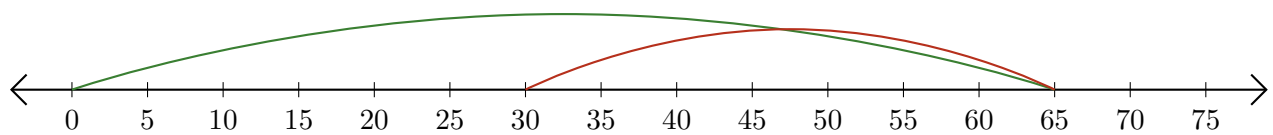
2. \_\_\_\_\_ - \_\_\_\_\_ = \_\_\_\_\_



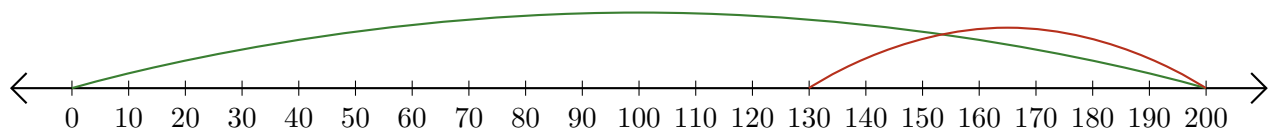
3. \_\_\_\_\_ - \_\_\_\_\_ = \_\_\_\_\_



4. \_\_\_\_\_ - \_\_\_\_\_ = \_\_\_\_\_



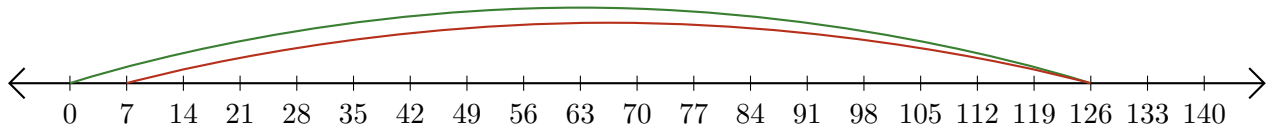
5. \_\_\_\_\_ - \_\_\_\_\_ = \_\_\_\_\_



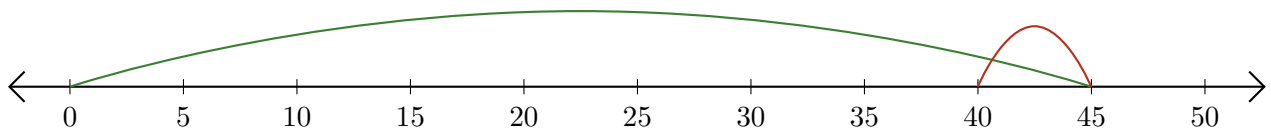
# Leer Rectas Numéricas (C) Respuestas

Escriba la pregunta que representa cada recta numérica.

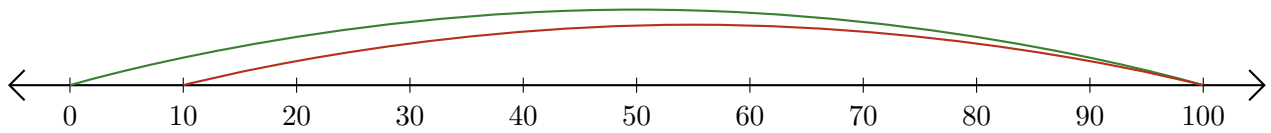
1.  $\underline{126} - \underline{119} = \underline{7}$



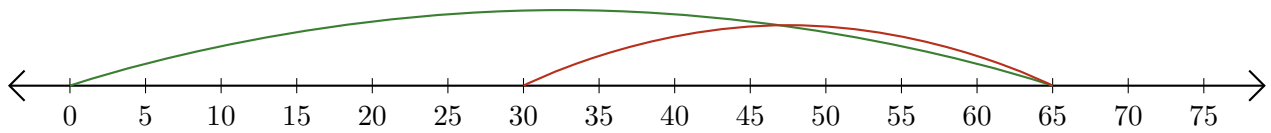
2.  $\underline{45} - \underline{5} = \underline{40}$



3.  $\underline{100} - \underline{90} = \underline{10}$



4.  $\underline{65} - \underline{35} = \underline{30}$



5.  $\underline{200} - \underline{70} = \underline{130}$

