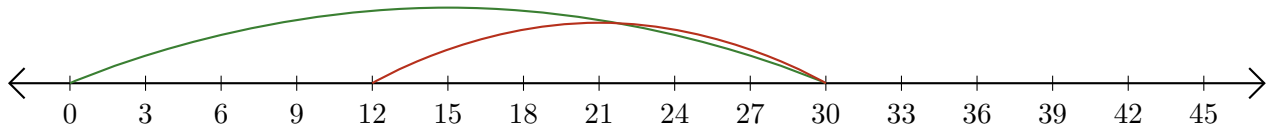



Leer Rectas Numéricas (F)

Escriba la pregunta que representa cada recta numérica.

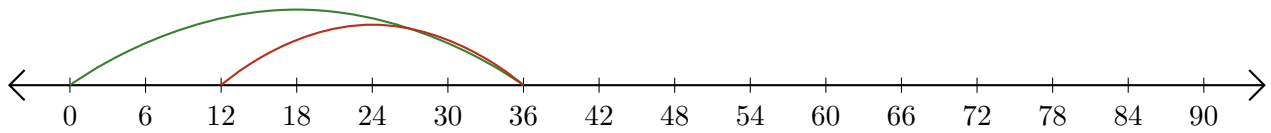
1. $\underline{\quad} - \underline{\quad} = \underline{\quad}$



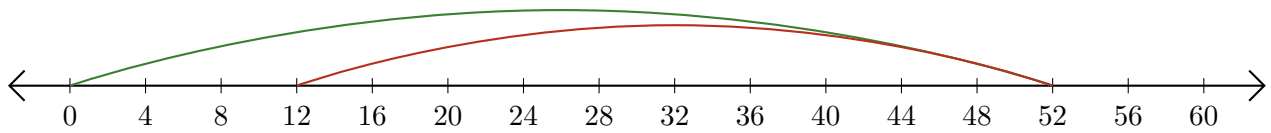
2. $\underline{\quad} - \underline{\quad} = \underline{\quad}$



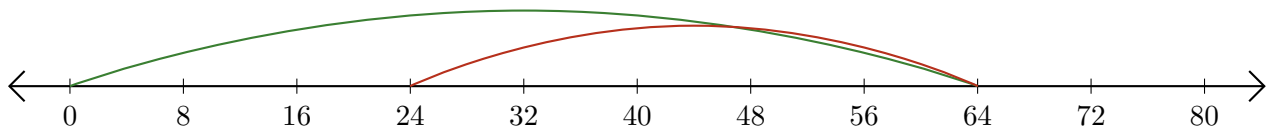
3. $\underline{\quad} - \underline{\quad} = \underline{\quad}$



4. $\underline{\quad} - \underline{\quad} = \underline{\quad}$



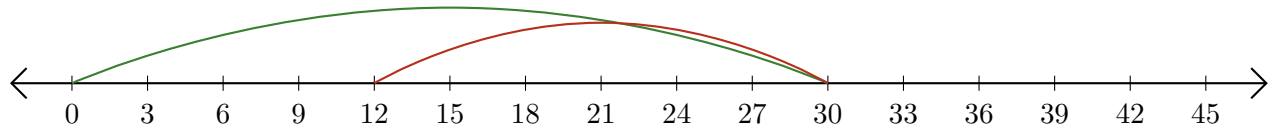
5. $\underline{\quad} - \underline{\quad} = \underline{\quad}$




Leer Rectas Numéricas (F) Respuestas

Escriba la pregunta que representa cada recta numérica.

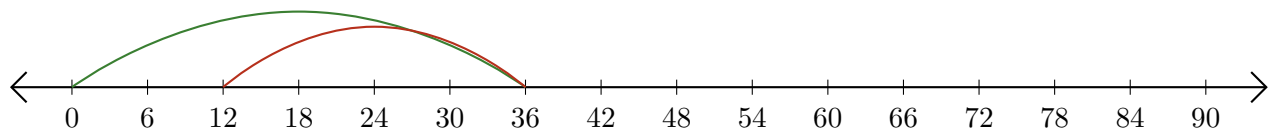
1. $\underline{30} - \underline{18} = \underline{12}$



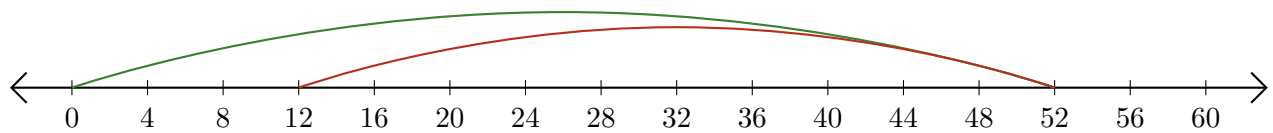
2. $\underline{12} - \underline{9} = \underline{3}$



3. $\underline{36} - \underline{24} = \underline{12}$



4. $\underline{52} - \underline{40} = \underline{12}$



5. $\underline{64} - \underline{40} = \underline{24}$

