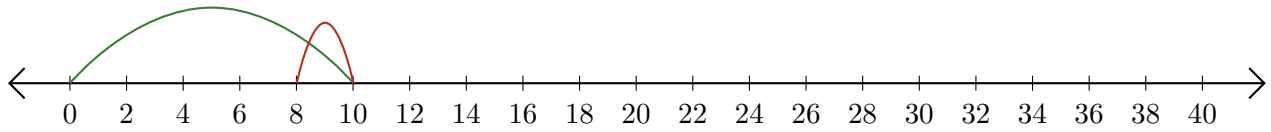


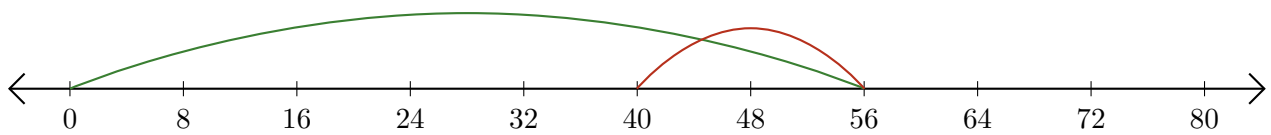
Leer Rectas Numéricas (H)

Escriba la pregunta que representa cada recta numérica.


1. $\underline{\quad} - \underline{\quad} = \underline{\quad}$




2. $\underline{\quad} - \underline{\quad} = \underline{\quad}$



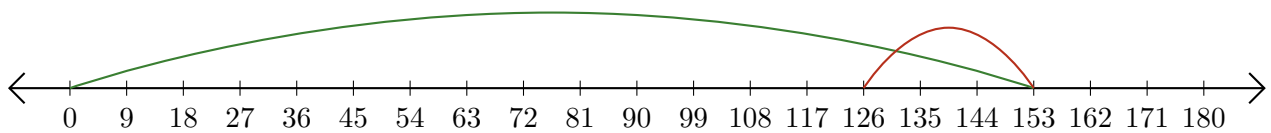
3. $\underline{\quad} - \underline{\quad} = \underline{\quad}$



4. $\underline{\quad} - \underline{\quad} = \underline{\quad}$




5. $\underline{\quad} - \underline{\quad} = \underline{\quad}$



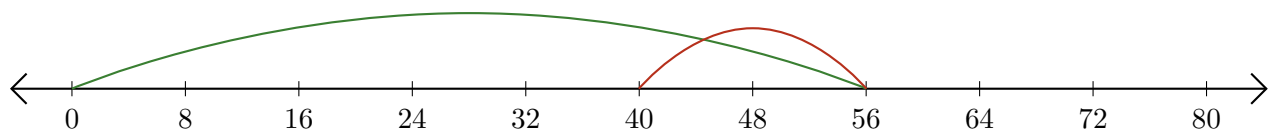
Leer Rectas Numéricas (H) Respuestas

Escriba la pregunta que representa cada recta numérica.

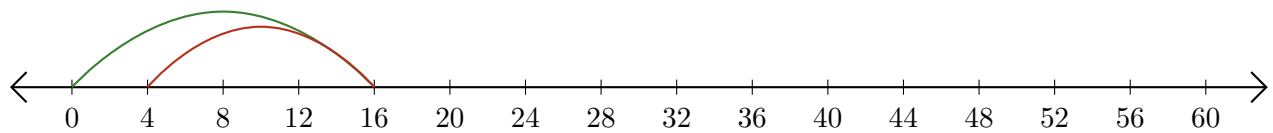
1. $\underline{10} - \underline{2} = \underline{8}$




2. $\underline{56} - \underline{16} = \underline{40}$



3. $\underline{16} - \underline{12} = \underline{4}$



4. $\underline{32} - \underline{8} = \underline{24}$



5. $\underline{153} - \underline{27} = \underline{126}$

