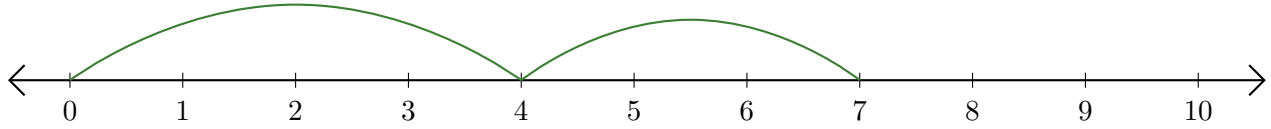


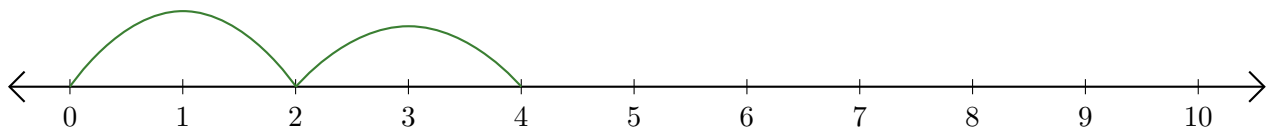
Leer Rectas Numéricas (A)

Escriba la pregunta que representa cada recta numérica.

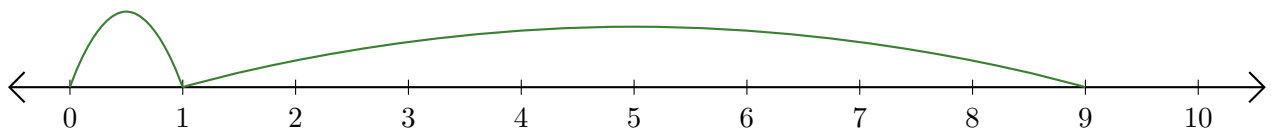
1. $\underline{\quad} + \underline{\quad} = \underline{\quad}$



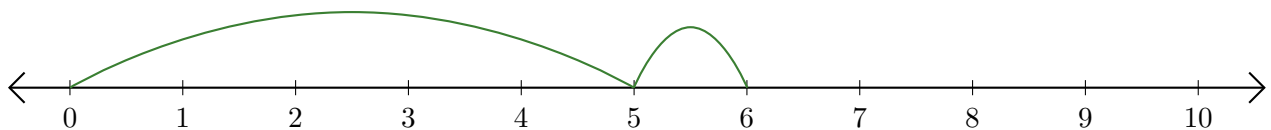
2. $\underline{\quad} + \underline{\quad} = \underline{\quad}$



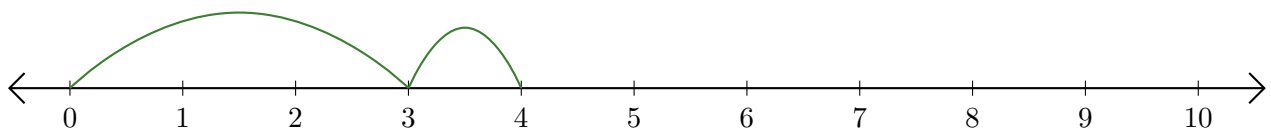
3. $\underline{\quad} + \underline{\quad} = \underline{\quad}$



4. $\underline{\quad} + \underline{\quad} = \underline{\quad}$



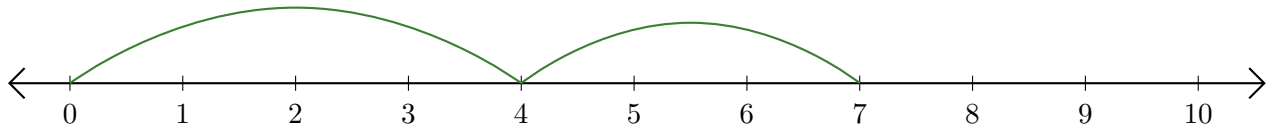
5. $\underline{\quad} + \underline{\quad} = \underline{\quad}$



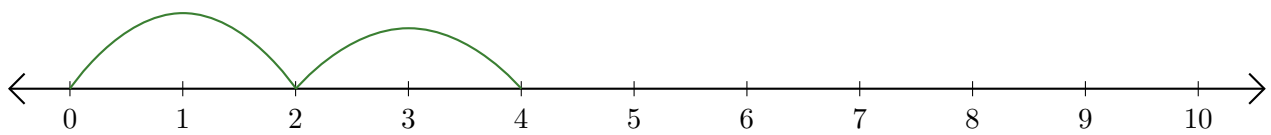
Leer Rectas Numéricas (A) Respuestas

Escriba la pregunta que representa cada recta numérica.

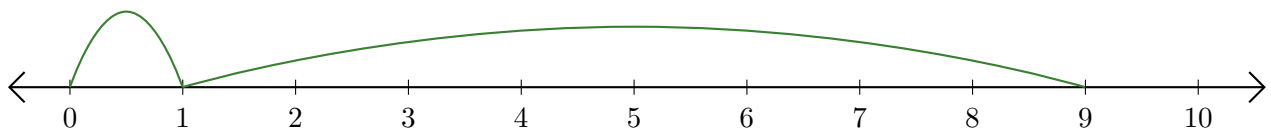
1. $\underline{4} + \underline{3} = \underline{7}$



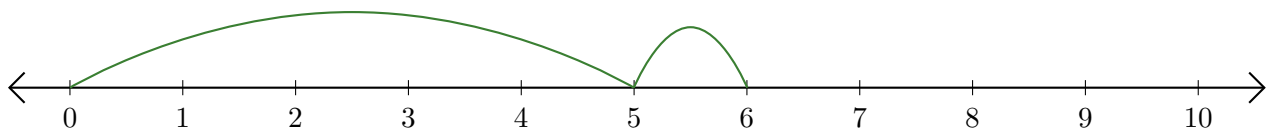
2. $\underline{2} + \underline{2} = \underline{4}$



3. $\underline{1} + \underline{8} = \underline{9}$



4. $\underline{5} + \underline{1} = \underline{6}$



5. $\underline{3} + \underline{1} = \underline{4}$

