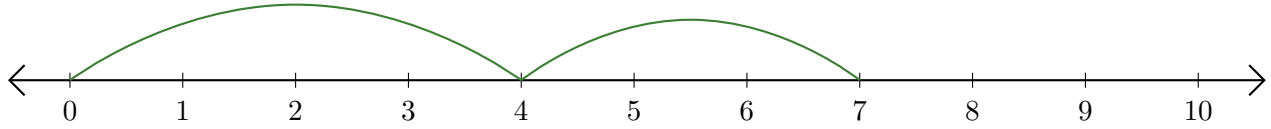


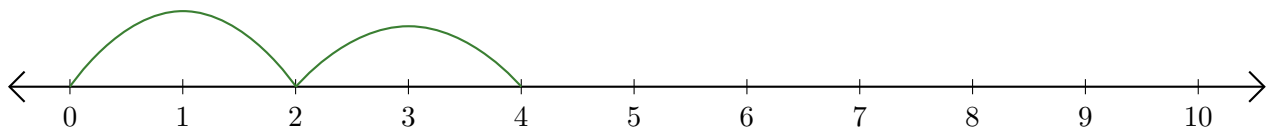
# Leer Rectas Numéricas (A)

Escriba la pregunta que representa cada recta numérica.

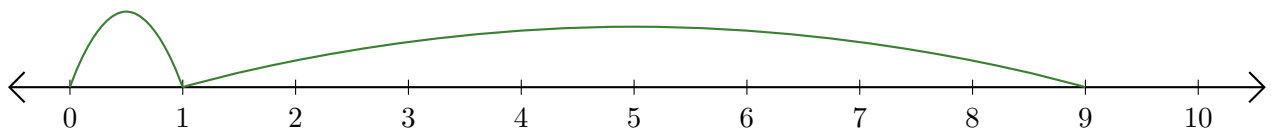
1.  $\underline{\quad} + \underline{\quad} = \underline{\quad}$



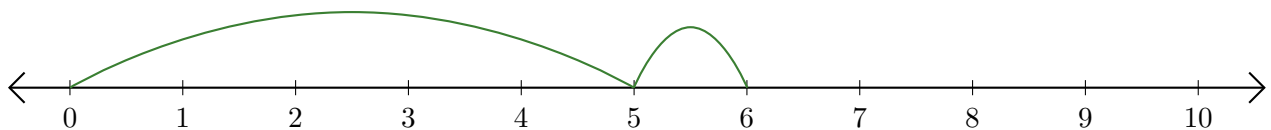
2.  $\underline{\quad} + \underline{\quad} = \underline{\quad}$



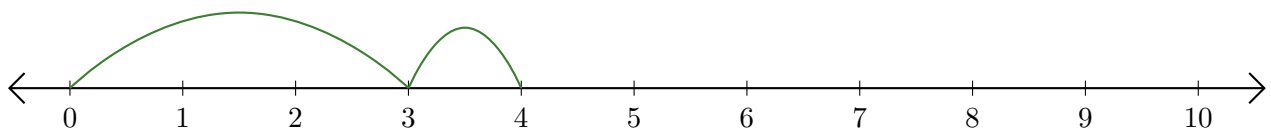
3.  $\underline{\quad} + \underline{\quad} = \underline{\quad}$



4.  $\underline{\quad} + \underline{\quad} = \underline{\quad}$



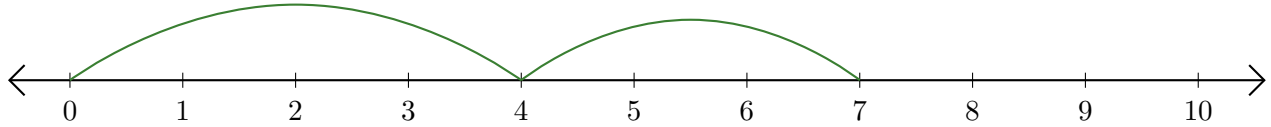
5.  $\underline{\quad} + \underline{\quad} = \underline{\quad}$



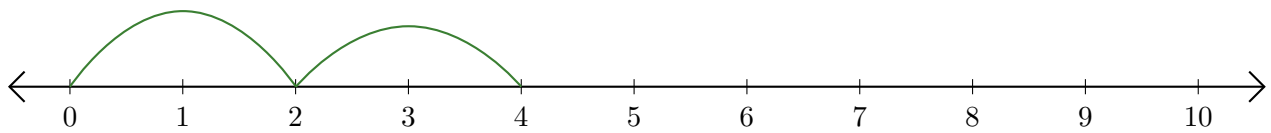
# Leer Rectas Numéricas (A) Respuestas

Escriba la pregunta que representa cada recta numérica.

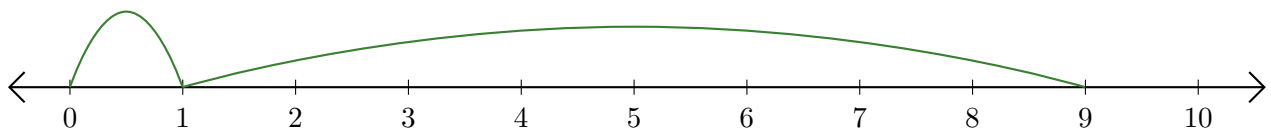
1.  $\underline{4} + \underline{3} = \underline{7}$



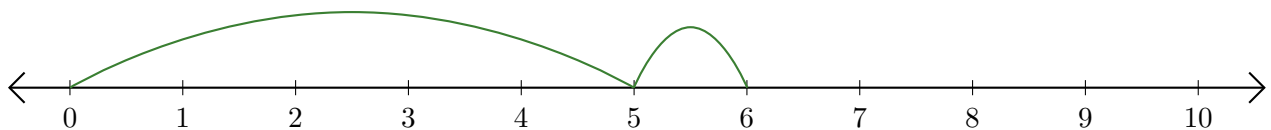
2.  $\underline{2} + \underline{2} = \underline{4}$



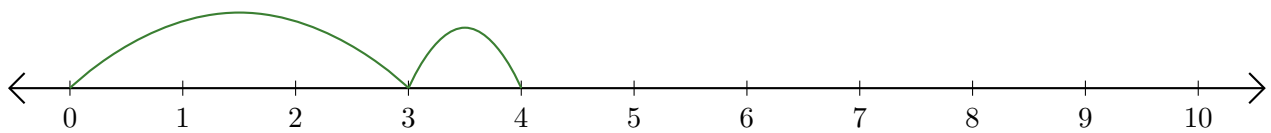
3.  $\underline{1} + \underline{8} = \underline{9}$



4.  $\underline{5} + \underline{1} = \underline{6}$



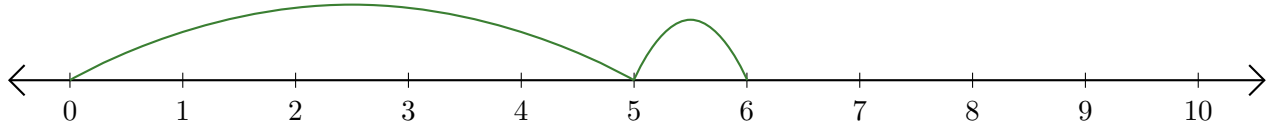
5.  $\underline{3} + \underline{1} = \underline{4}$



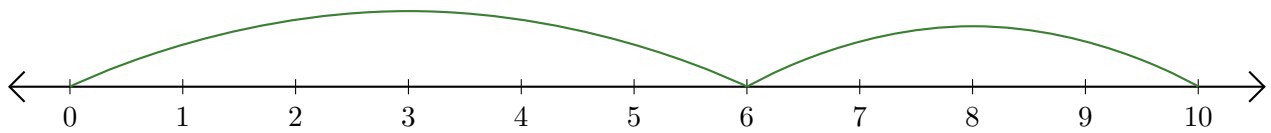
# Leer Rectas Numéricas (B)

Escriba la pregunta que representa cada recta numérica.

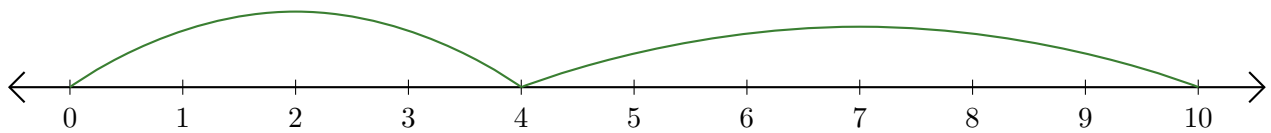
1.  $\underline{\quad} + \underline{\quad} = \underline{\quad}$



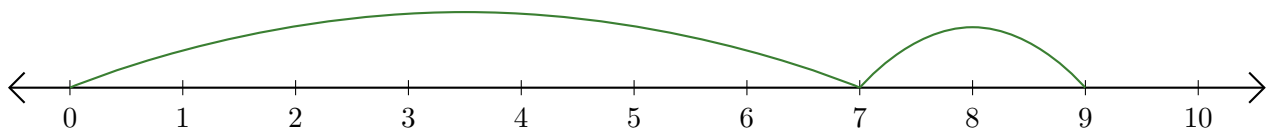
2.  $\underline{\quad} + \underline{\quad} = \underline{\quad}$



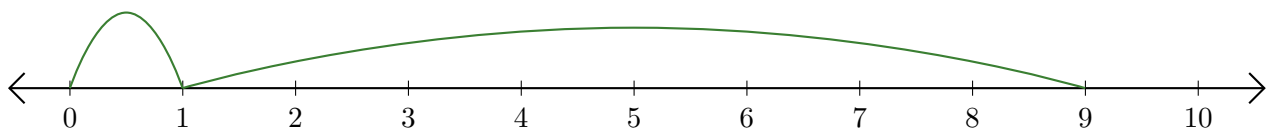
3.  $\underline{\quad} + \underline{\quad} = \underline{\quad}$



4.  $\underline{\quad} + \underline{\quad} = \underline{\quad}$



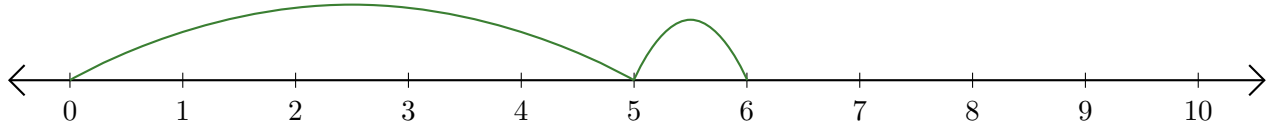
5.  $\underline{\quad} + \underline{\quad} = \underline{\quad}$



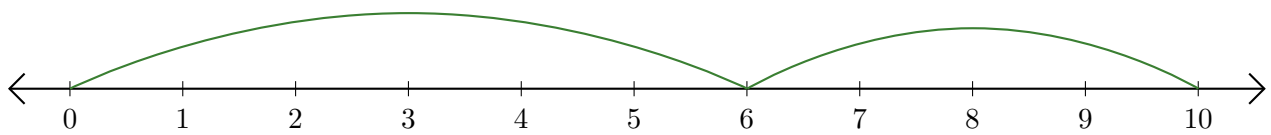
# Leer Rectas Numéricas (B) Respuestas

Escriba la pregunta que representa cada recta numérica.

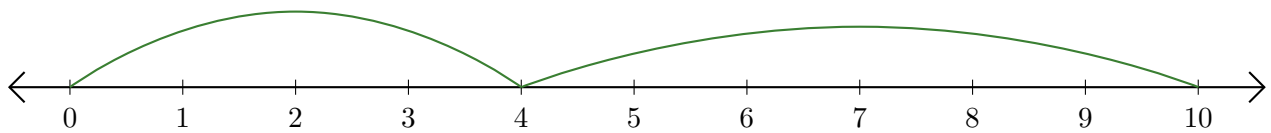
1.  $\underline{5} + \underline{1} = \underline{6}$



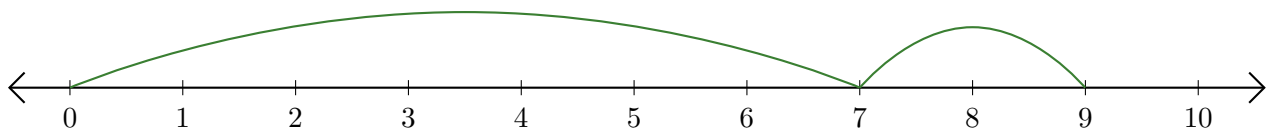
2.  $\underline{6} + \underline{4} = \underline{10}$



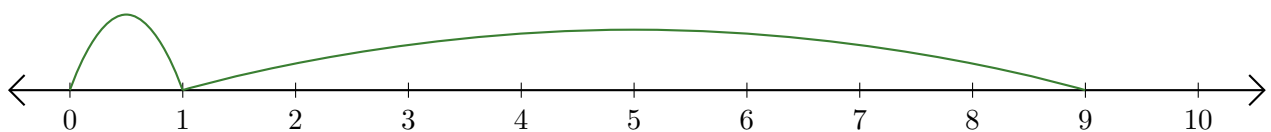
3.  $\underline{4} + \underline{6} = \underline{10}$



4.  $\underline{7} + \underline{2} = \underline{9}$



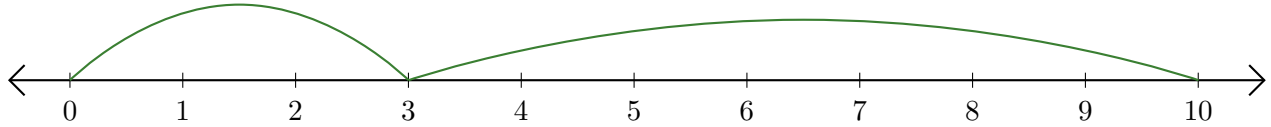
5.  $\underline{1} + \underline{8} = \underline{9}$



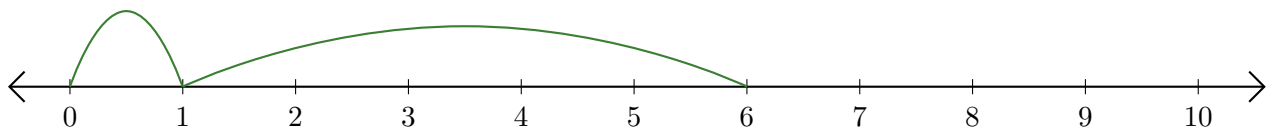
# Leer Rectas Numéricas (C)

Escriba la pregunta que representa cada recta numérica.

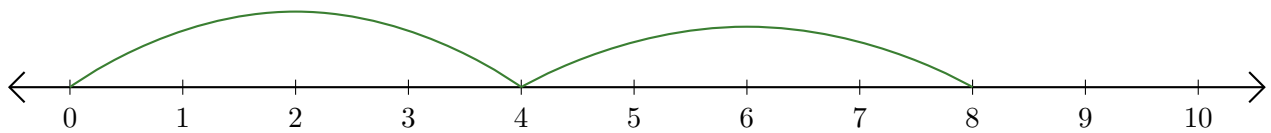
1.  $\underline{\quad} + \underline{\quad} = \underline{\quad}$



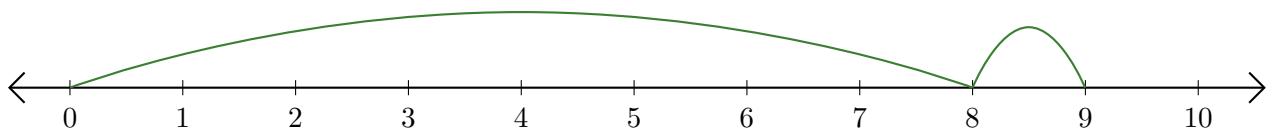
2.  $\underline{\quad} + \underline{\quad} = \underline{\quad}$



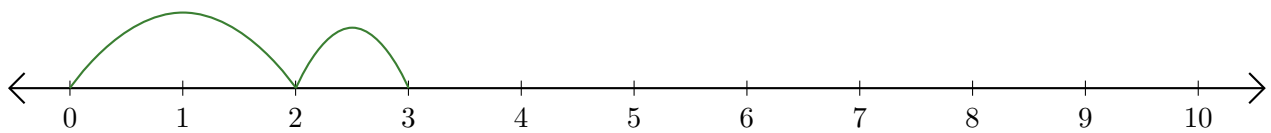
3.  $\underline{\quad} + \underline{\quad} = \underline{\quad}$



4.  $\underline{\quad} + \underline{\quad} = \underline{\quad}$



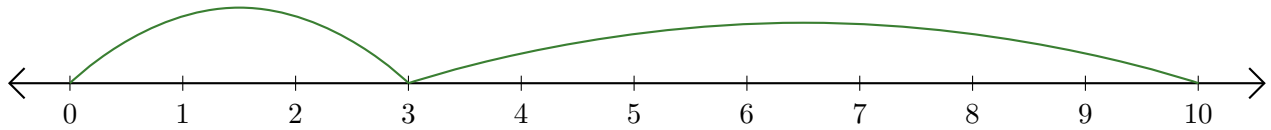
5.  $\underline{\quad} + \underline{\quad} = \underline{\quad}$



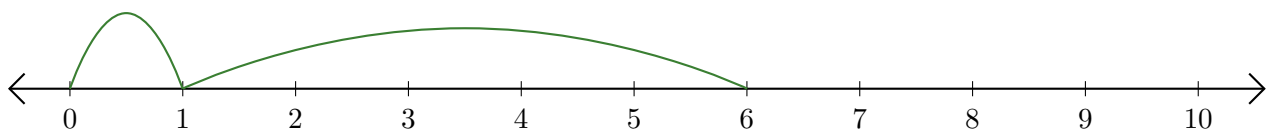
# Leer Rectas Numéricas (C) Respuestas

Escriba la pregunta que representa cada recta numérica.

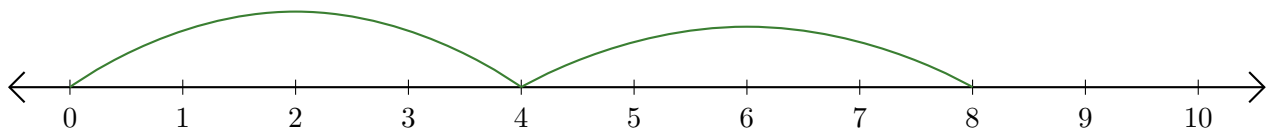
1.  $\underline{3} + \underline{7} = \underline{10}$



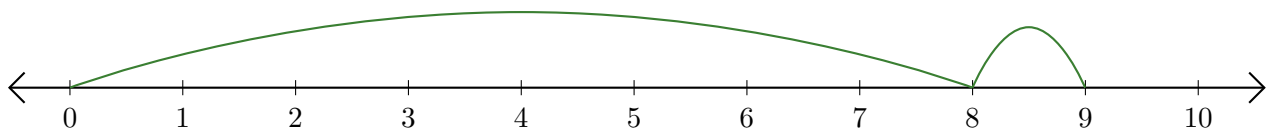
2.  $\underline{1} + \underline{5} = \underline{6}$



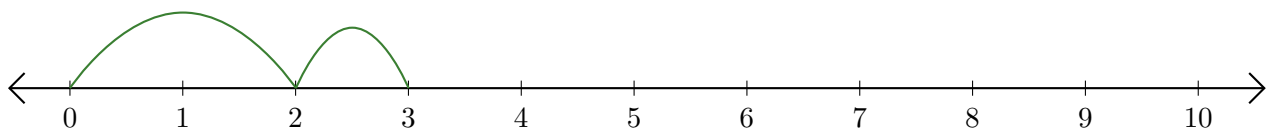
3.  $\underline{4} + \underline{4} = \underline{8}$



4.  $\underline{8} + \underline{1} = \underline{9}$



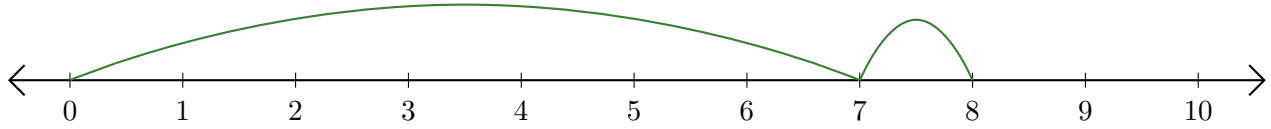
5.  $\underline{2} + \underline{1} = \underline{3}$



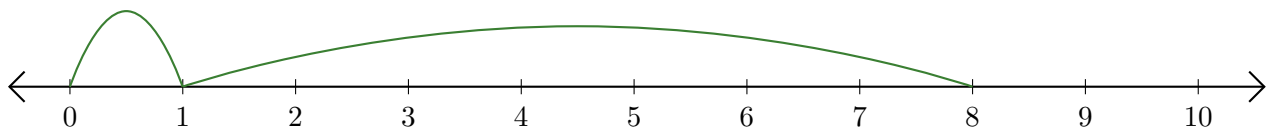
# Leer Rectas Numéricas (D)

Escriba la pregunta que representa cada recta numérica.

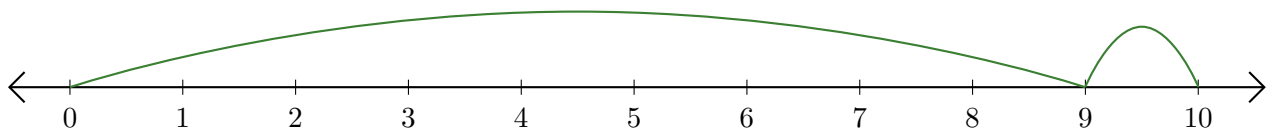
1.  $\underline{\quad} + \underline{\quad} = \underline{\quad}$



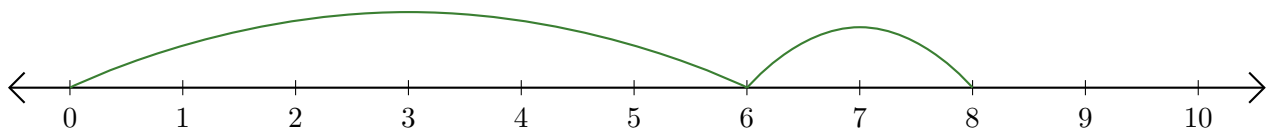
2.  $\underline{\quad} + \underline{\quad} = \underline{\quad}$



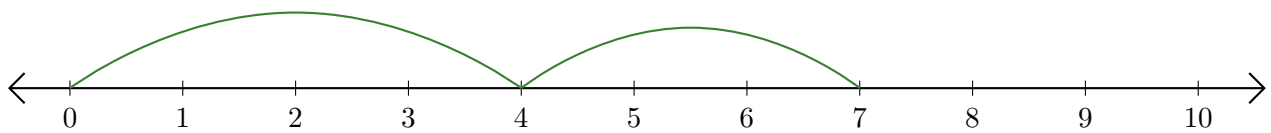
3.  $\underline{\quad} + \underline{\quad} = \underline{\quad}$



4.  $\underline{\quad} + \underline{\quad} = \underline{\quad}$



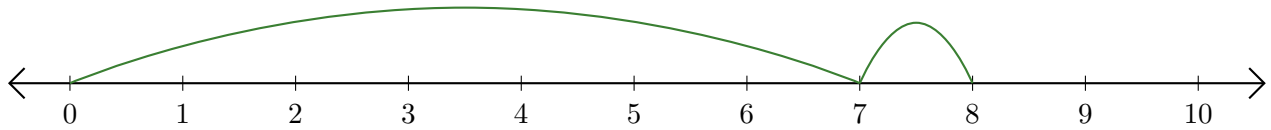
5.  $\underline{\quad} + \underline{\quad} = \underline{\quad}$



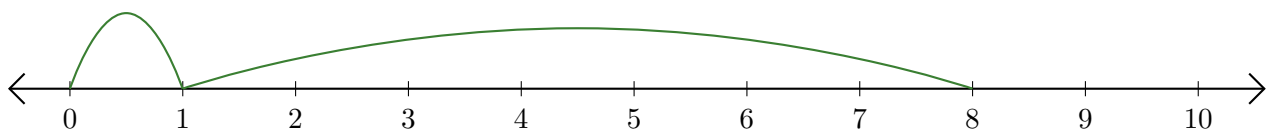
# Leer Rectas Numéricas (D) Respuestas

Escriba la pregunta que representa cada recta numérica.

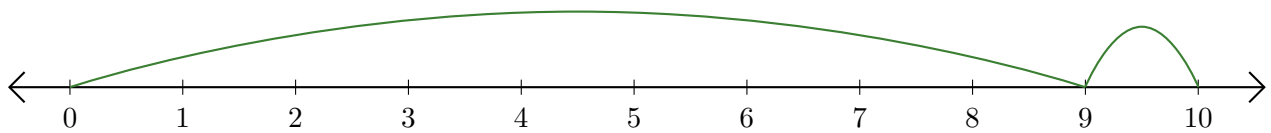
1.  $\underline{7} + \underline{1} = \underline{8}$



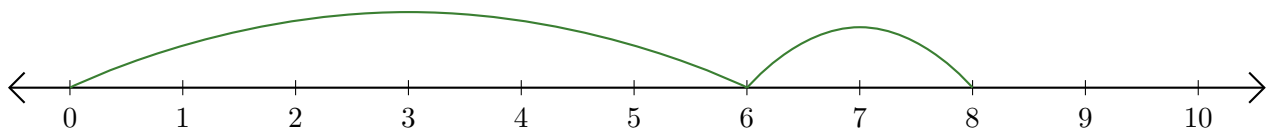
2.  $\underline{1} + \underline{7} = \underline{8}$



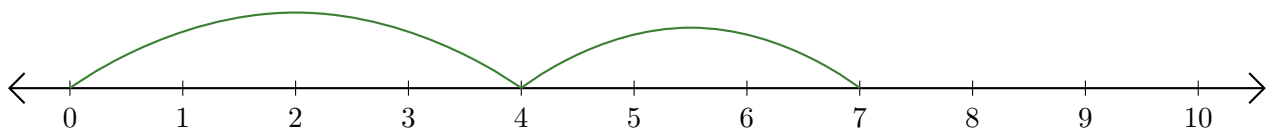
3.  $\underline{9} + \underline{1} = \underline{10}$



4.  $\underline{6} + \underline{2} = \underline{8}$



5.  $\underline{4} + \underline{3} = \underline{7}$

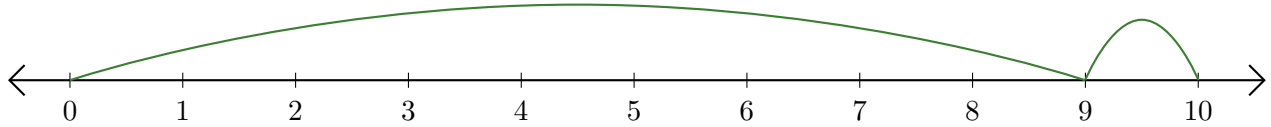




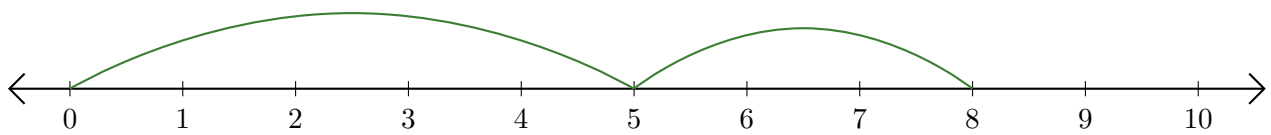
# Leer Rectas Numéricas (E)

Escriba la pregunta que representa cada recta numérica.

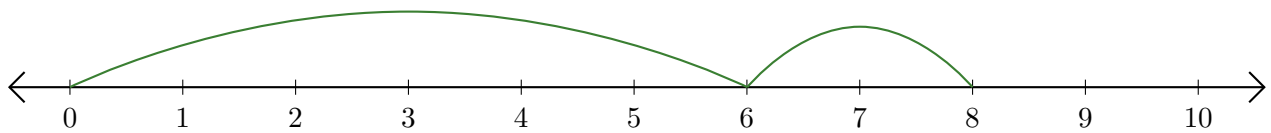
1.  $\underline{\quad} + \underline{\quad} = \underline{\quad}$



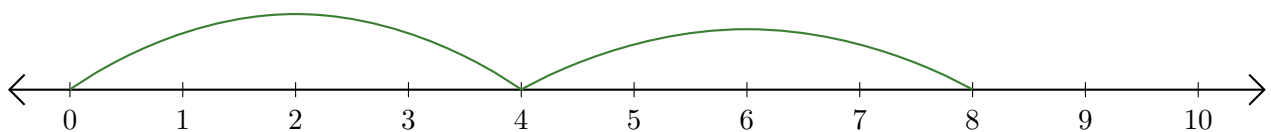
2.  $\underline{\quad} + \underline{\quad} = \underline{\quad}$



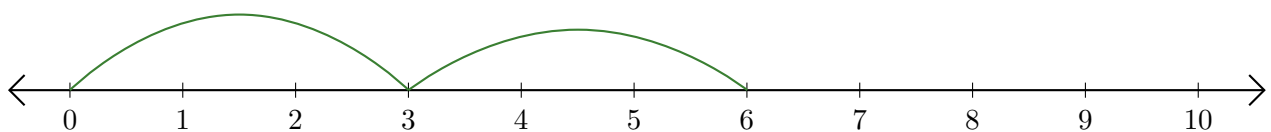
3.  $\underline{\quad} + \underline{\quad} = \underline{\quad}$



4.  $\underline{\quad} + \underline{\quad} = \underline{\quad}$



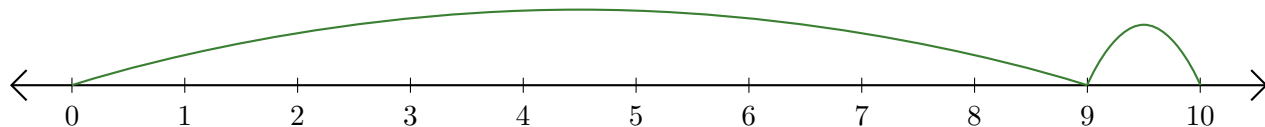
5.  $\underline{\quad} + \underline{\quad} = \underline{\quad}$



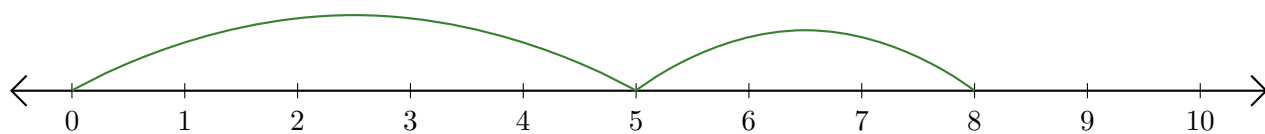
# Leer Rectas Numéricas (E) Respuestas

Escriba la pregunta que representa cada recta numérica.

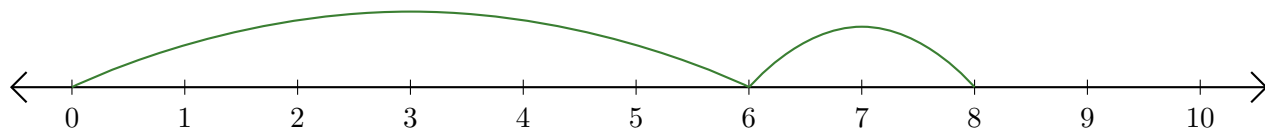
1.  $\underline{9} + \underline{1} = \underline{10}$



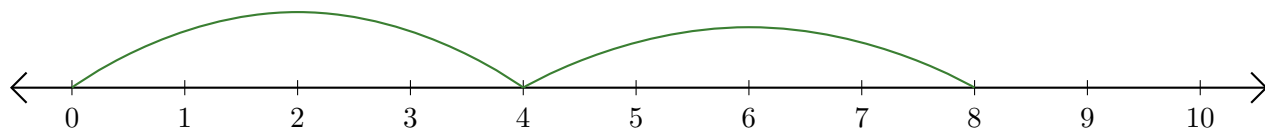
2.  $\underline{5} + \underline{3} = \underline{8}$



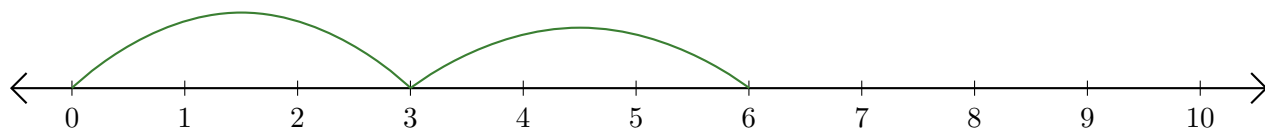
3.  $\underline{6} + \underline{2} = \underline{8}$



4.  $\underline{4} + \underline{4} = \underline{8}$



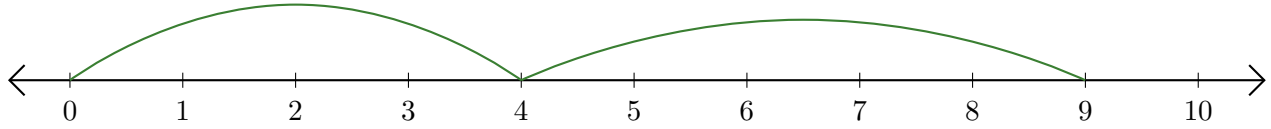
5.  $\underline{3} + \underline{3} = \underline{6}$



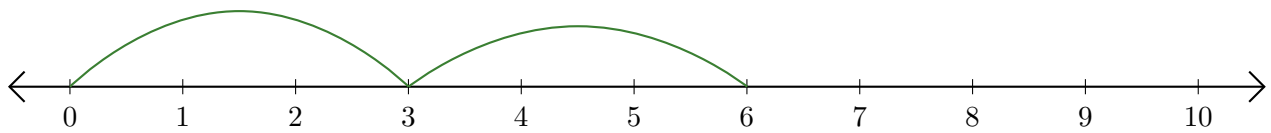
# Leer Rectas Numéricas (F)

Escriba la pregunta que representa cada recta numérica.

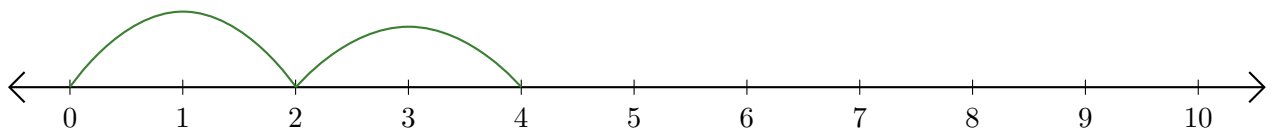
1.  $\underline{\quad} + \underline{\quad} = \underline{\quad}$



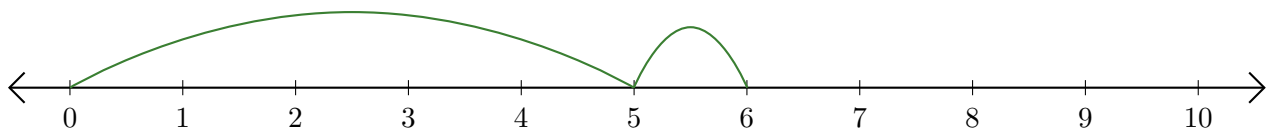
2.  $\underline{\quad} + \underline{\quad} = \underline{\quad}$



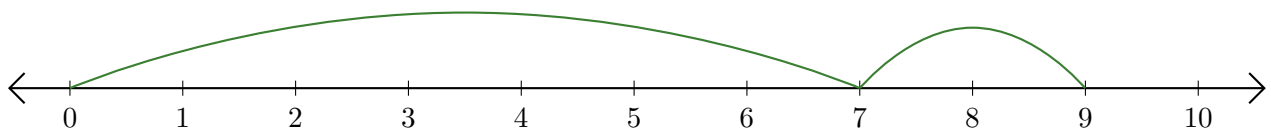
3.  $\underline{\quad} + \underline{\quad} = \underline{\quad}$



4.  $\underline{\quad} + \underline{\quad} = \underline{\quad}$



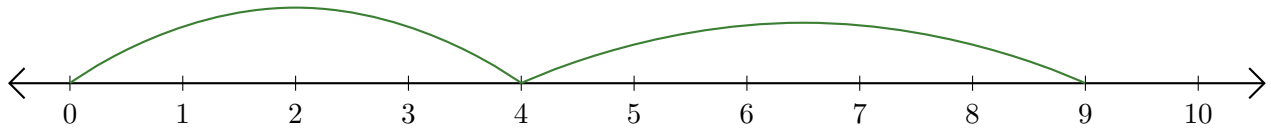
5.  $\underline{\quad} + \underline{\quad} = \underline{\quad}$



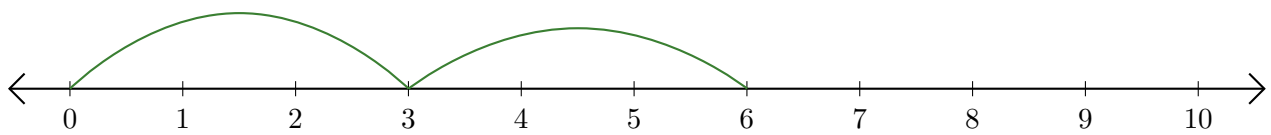
# Leer Rectas Numéricas (F) Respuestas

Escriba la pregunta que representa cada recta numérica.

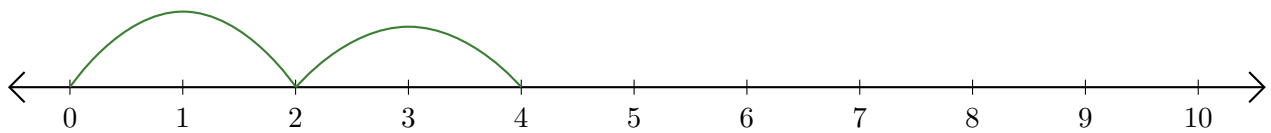
1.  $\underline{4} + \underline{5} = \underline{9}$



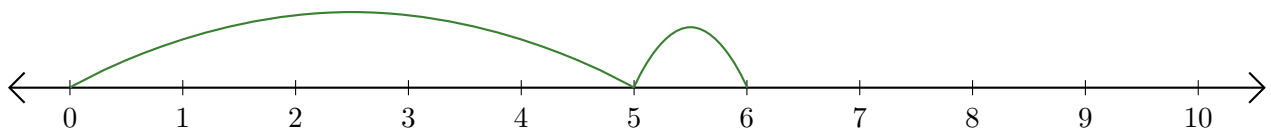
2.  $\underline{3} + \underline{3} = \underline{6}$



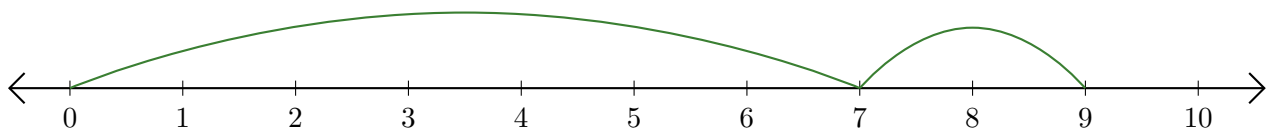
3.  $\underline{2} + \underline{2} = \underline{4}$



4.  $\underline{5} + \underline{1} = \underline{6}$



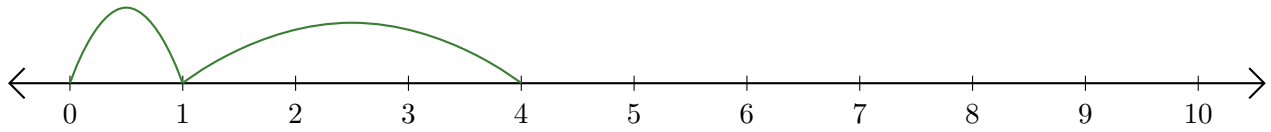
5.  $\underline{7} + \underline{2} = \underline{9}$



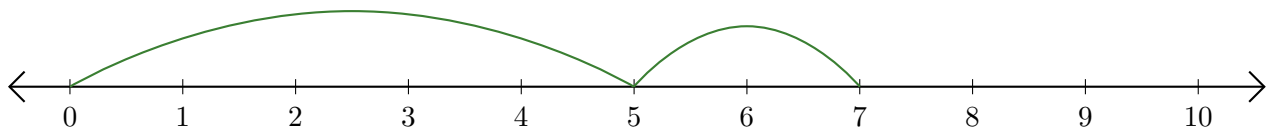
# Leer Rectas Numéricas (G)

Escriba la pregunta que representa cada recta numérica.

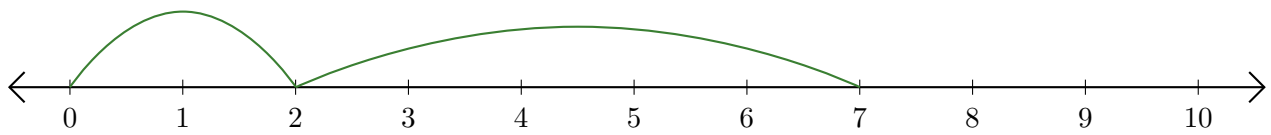
1.  $\underline{\quad} + \underline{\quad} = \underline{\quad}$



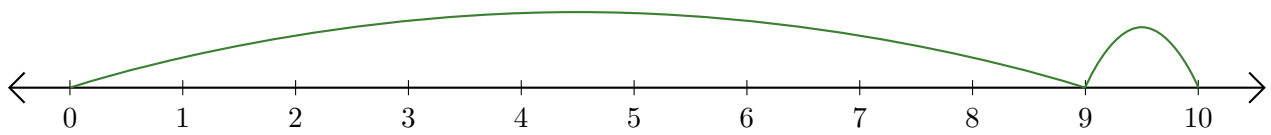
2.  $\underline{\quad} + \underline{\quad} = \underline{\quad}$



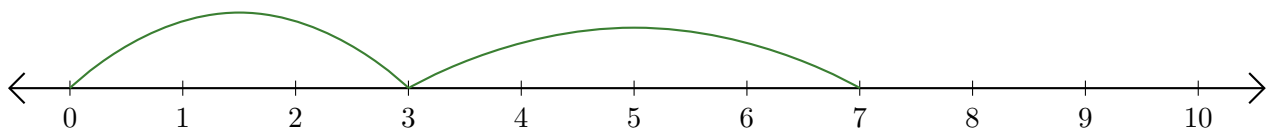
3.  $\underline{\quad} + \underline{\quad} = \underline{\quad}$



4.  $\underline{\quad} + \underline{\quad} = \underline{\quad}$



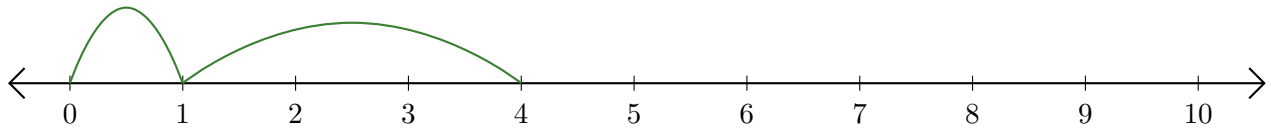
5.  $\underline{\quad} + \underline{\quad} = \underline{\quad}$



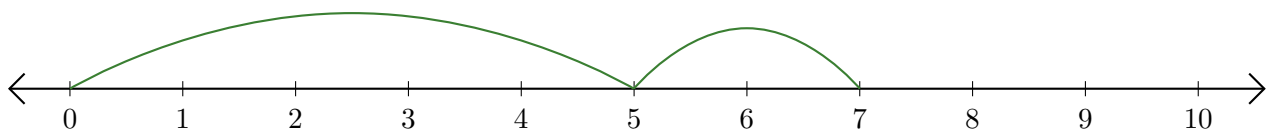
# Leer Rectas Numéricas (G) Respuestas

Escriba la pregunta que representa cada recta numérica.

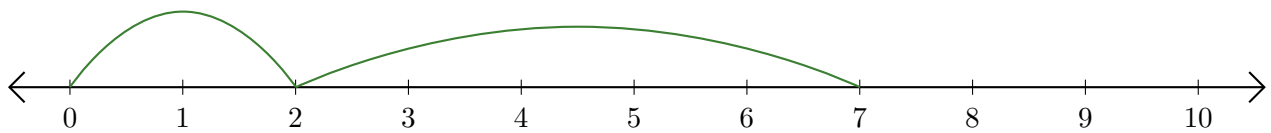
1.  $\underline{1} + \underline{3} = \underline{4}$



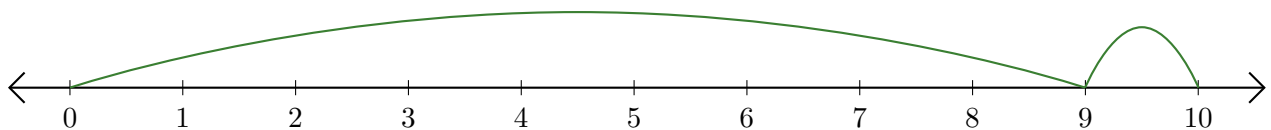
2.  $\underline{5} + \underline{2} = \underline{7}$



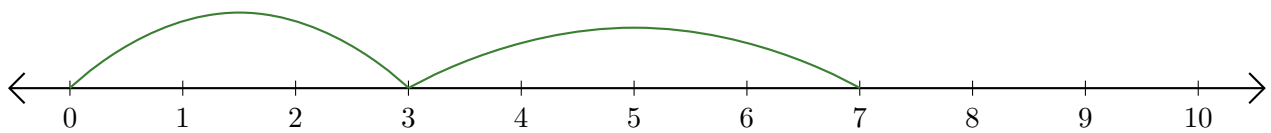
3.  $\underline{2} + \underline{5} = \underline{7}$



4.  $\underline{9} + \underline{1} = \underline{10}$



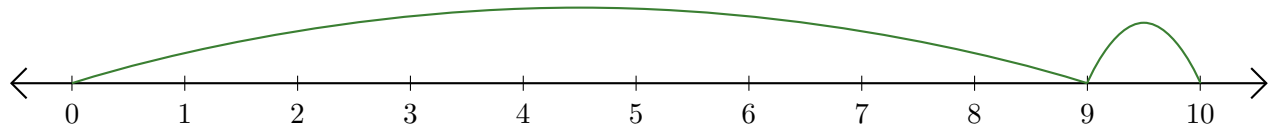
5.  $\underline{3} + \underline{4} = \underline{7}$



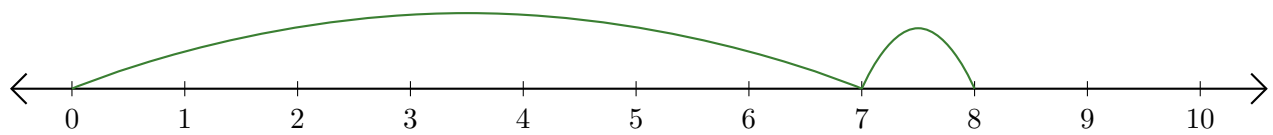
# Leer Rectas Numéricas (H)

Escriba la pregunta que representa cada recta numérica.

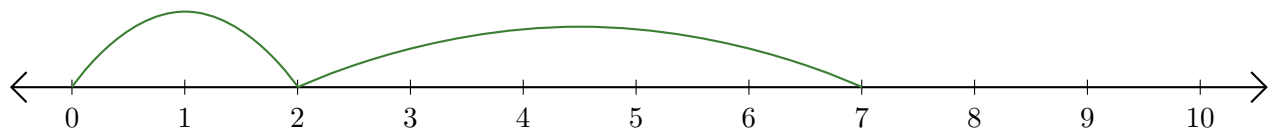
1.  $\underline{\quad} + \underline{\quad} = \underline{\quad}$



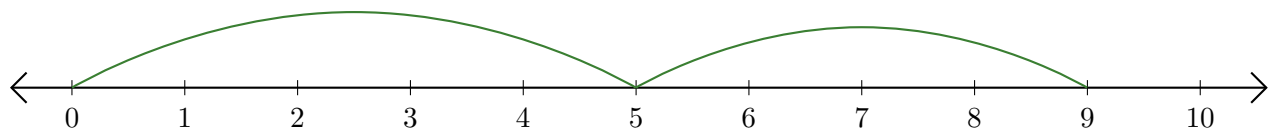
2.  $\underline{\quad} + \underline{\quad} = \underline{\quad}$



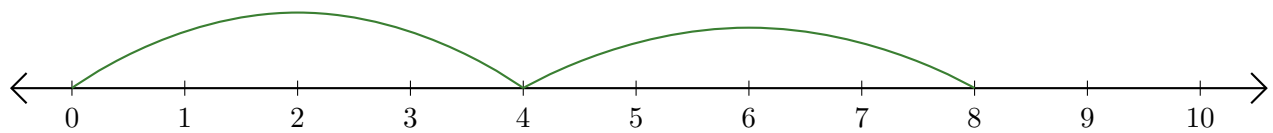
3.  $\underline{\quad} + \underline{\quad} = \underline{\quad}$



4.  $\underline{\quad} + \underline{\quad} = \underline{\quad}$



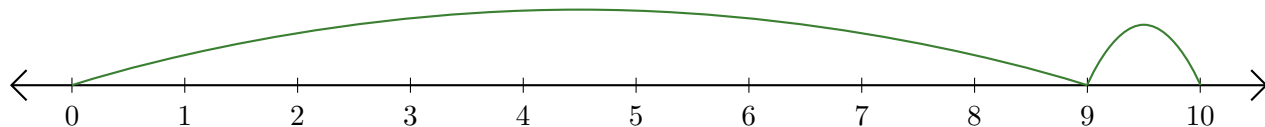
5.  $\underline{\quad} + \underline{\quad} = \underline{\quad}$



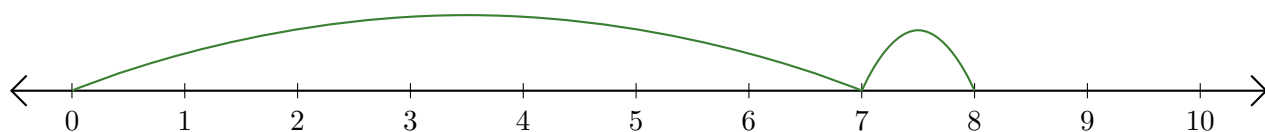
# Leer Rectas Numéricas (H) Respuestas

Escriba la pregunta que representa cada recta numérica.

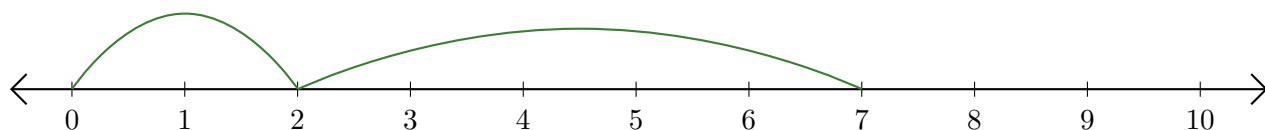
1.  $\underline{9} + \underline{1} = \underline{10}$



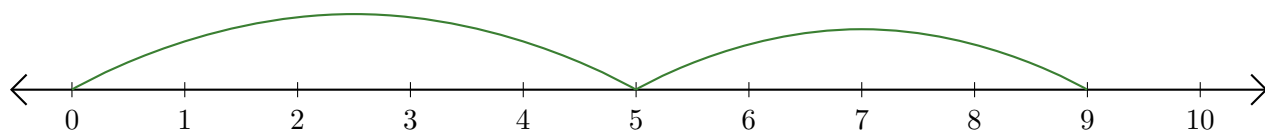
2.  $\underline{7} + \underline{1} = \underline{8}$



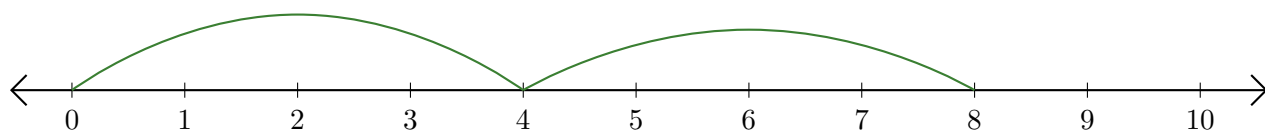
3.  $\underline{2} + \underline{5} = \underline{7}$



4.  $\underline{5} + \underline{4} = \underline{9}$



5.  $\underline{4} + \underline{4} = \underline{8}$

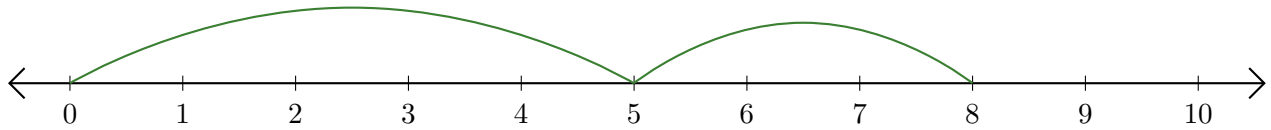




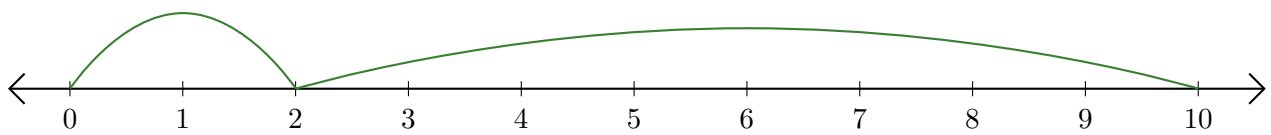
# Leer Rectas Numéricas (I)

Escriba la pregunta que representa cada recta numérica.

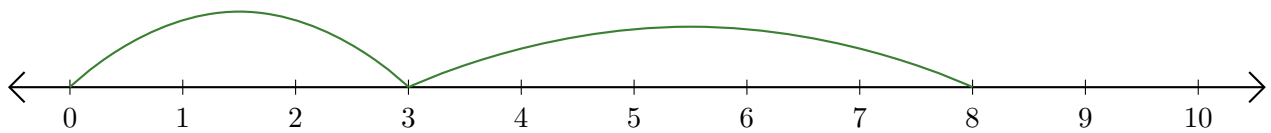
1.  $\underline{\quad} + \underline{\quad} = \underline{\quad}$



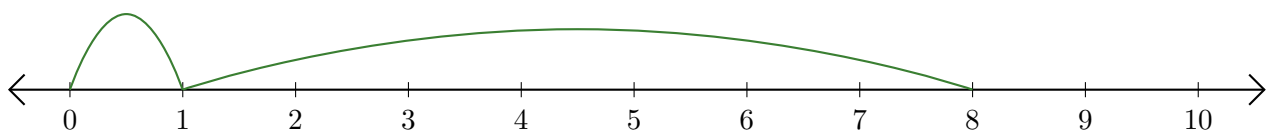
2.  $\underline{\quad} + \underline{\quad} = \underline{\quad}$



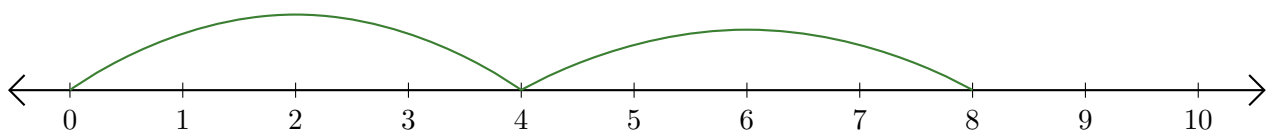
3.  $\underline{\quad} + \underline{\quad} = \underline{\quad}$



4.  $\underline{\quad} + \underline{\quad} = \underline{\quad}$



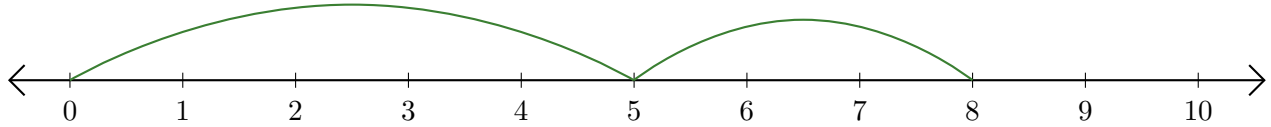
5.  $\underline{\quad} + \underline{\quad} = \underline{\quad}$



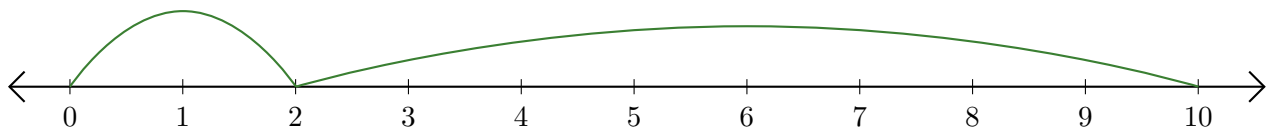
# Leer Rectas Numéricas (I) Respuestas

Escriba la pregunta que representa cada recta numérica.

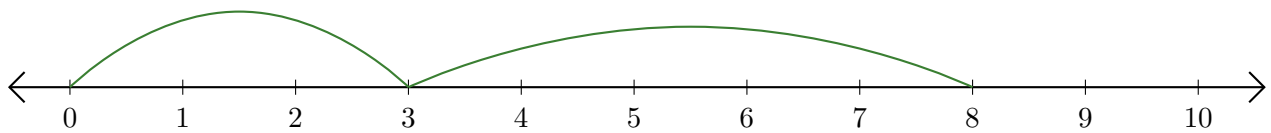
1.  $\underline{5} + \underline{3} = \underline{8}$



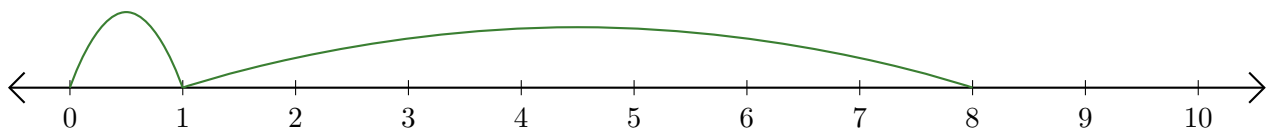
2.  $\underline{2} + \underline{8} = \underline{10}$



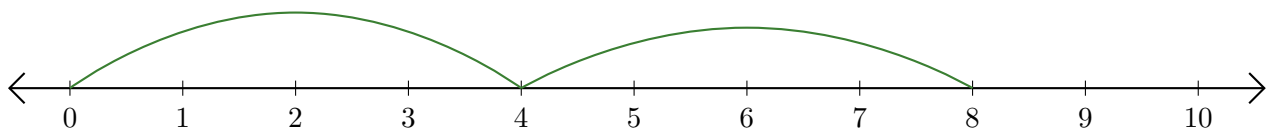
3.  $\underline{3} + \underline{5} = \underline{8}$



4.  $\underline{1} + \underline{7} = \underline{8}$



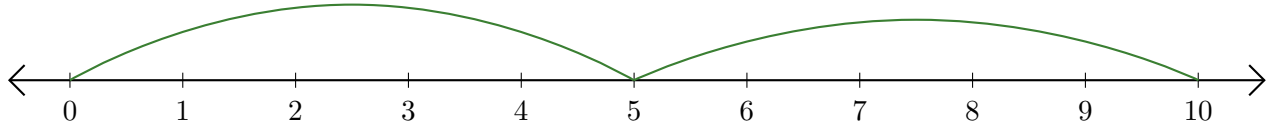
5.  $\underline{4} + \underline{4} = \underline{8}$



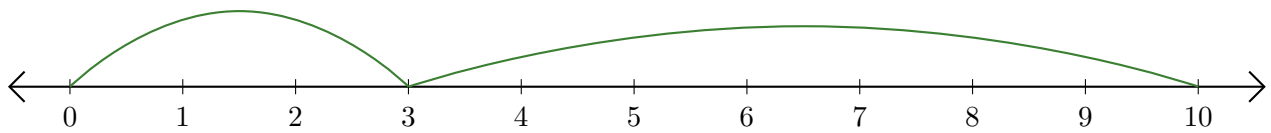
# Leer Rectas Numéricas (J)

Escriba la pregunta que representa cada recta numérica.

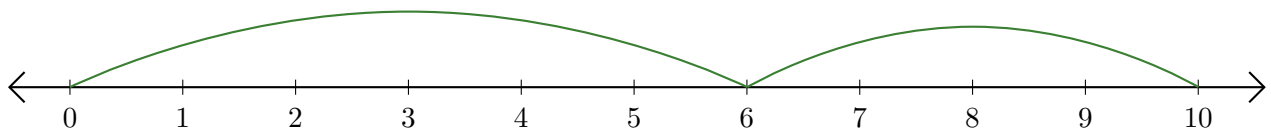
1.  $\underline{\quad} + \underline{\quad} = \underline{\quad}$



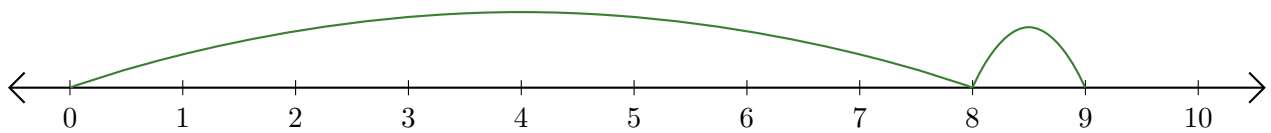
2.  $\underline{\quad} + \underline{\quad} = \underline{\quad}$



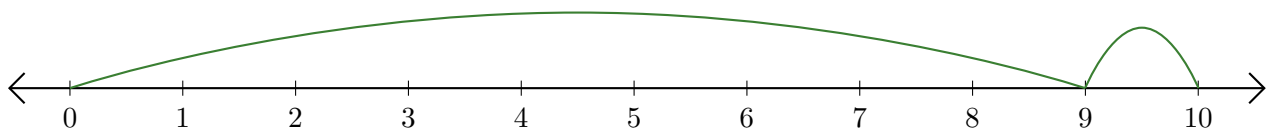
3.  $\underline{\quad} + \underline{\quad} = \underline{\quad}$



4.  $\underline{\quad} + \underline{\quad} = \underline{\quad}$



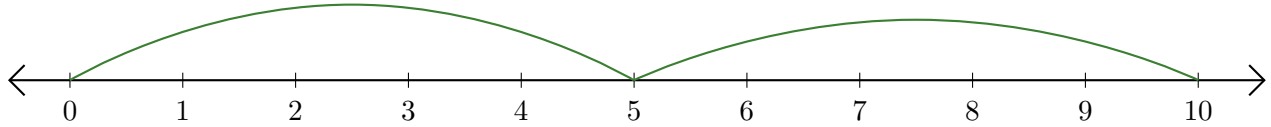
5.  $\underline{\quad} + \underline{\quad} = \underline{\quad}$



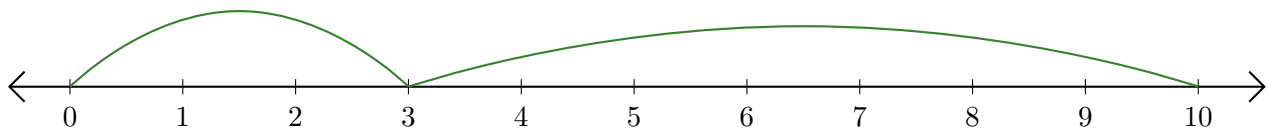
# Leer Rectas Numéricas (J) Respuestas

Escriba la pregunta que representa cada recta numérica.

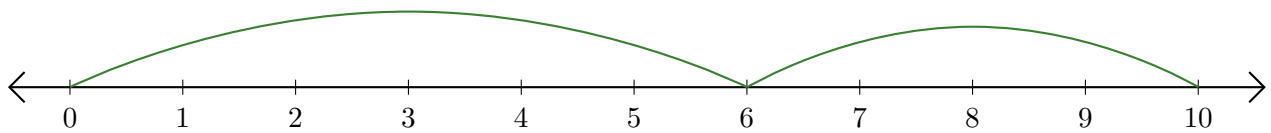
1.  $\underline{5} + \underline{5} = \underline{10}$



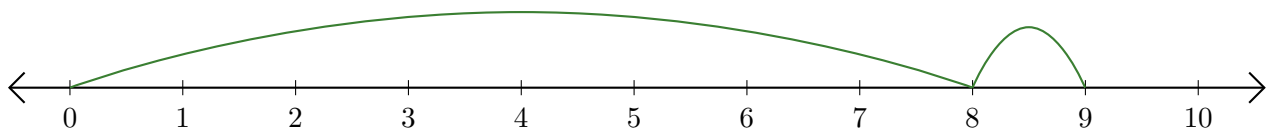
2.  $\underline{3} + \underline{7} = \underline{10}$



3.  $\underline{6} + \underline{4} = \underline{10}$



4.  $\underline{8} + \underline{1} = \underline{9}$



5.  $\underline{9} + \underline{1} = \underline{10}$

