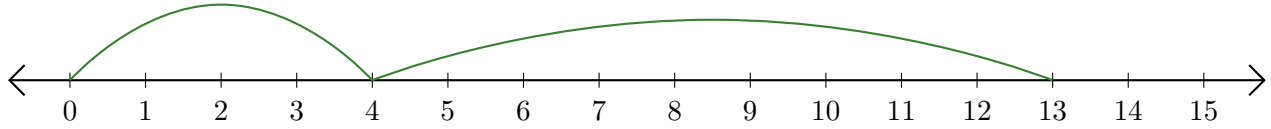


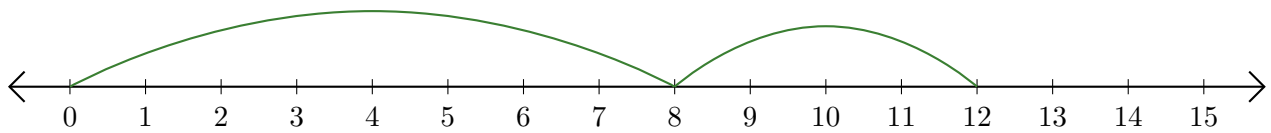
# Leer Rectas Numéricas (D)

Escriba la pregunta que representa cada recta numérica.

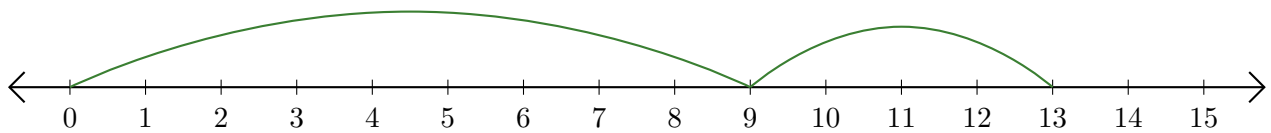
1.  $\underline{\quad} + \underline{\quad} = \underline{\quad}$



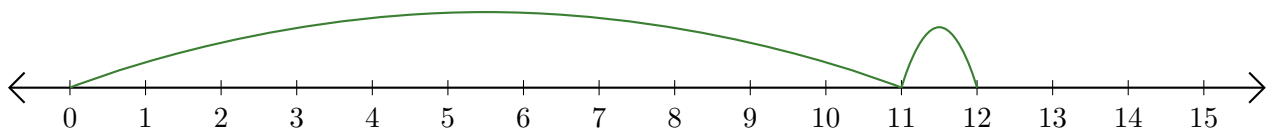
2.  $\underline{\quad} + \underline{\quad} = \underline{\quad}$



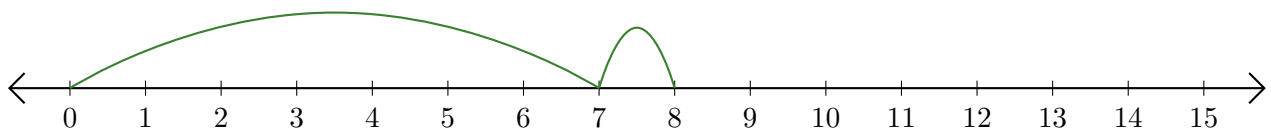
3.  $\underline{\quad} + \underline{\quad} = \underline{\quad}$



4.  $\underline{\quad} + \underline{\quad} = \underline{\quad}$



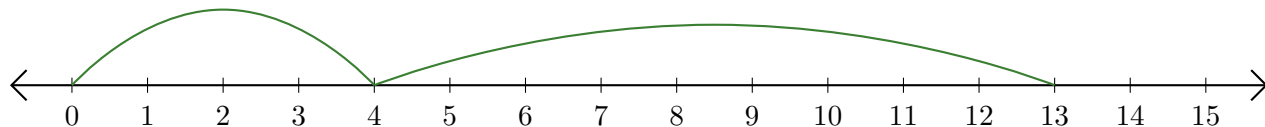
5.  $\underline{\quad} + \underline{\quad} = \underline{\quad}$



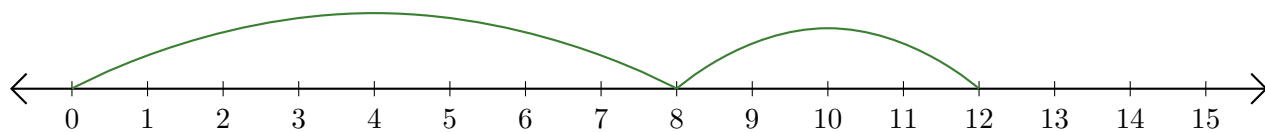
# Leer Rectas Numéricas (D) Respuestas

Escriba la pregunta que representa cada recta numérica.

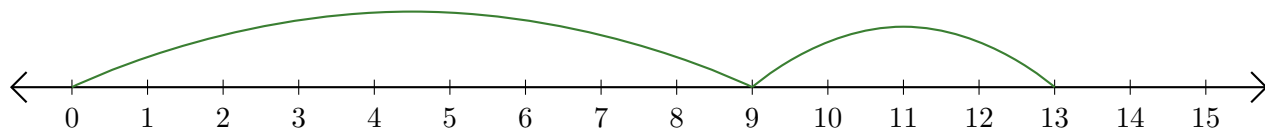
1.  $\underline{4} + \underline{9} = \underline{13}$



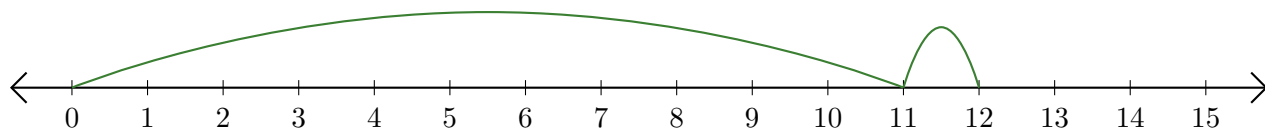
2.  $\underline{8} + \underline{4} = \underline{12}$



3.  $\underline{9} + \underline{4} = \underline{13}$



4.  $\underline{11} + \underline{1} = \underline{12}$



5.  $\underline{7} + \underline{1} = \underline{8}$

