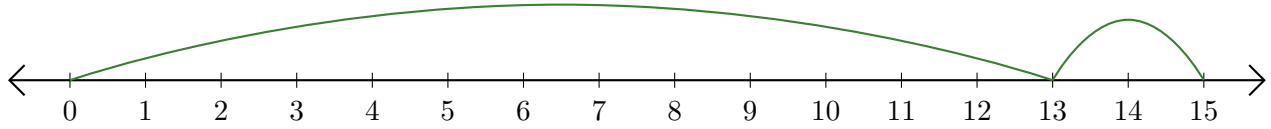


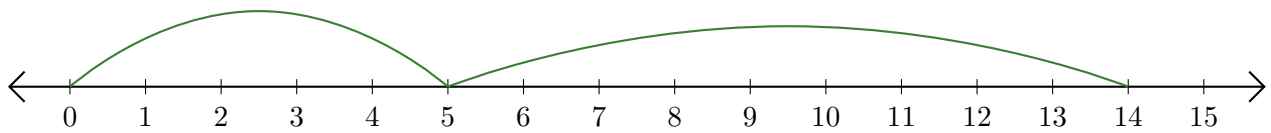
# Leer Rectas Numéricas (H)

Escriba la pregunta que representa cada recta numérica.

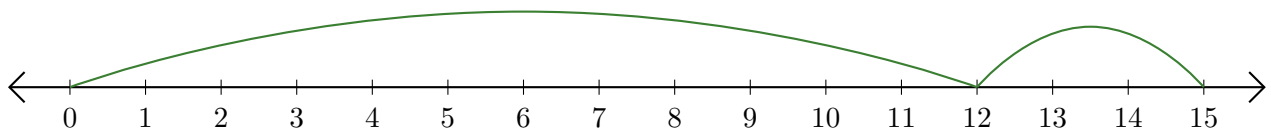
1.  $\underline{\quad} + \underline{\quad} = \underline{\quad}$



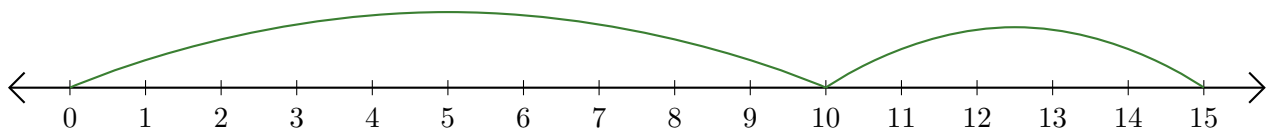
2.  $\underline{\quad} + \underline{\quad} = \underline{\quad}$



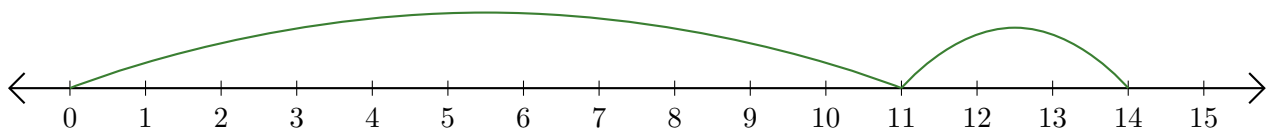
3.  $\underline{\quad} + \underline{\quad} = \underline{\quad}$



4.  $\underline{\quad} + \underline{\quad} = \underline{\quad}$



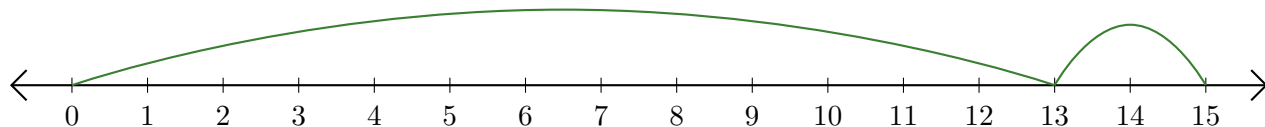
5.  $\underline{\quad} + \underline{\quad} = \underline{\quad}$



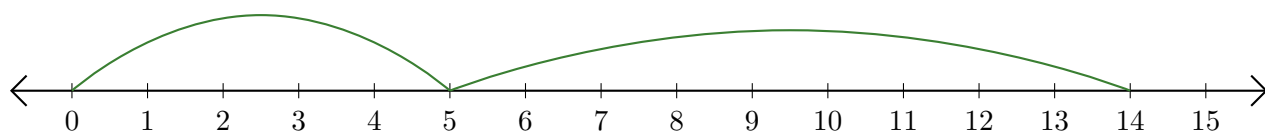
# Leer Rectas Numéricas (H) Respuestas

Escriba la pregunta que representa cada recta numérica.

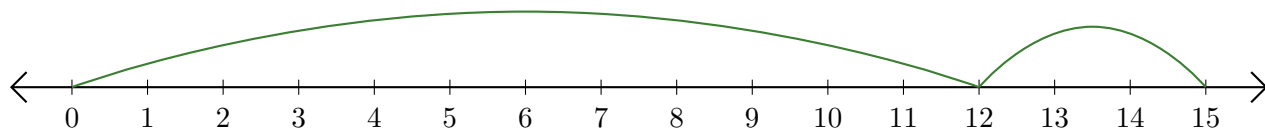
1.  $\underline{13} + \underline{2} = \underline{15}$



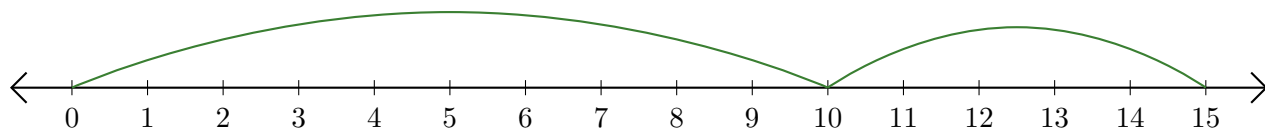
2.  $\underline{5} + \underline{9} = \underline{14}$



3.  $\underline{12} + \underline{3} = \underline{15}$



4.  $\underline{10} + \underline{5} = \underline{15}$



5.  $\underline{11} + \underline{3} = \underline{14}$

