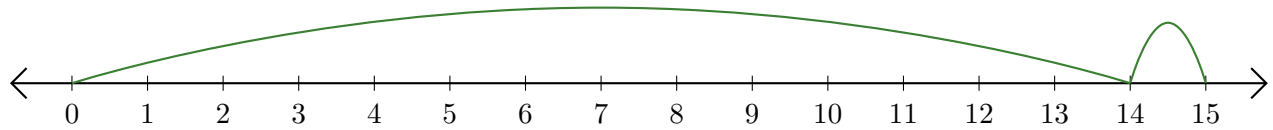


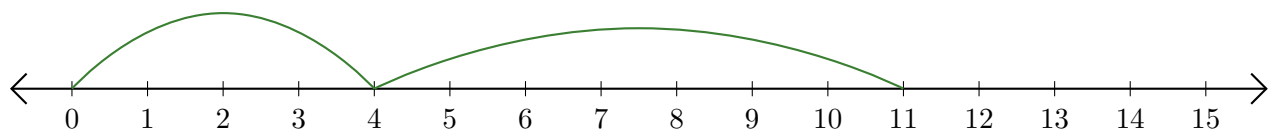
Leer Rectas Numéricas (I)

Escriba la pregunta que representa cada recta numérica.

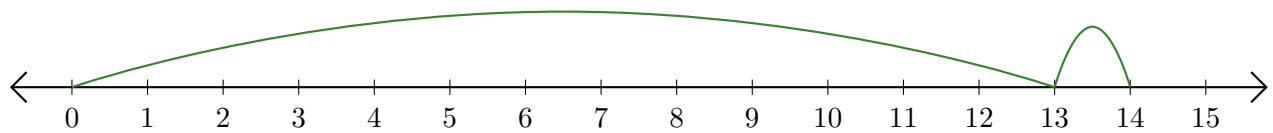
1. $\underline{\quad} + \underline{\quad} = \underline{\quad}$



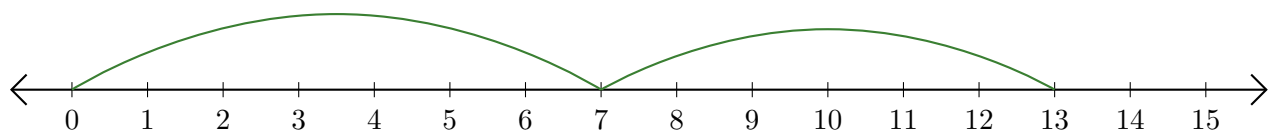
2. $\underline{\quad} + \underline{\quad} = \underline{\quad}$



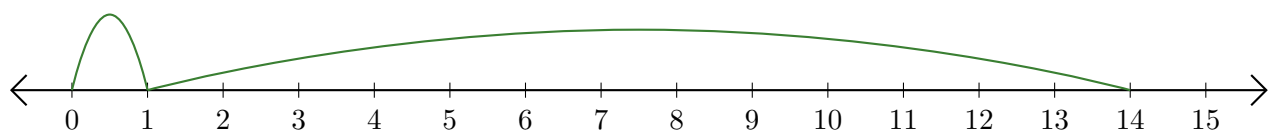
3. $\underline{\quad} + \underline{\quad} = \underline{\quad}$



4. $\underline{\quad} + \underline{\quad} = \underline{\quad}$



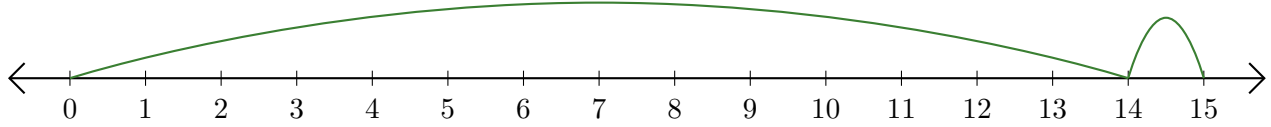
5. $\underline{\quad} + \underline{\quad} = \underline{\quad}$



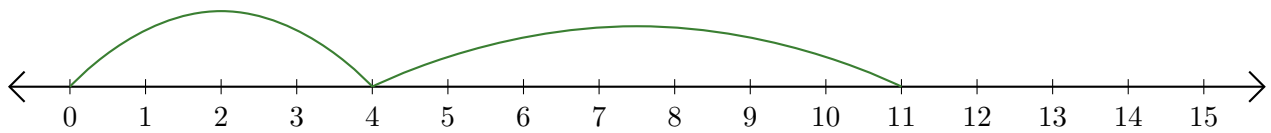
Leer Rectas Numéricas (I) Respuestas

Escriba la pregunta que representa cada recta numérica.

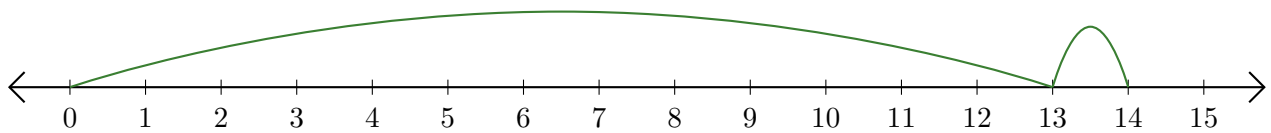
1. $\underline{14} + \underline{1} = \underline{15}$



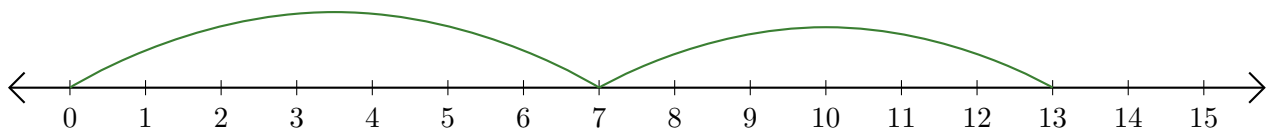
2. $\underline{4} + \underline{7} = \underline{11}$



3. $\underline{13} + \underline{1} = \underline{14}$



4. $\underline{7} + \underline{6} = \underline{13}$



5. $\underline{1} + \underline{13} = \underline{14}$

