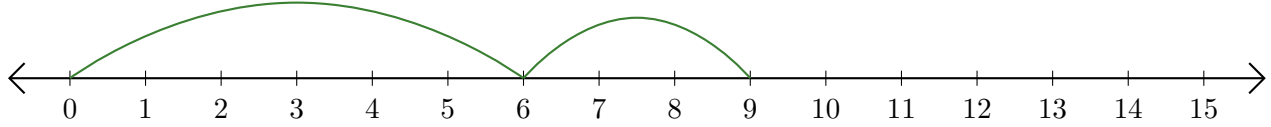


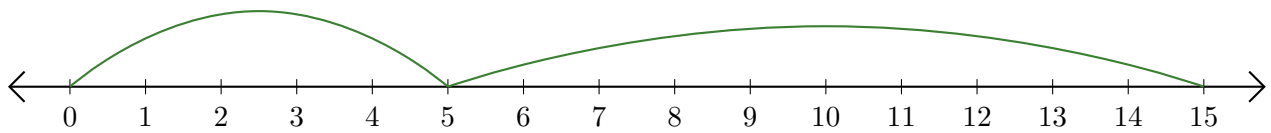
# Leer Rectas Numéricas (J)

Escriba la pregunta que representa cada recta numérica.

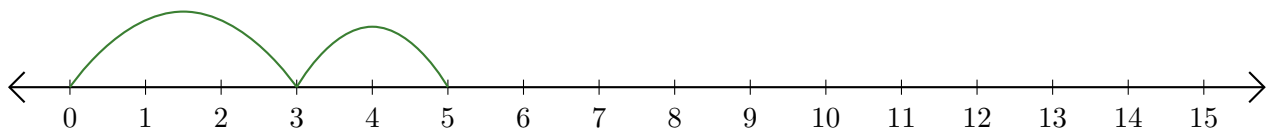
1.  $\underline{\quad} + \underline{\quad} = \underline{\quad}$



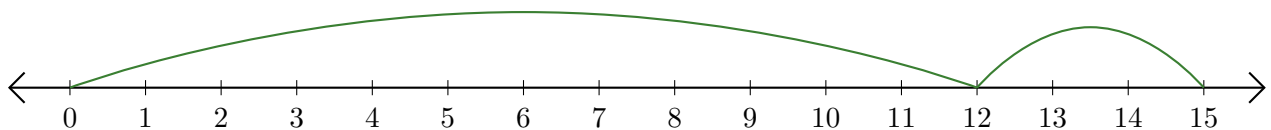
2.  $\underline{\quad} + \underline{\quad} = \underline{\quad}$



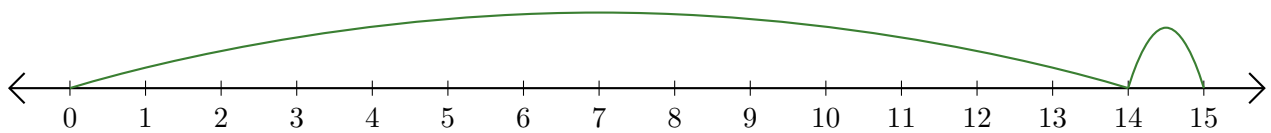
3.  $\underline{\quad} + \underline{\quad} = \underline{\quad}$



4.  $\underline{\quad} + \underline{\quad} = \underline{\quad}$



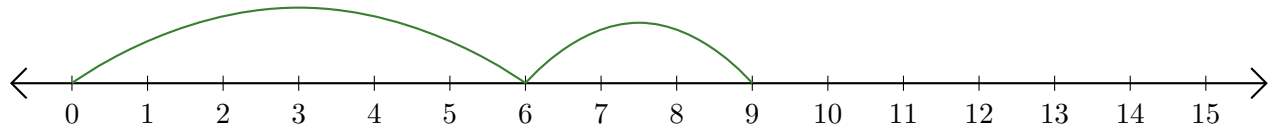
5.  $\underline{\quad} + \underline{\quad} = \underline{\quad}$



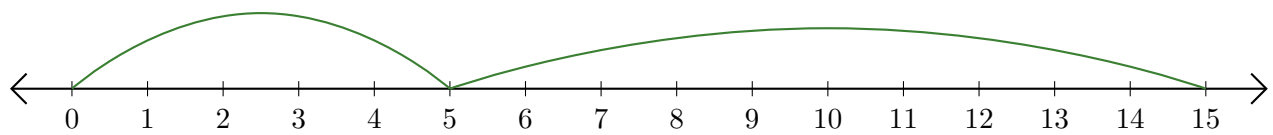
# Leer Rectas Numéricas (J) Respuestas

Escriba la pregunta que representa cada recta numérica.

1.  $\underline{6} + \underline{3} = \underline{9}$



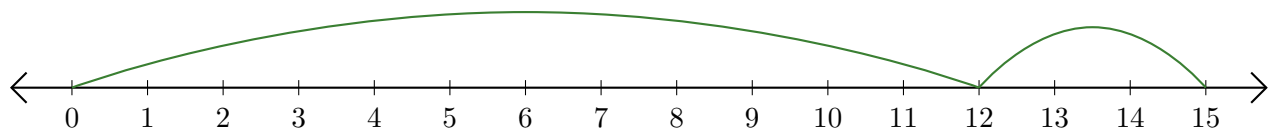
2.  $\underline{5} + \underline{10} = \underline{15}$



3.  $\underline{3} + \underline{2} = \underline{5}$



4.  $\underline{12} + \underline{3} = \underline{15}$



5.  $\underline{14} + \underline{1} = \underline{15}$

