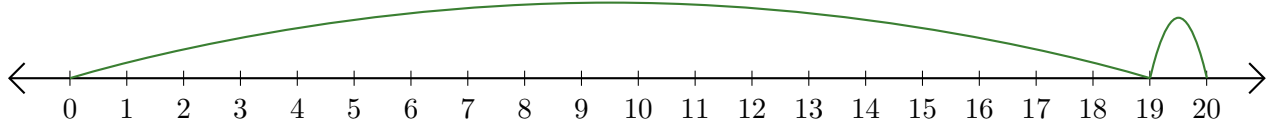


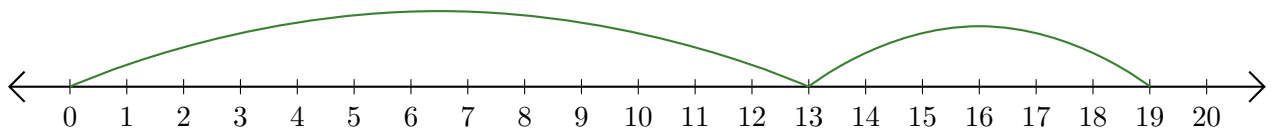
# Leer Rectas Numéricas (B)

Escriba la pregunta que representa cada recta numérica.

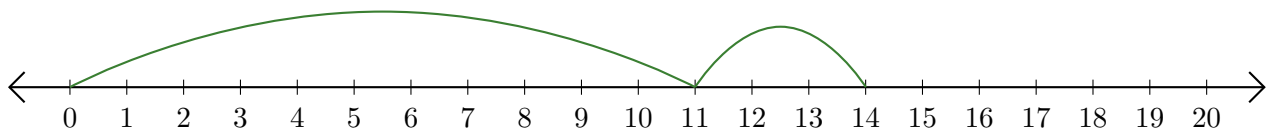
1.  $\underline{\quad} + \underline{\quad} = \underline{\quad}$



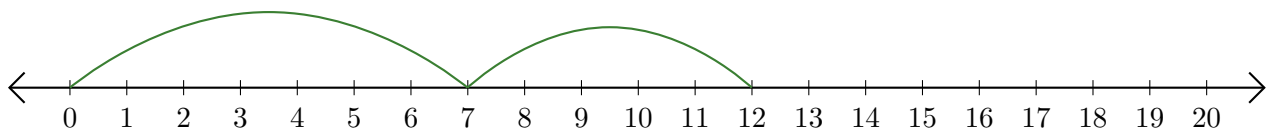
2.  $\underline{\quad} + \underline{\quad} = \underline{\quad}$



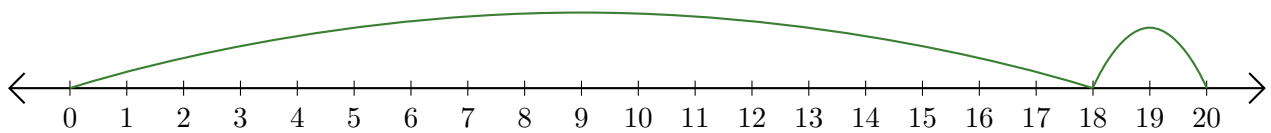
3.  $\underline{\quad} + \underline{\quad} = \underline{\quad}$



4.  $\underline{\quad} + \underline{\quad} = \underline{\quad}$



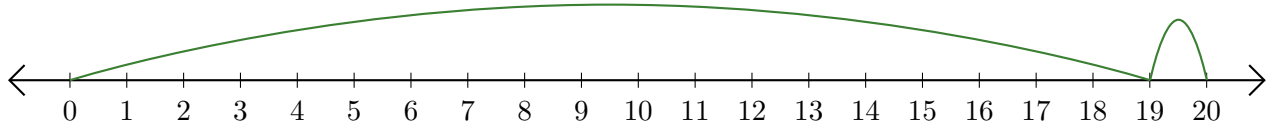
5.  $\underline{\quad} + \underline{\quad} = \underline{\quad}$



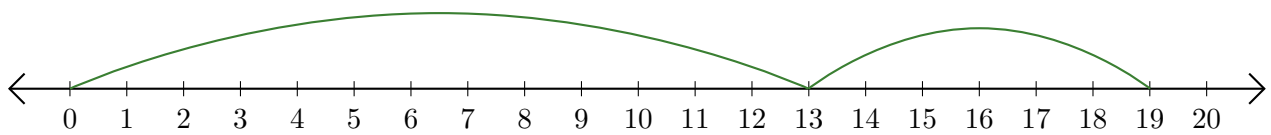
# Leer Rectas Numéricas (B) Respuestas

Escriba la pregunta que representa cada recta numérica.

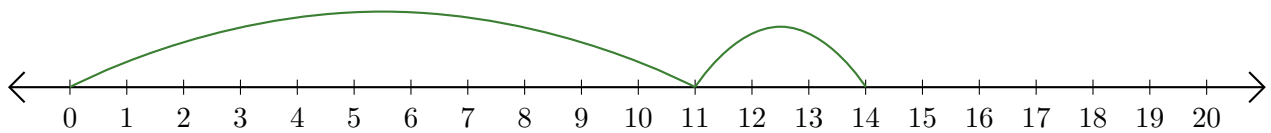
1.  $\underline{19} + \underline{1} = \underline{20}$



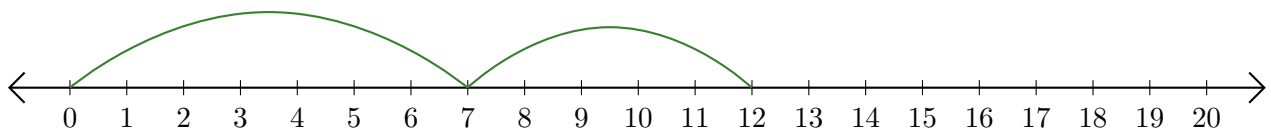
2.  $\underline{13} + \underline{6} = \underline{19}$



3.  $\underline{11} + \underline{3} = \underline{14}$



4.  $\underline{7} + \underline{5} = \underline{12}$



5.  $\underline{18} + \underline{2} = \underline{20}$

