


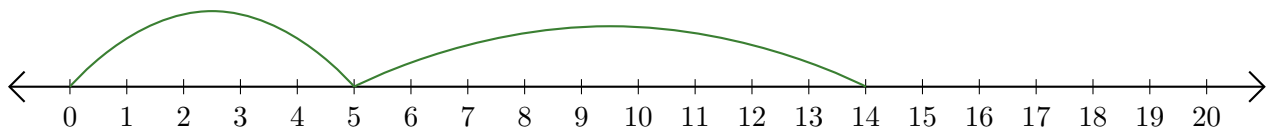
Leer Rectas Numéricas (C)

Escriba la pregunta que representa cada recta numérica.

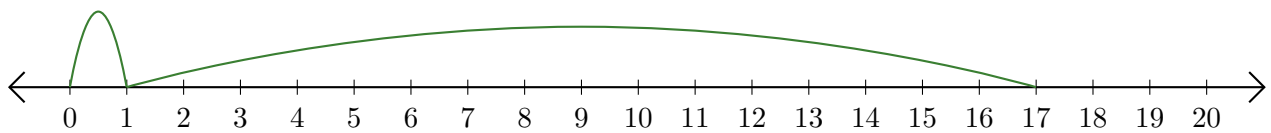
1. $\underline{\quad} + \underline{\quad} = \underline{\quad}$



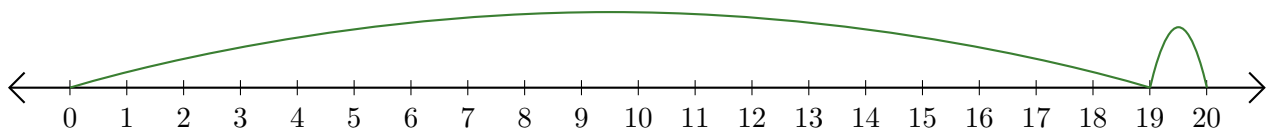
2. $\underline{\quad} + \underline{\quad} = \underline{\quad}$



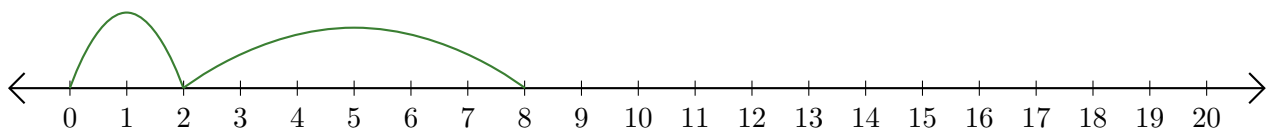
3. $\underline{\quad} + \underline{\quad} = \underline{\quad}$



4. $\underline{\quad} + \underline{\quad} = \underline{\quad}$



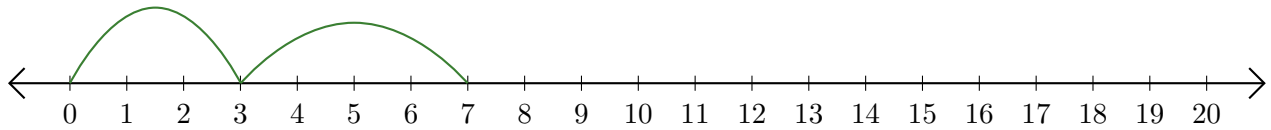
5. $\underline{\quad} + \underline{\quad} = \underline{\quad}$



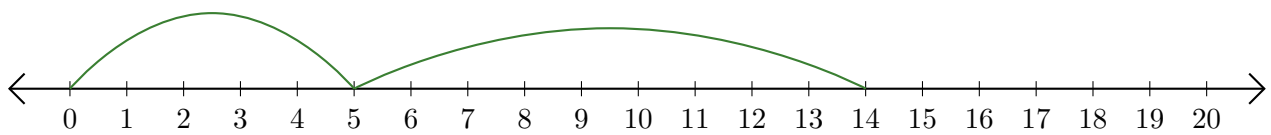
Leer Rectas Numéricas (C) Respuestas

Escriba la pregunta que representa cada recta numérica.

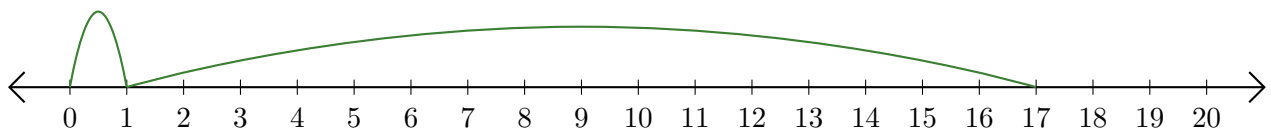
1. $\underline{3} + \underline{4} = \underline{7}$



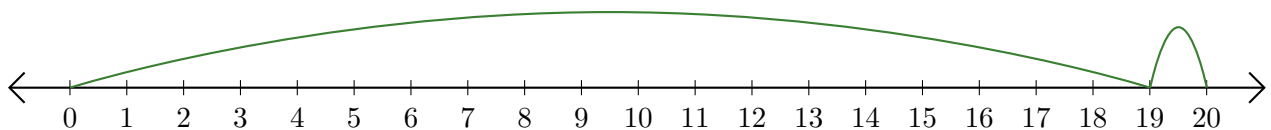
2. $\underline{5} + \underline{9} = \underline{14}$



3. $\underline{1} + \underline{16} = \underline{17}$



4. $\underline{19} + \underline{1} = \underline{20}$



5. $\underline{2} + \underline{6} = \underline{8}$

