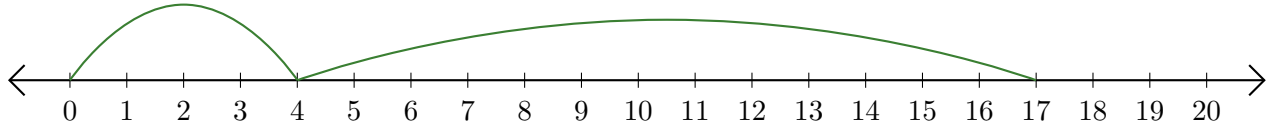


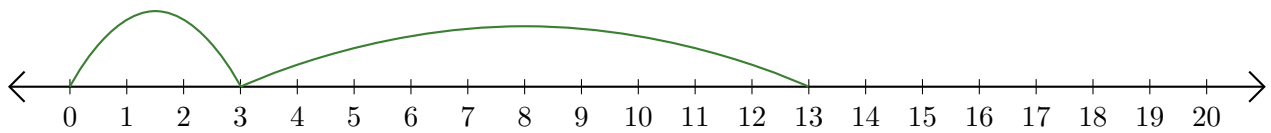
Leer Rectas Numéricas (G)

Escriba la pregunta que representa cada recta numérica.

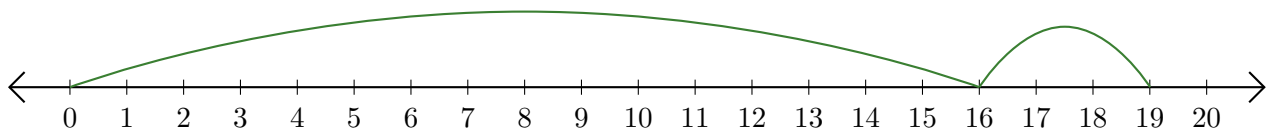
1. $\underline{\quad} + \underline{\quad} = \underline{\quad}$



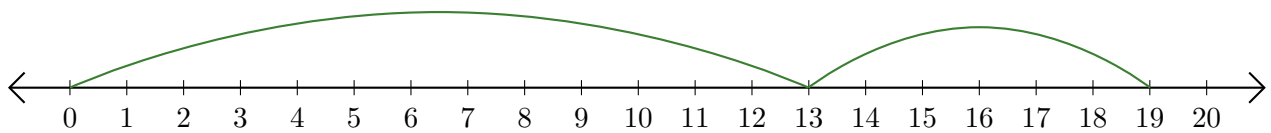
2. $\underline{\quad} + \underline{\quad} = \underline{\quad}$



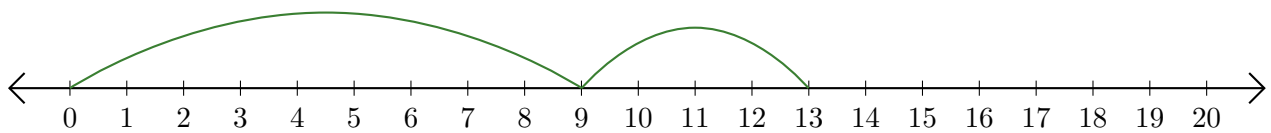
3. $\underline{\quad} + \underline{\quad} = \underline{\quad}$



4. $\underline{\quad} + \underline{\quad} = \underline{\quad}$



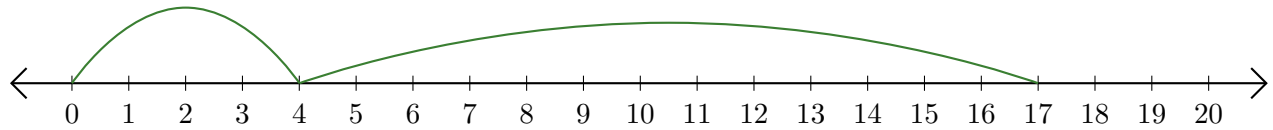
5. $\underline{\quad} + \underline{\quad} = \underline{\quad}$



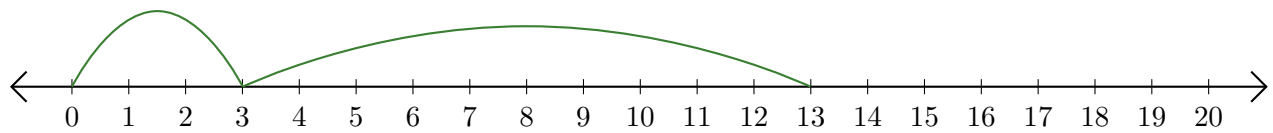
Leer Rectas Numéricas (G) Respuestas

Escriba la pregunta que representa cada recta numérica.

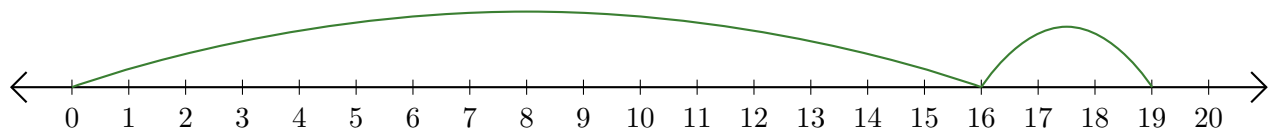
1. $\underline{4} + \underline{13} = \underline{17}$



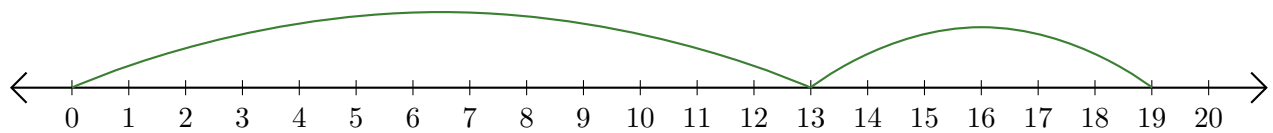
2. $\underline{3} + \underline{10} = \underline{13}$



3. $\underline{16} + \underline{3} = \underline{19}$



4. $\underline{13} + \underline{6} = \underline{19}$



5. $\underline{9} + \underline{4} = \underline{13}$

