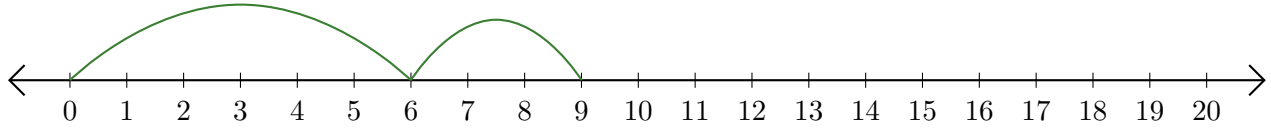


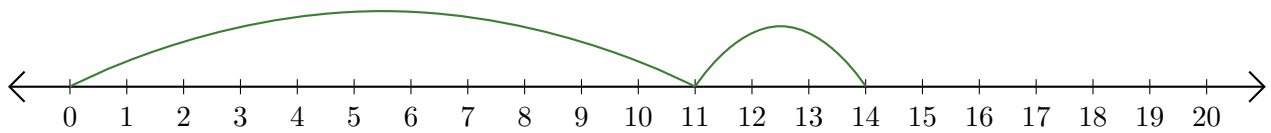
Leer Rectas Numéricas (H)

Escriba la pregunta que representa cada recta numérica.

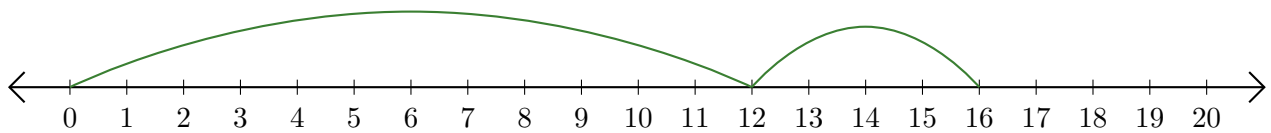
1. $\underline{\quad} + \underline{\quad} = \underline{\quad}$



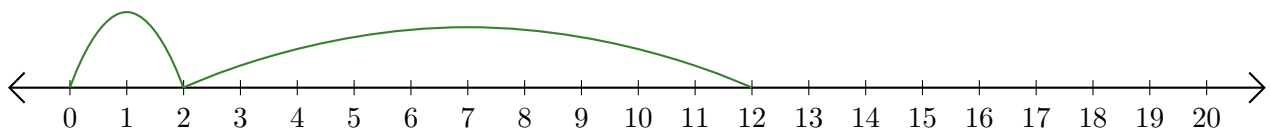
2. $\underline{\quad} + \underline{\quad} = \underline{\quad}$



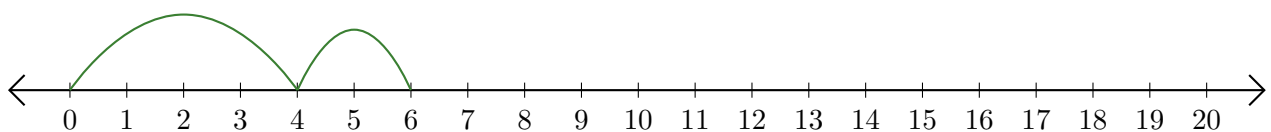
3. $\underline{\quad} + \underline{\quad} = \underline{\quad}$



4. $\underline{\quad} + \underline{\quad} = \underline{\quad}$



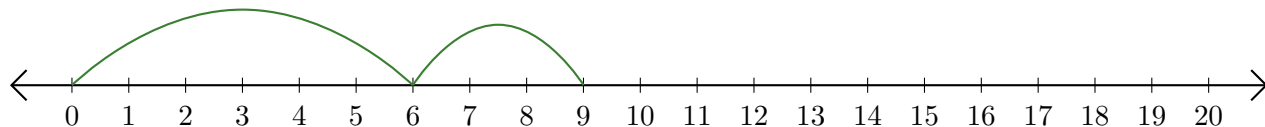
5. $\underline{\quad} + \underline{\quad} = \underline{\quad}$



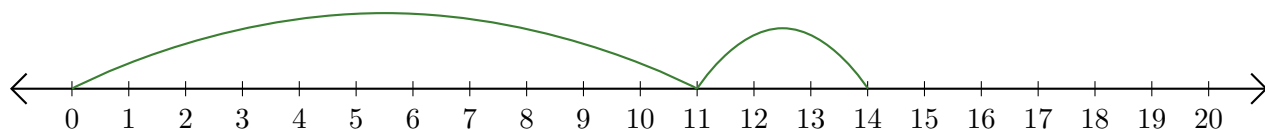
Leer Rectas Numéricas (H) Respuestas

Escriba la pregunta que representa cada recta numérica.

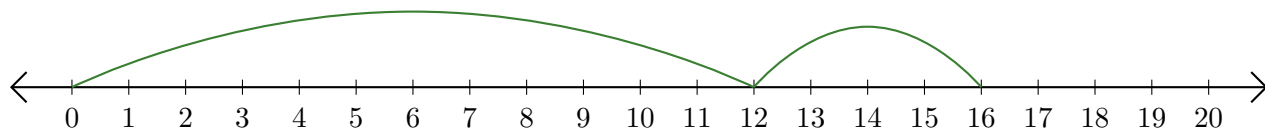
1. $\underline{6} + \underline{3} = \underline{9}$



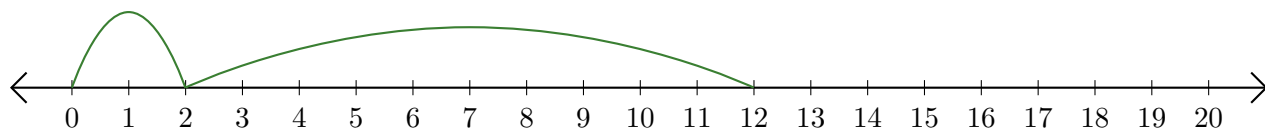
2. $\underline{11} + \underline{3} = \underline{14}$



3. $\underline{12} + \underline{4} = \underline{16}$



4. $\underline{2} + \underline{10} = \underline{12}$



5. $\underline{4} + \underline{2} = \underline{6}$

