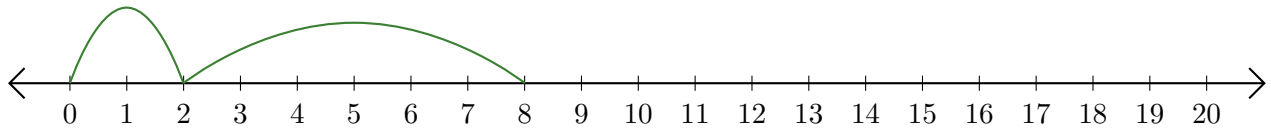


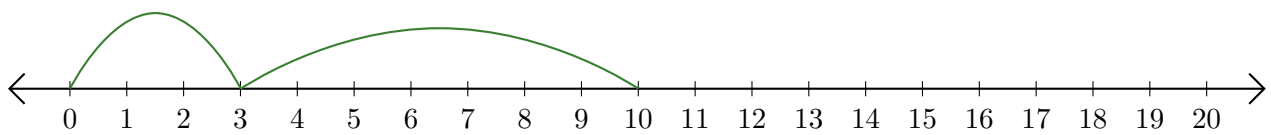
Leer Rectas Numéricas (I)

Escriba la pregunta que representa cada recta numérica.

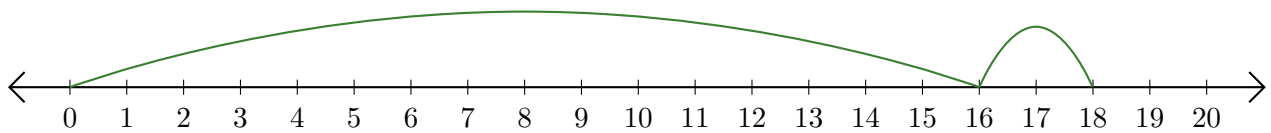
1. $\underline{\quad} + \underline{\quad} = \underline{\quad}$



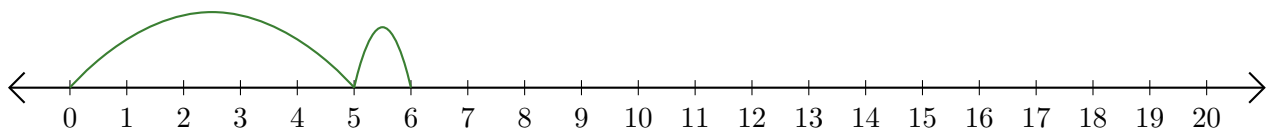
2. $\underline{\quad} + \underline{\quad} = \underline{\quad}$



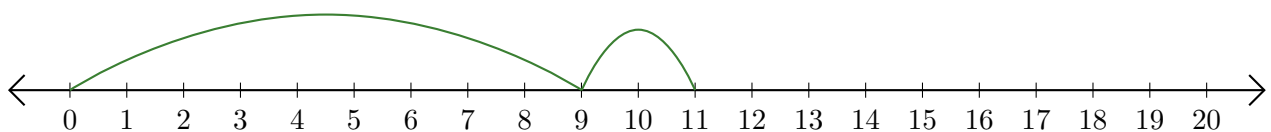
3. $\underline{\quad} + \underline{\quad} = \underline{\quad}$



4. $\underline{\quad} + \underline{\quad} = \underline{\quad}$




5. $\underline{\quad} + \underline{\quad} = \underline{\quad}$



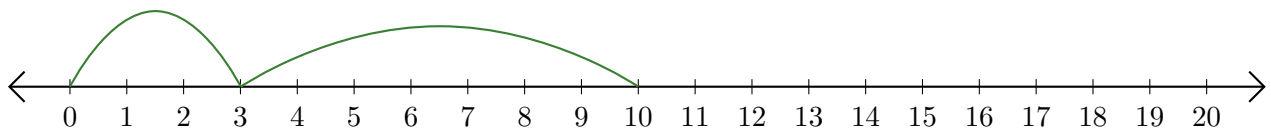
Leer Rectas Numéricas (I) Respuestas

Escriba la pregunta que representa cada recta numérica.

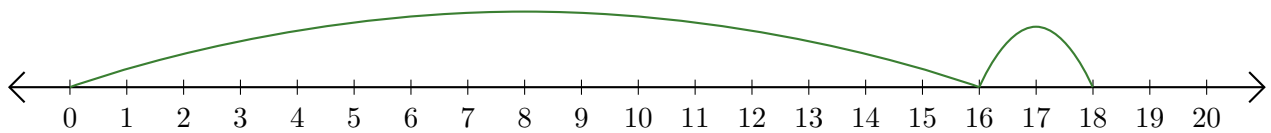
1. $\underline{2} + \underline{6} = \underline{8}$



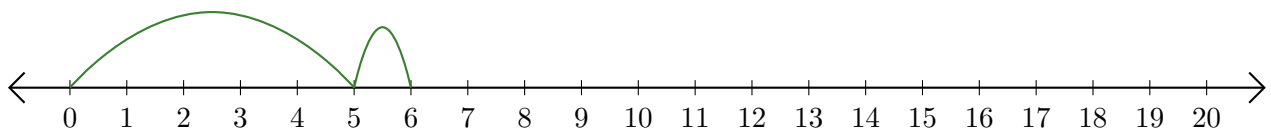
2. $\underline{3} + \underline{7} = \underline{10}$



3. $\underline{16} + \underline{2} = \underline{18}$



4. $\underline{5} + \underline{1} = \underline{6}$



5. $\underline{9} + \underline{2} = \underline{11}$

