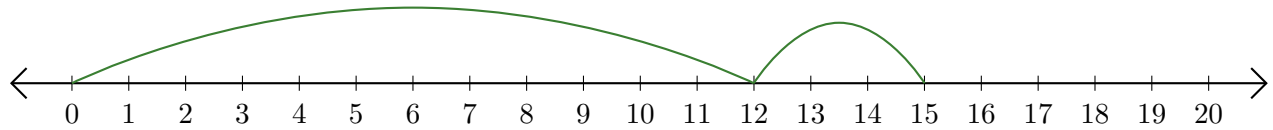


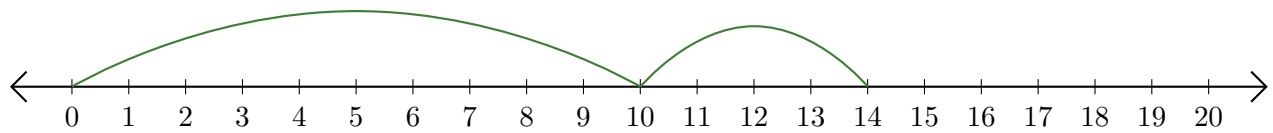
Leer Rectas Numéricas (J)

Escriba la pregunta que representa cada recta numérica.

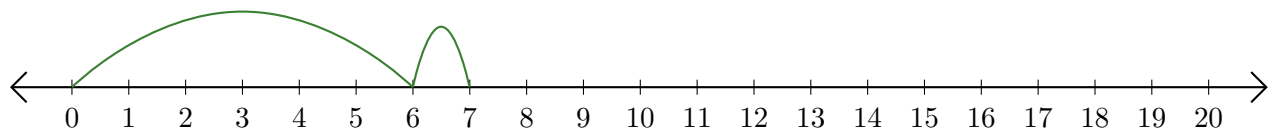
1. $\underline{\quad} + \underline{\quad} = \underline{\quad}$



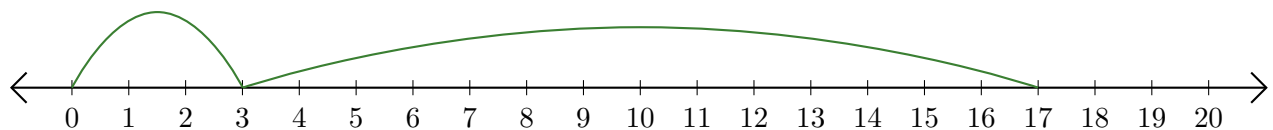
2. $\underline{\quad} + \underline{\quad} = \underline{\quad}$



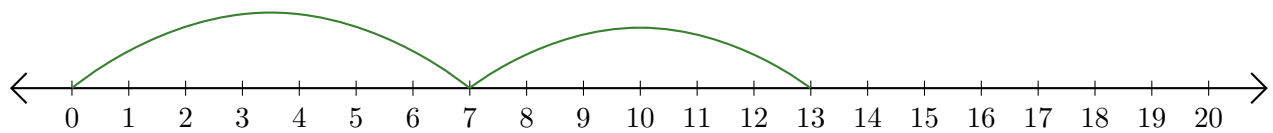
3. $\underline{\quad} + \underline{\quad} = \underline{\quad}$



4. $\underline{\quad} + \underline{\quad} = \underline{\quad}$



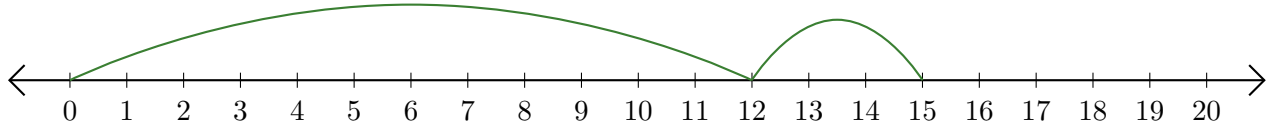
5. $\underline{\quad} + \underline{\quad} = \underline{\quad}$



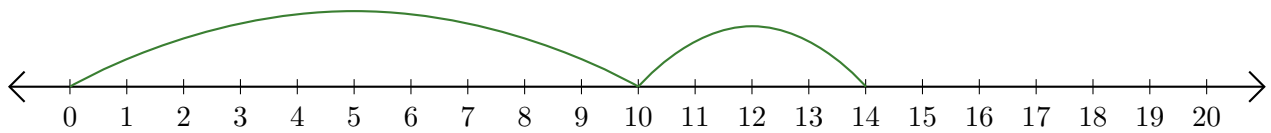
Leer Rectas Numéricas (J) Respuestas

Escriba la pregunta que representa cada recta numérica.

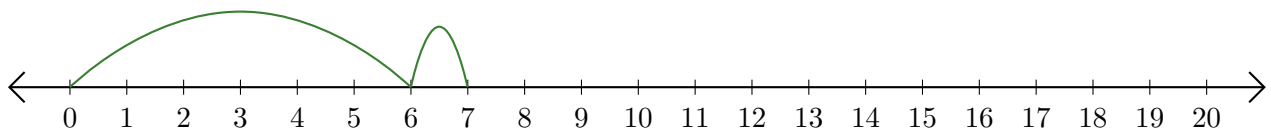
1. $\underline{12} + \underline{3} = \underline{15}$



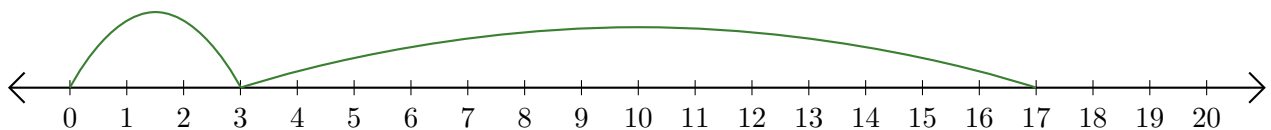
2. $\underline{10} + \underline{4} = \underline{14}$



3. $\underline{6} + \underline{1} = \underline{7}$



4. $\underline{3} + \underline{14} = \underline{17}$



5. $\underline{7} + \underline{6} = \underline{13}$

