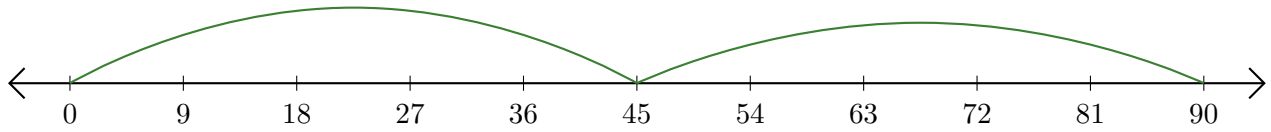


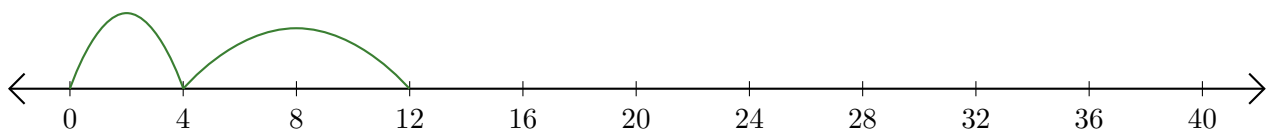
Leer Rectas Numéricas (A)

Escriba la pregunta que representa cada recta numérica.

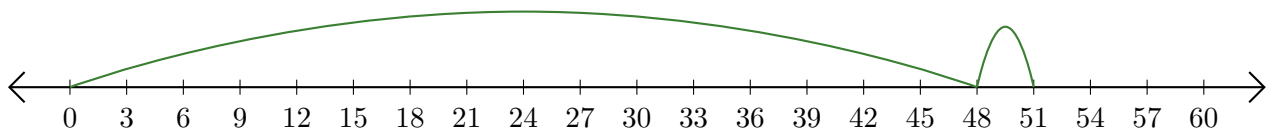
1. $\underline{\quad} + \underline{\quad} = \underline{\quad}$




2. $\underline{\quad} + \underline{\quad} = \underline{\quad}$



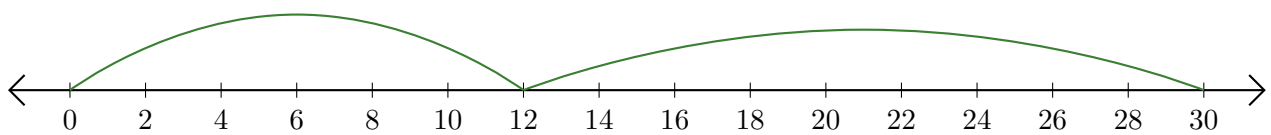
3. $\underline{\quad} + \underline{\quad} = \underline{\quad}$



4. $\underline{\quad} + \underline{\quad} = \underline{\quad}$



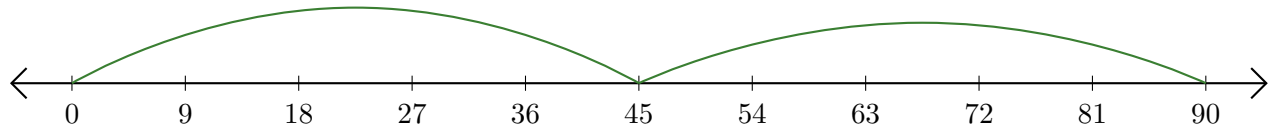
5. $\underline{\quad} + \underline{\quad} = \underline{\quad}$



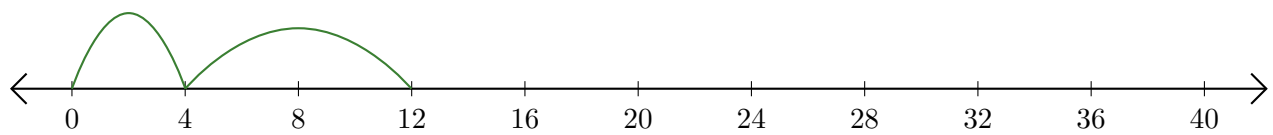
Leer Rectas Numéricas (A) Respuestas

Escriba la pregunta que representa cada recta numérica.

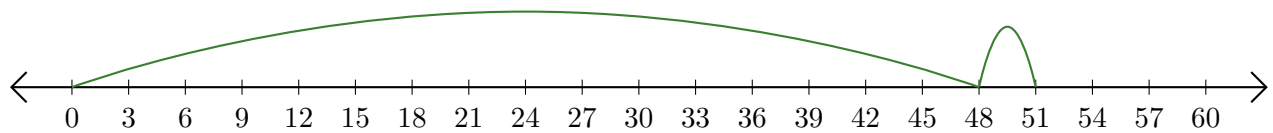
1. $\underline{45} + \underline{45} = \underline{90}$




2. $\underline{4} + \underline{8} = \underline{12}$



3. $\underline{48} + \underline{3} = \underline{51}$



4. $\underline{12} + \underline{3} = \underline{15}$



5. $\underline{12} + \underline{18} = \underline{30}$

