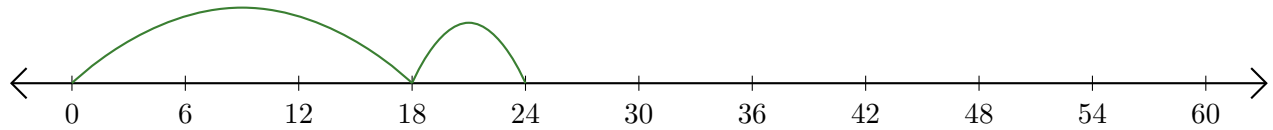


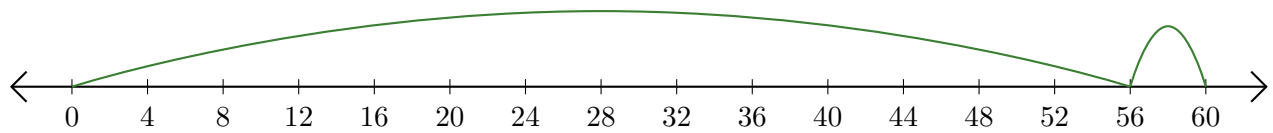
# Leer Rectas Numéricas (E)

Escriba la pregunta que representa cada recta numérica.

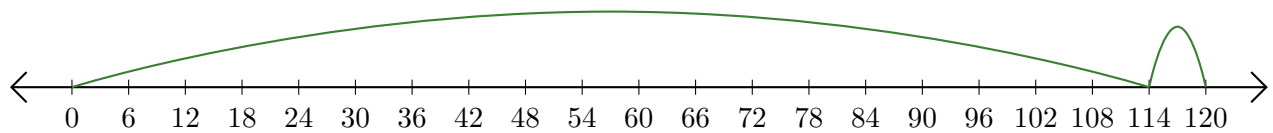
1.  $\underline{\quad} + \underline{\quad} = \underline{\quad}$



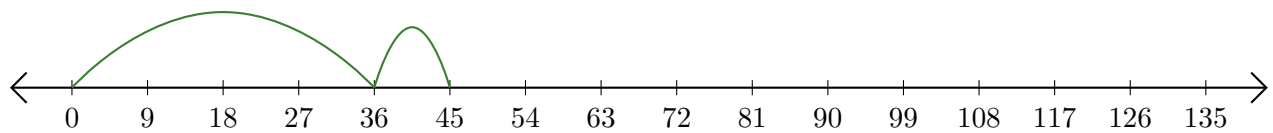
2.  $\underline{\quad} + \underline{\quad} = \underline{\quad}$



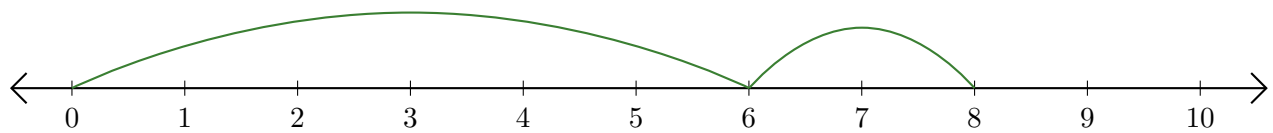
3.  $\underline{\quad} + \underline{\quad} = \underline{\quad}$



4.  $\underline{\quad} + \underline{\quad} = \underline{\quad}$



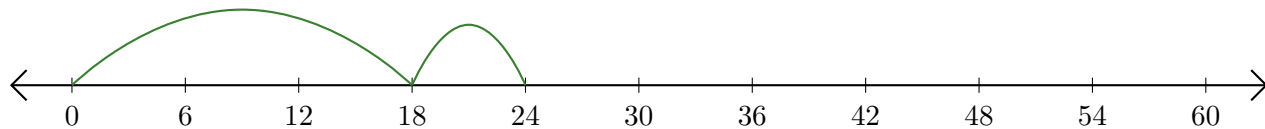
5.  $\underline{\quad} + \underline{\quad} = \underline{\quad}$



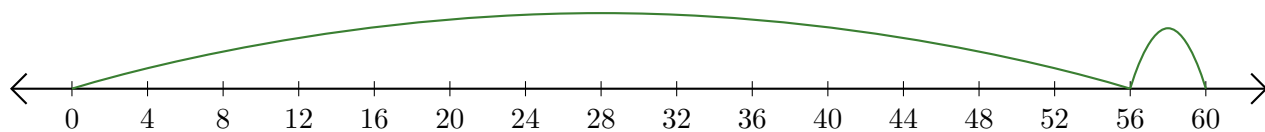
# Leer Rectas Numéricas (E) Respuestas

Escriba la pregunta que representa cada recta numérica.

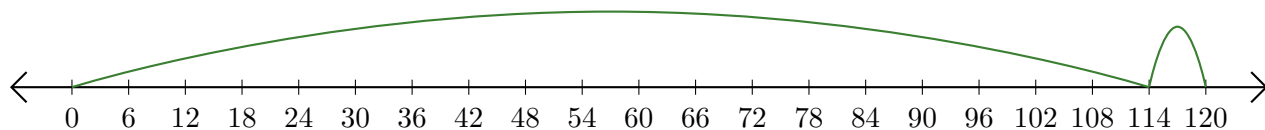
1.  $\underline{18} + \underline{6} = \underline{24}$



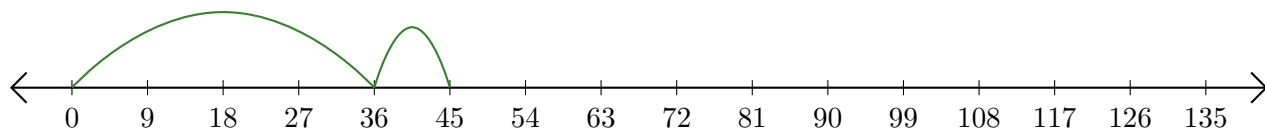
2.  $\underline{56} + \underline{4} = \underline{60}$



3.  $\underline{114} + \underline{6} = \underline{120}$



4.  $\underline{36} + \underline{9} = \underline{45}$



5.  $\underline{6} + \underline{2} = \underline{8}$

