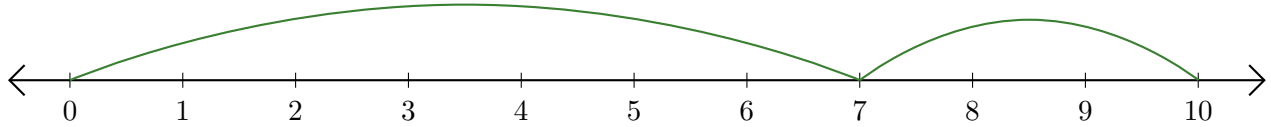


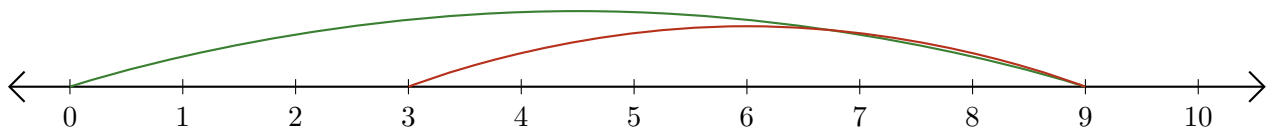
# Leer Rectas Numéricas (C)

Escriba la pregunta que representa cada recta numérica.

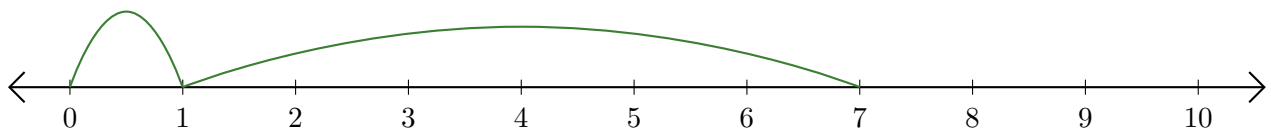
1.  $\underline{\quad} + \underline{\quad} = \underline{\quad}$



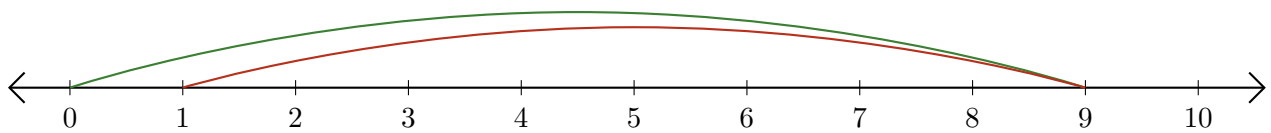
2.  $\underline{\quad} - \underline{\quad} = \underline{\quad}$



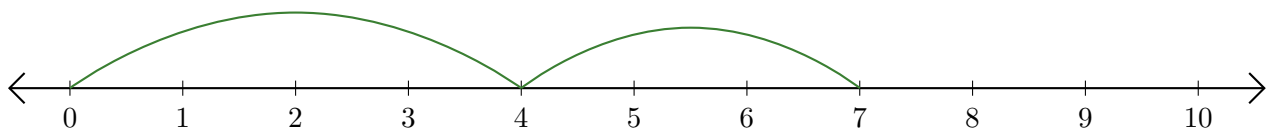
3.  $\underline{\quad} + \underline{\quad} = \underline{\quad}$



4.  $\underline{\quad} - \underline{\quad} = \underline{\quad}$



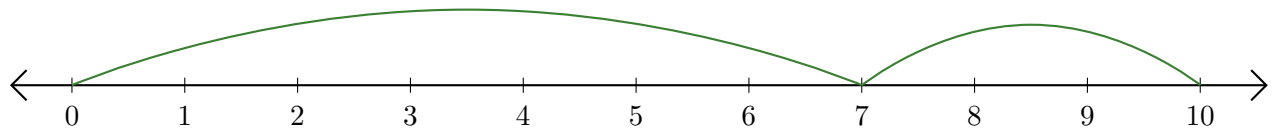
5.  $\underline{\quad} + \underline{\quad} = \underline{\quad}$



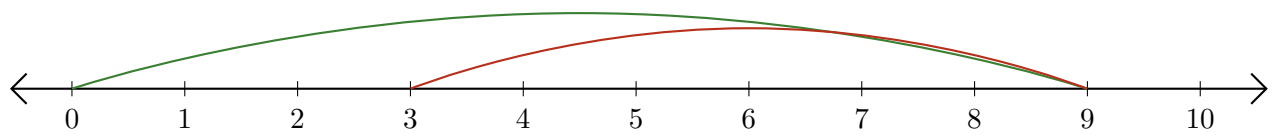
# Leer Rectas Numéricas (C) Respuestas

Escriba la pregunta que representa cada recta numérica.

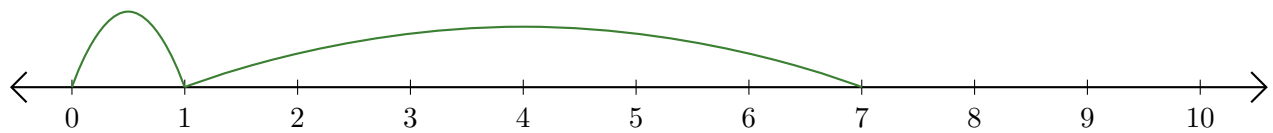
1.  $\underline{7} + \underline{3} = \underline{10}$



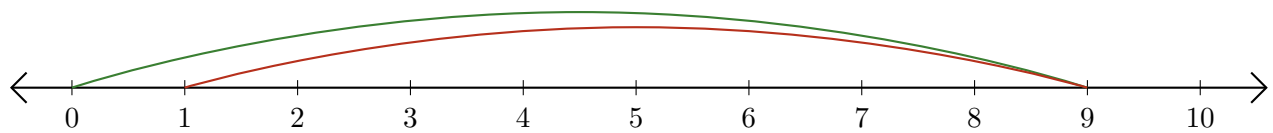
2.  $\underline{9} - \underline{6} = \underline{3}$



3.  $\underline{1} + \underline{6} = \underline{7}$



4.  $\underline{9} - \underline{8} = \underline{1}$



5.  $\underline{4} + \underline{3} = \underline{7}$

