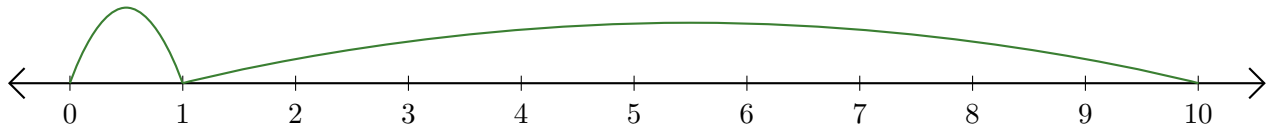


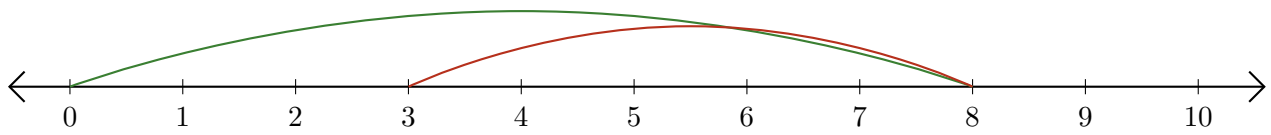
Leer Rectas Numéricas (D)

Escriba la pregunta que representa cada recta numérica.

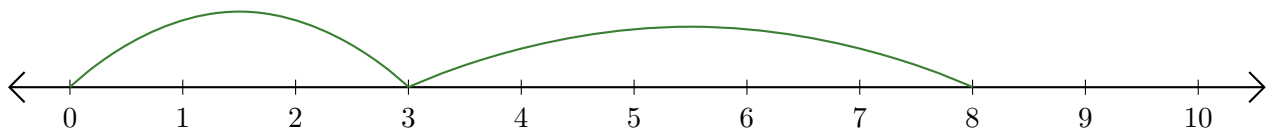
1. $\underline{\quad} + \underline{\quad} = \underline{\quad}$



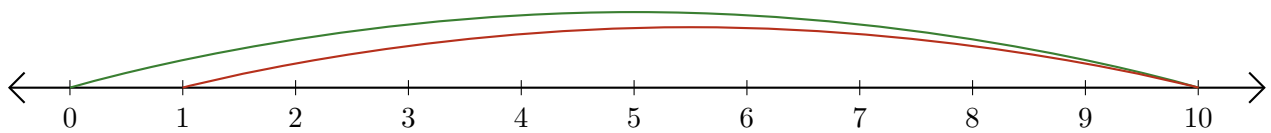
2. $\underline{\quad} - \underline{\quad} = \underline{\quad}$



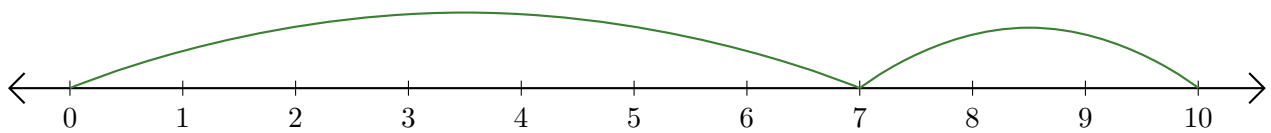
3. $\underline{\quad} + \underline{\quad} = \underline{\quad}$



4. $\underline{\quad} - \underline{\quad} = \underline{\quad}$



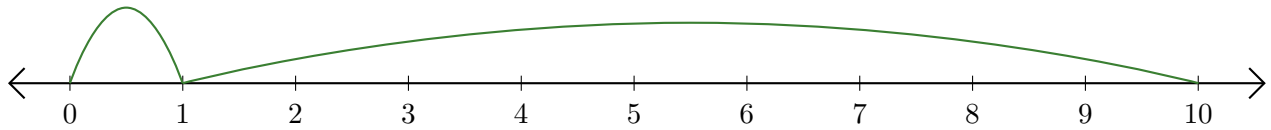
5. $\underline{\quad} + \underline{\quad} = \underline{\quad}$



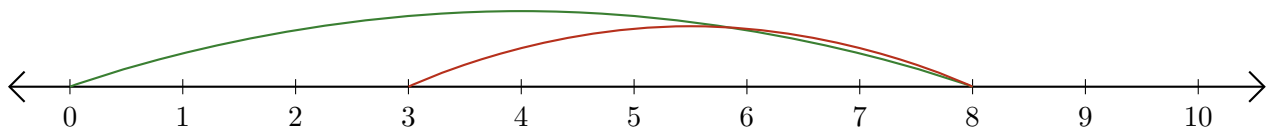
Leer Rectas Numéricas (D) Respuestas

Escriba la pregunta que representa cada recta numérica.

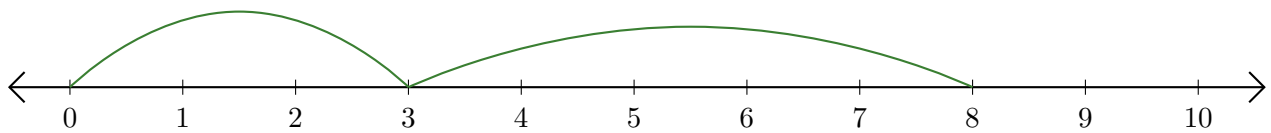
1. $\underline{1} + \underline{9} = \underline{10}$



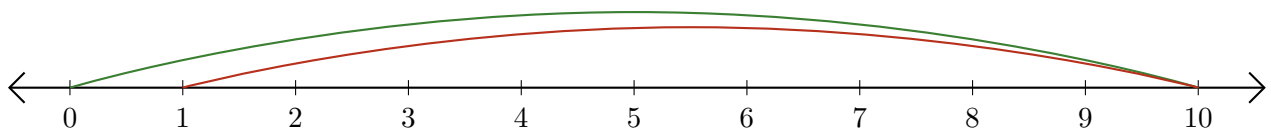
2. $\underline{8} - \underline{5} = \underline{3}$



3. $\underline{3} + \underline{5} = \underline{8}$



4. $\underline{10} - \underline{9} = \underline{1}$



5. $\underline{7} + \underline{3} = \underline{10}$

