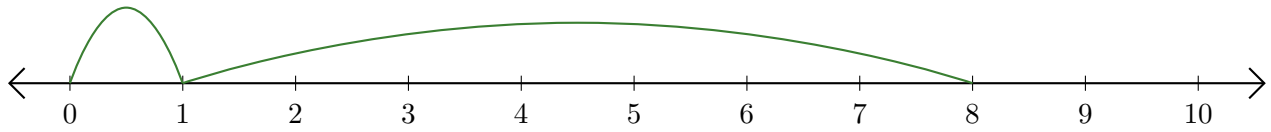


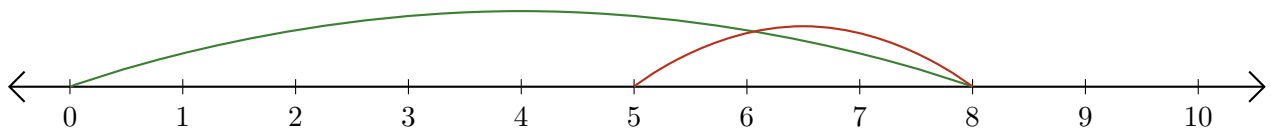
Leer Rectas Numéricas (F)

Escriba la pregunta que representa cada recta numérica.

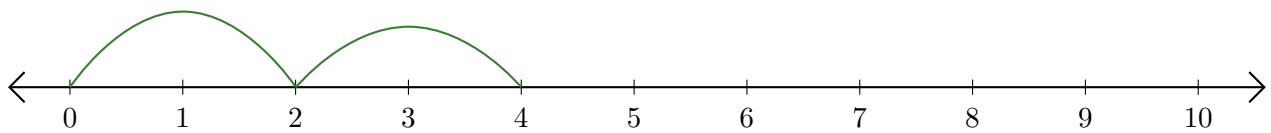
1. $\underline{\quad} + \underline{\quad} = \underline{\quad}$



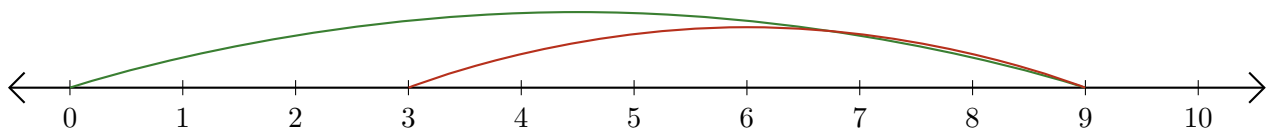
2. $\underline{\quad} - \underline{\quad} = \underline{\quad}$



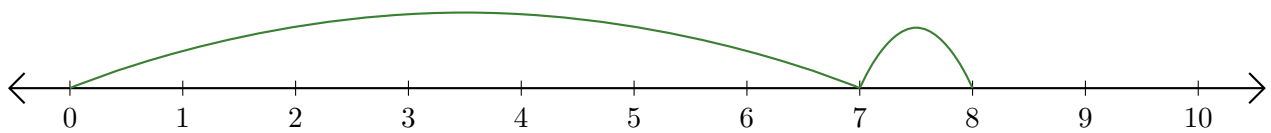
3. $\underline{\quad} + \underline{\quad} = \underline{\quad}$



4. $\underline{\quad} - \underline{\quad} = \underline{\quad}$



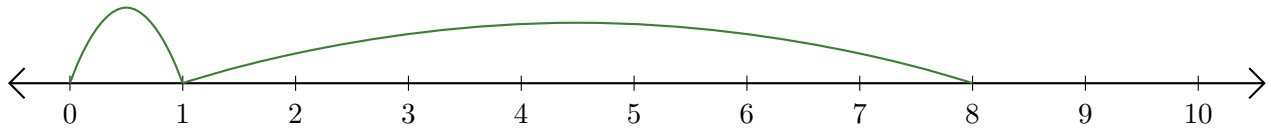
5. $\underline{\quad} + \underline{\quad} = \underline{\quad}$



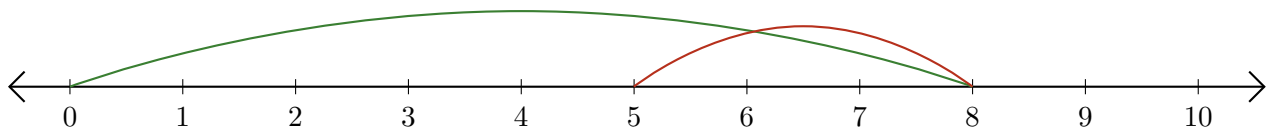
Leer Rectas Numéricas (F) Respuestas

Escriba la pregunta que representa cada recta numérica.

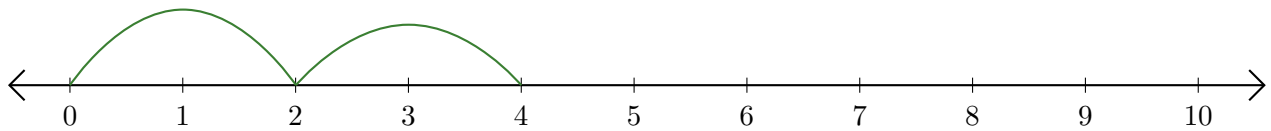
1. $\underline{1} + \underline{7} = \underline{8}$



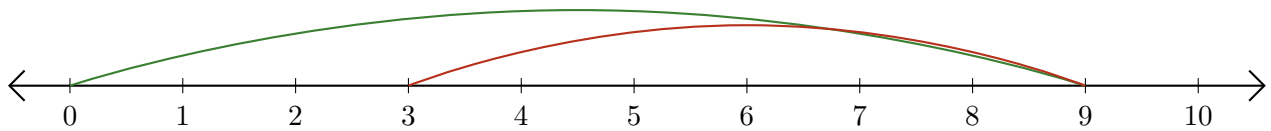
2. $\underline{8} - \underline{3} = \underline{5}$



3. $\underline{2} + \underline{2} = \underline{4}$



4. $\underline{9} - \underline{6} = \underline{3}$



5. $\underline{7} + \underline{1} = \underline{8}$

