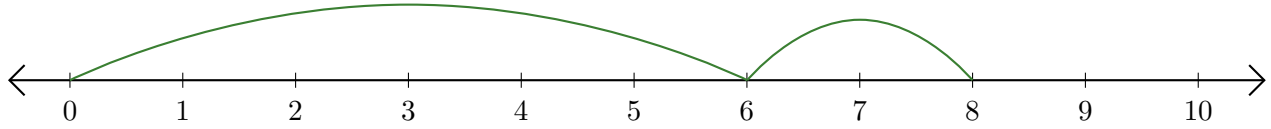


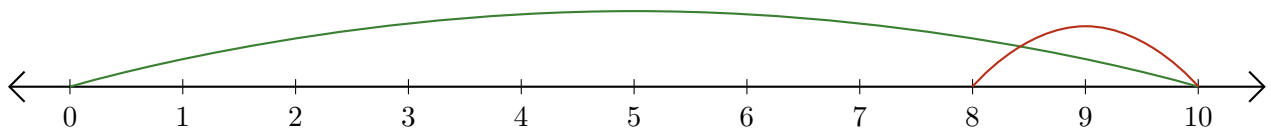
# Leer Rectas Numéricas (G)

Escriba la pregunta que representa cada recta numérica.

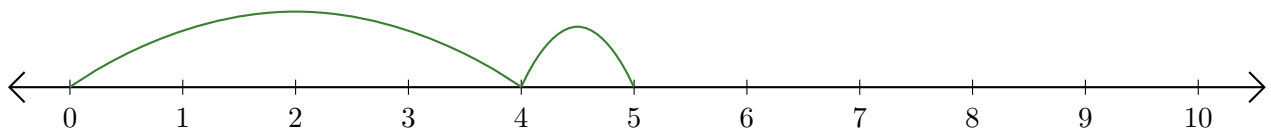
1.  $\underline{\quad} + \underline{\quad} = \underline{\quad}$



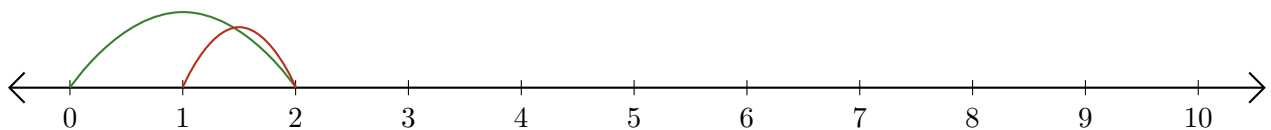
2.  $\underline{\quad} - \underline{\quad} = \underline{\quad}$



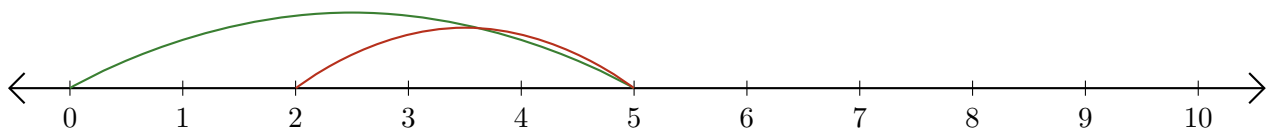
3.  $\underline{\quad} + \underline{\quad} = \underline{\quad}$



4.  $\underline{\quad} - \underline{\quad} = \underline{\quad}$



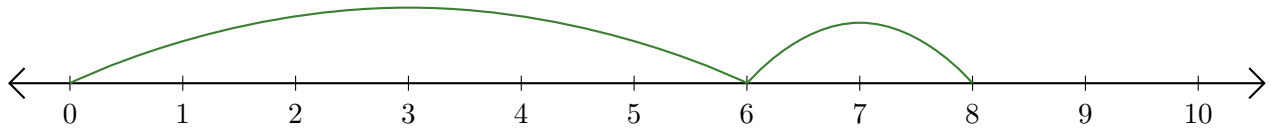
5.  $\underline{\quad} - \underline{\quad} = \underline{\quad}$



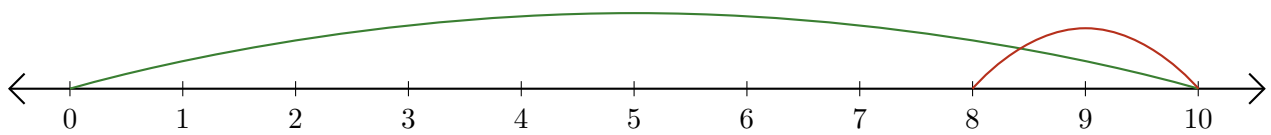
# Leer Rectas Numéricas (G) Respuestas

Escriba la pregunta que representa cada recta numérica.

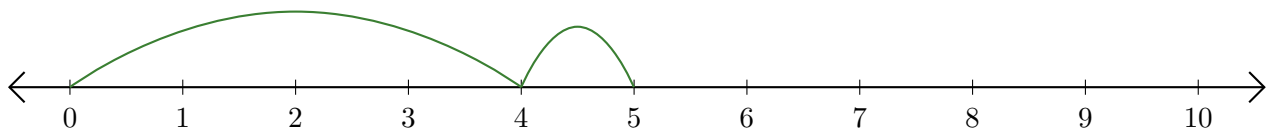
1.  $\underline{6} + \underline{2} = \underline{8}$



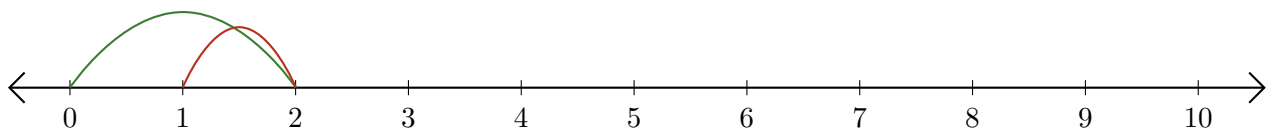
2.  $\underline{10} - \underline{2} = \underline{8}$



3.  $\underline{4} + \underline{1} = \underline{5}$



4.  $\underline{2} - \underline{1} = \underline{1}$



5.  $\underline{5} - \underline{3} = \underline{2}$

