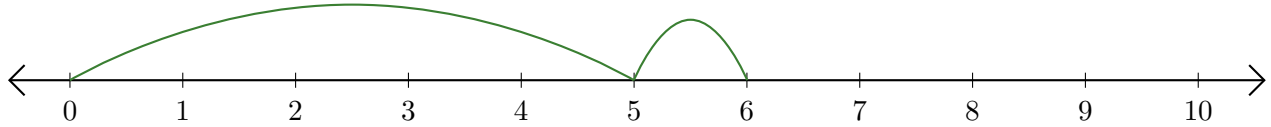


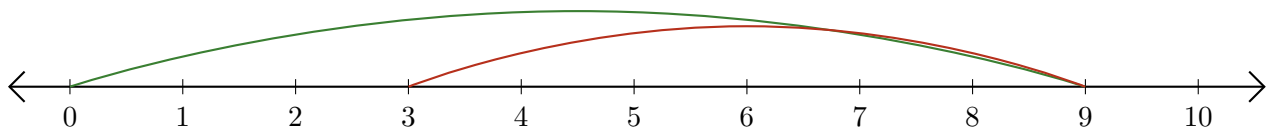
Leer Rectas Numéricas (I)

Escriba la pregunta que representa cada recta numérica.

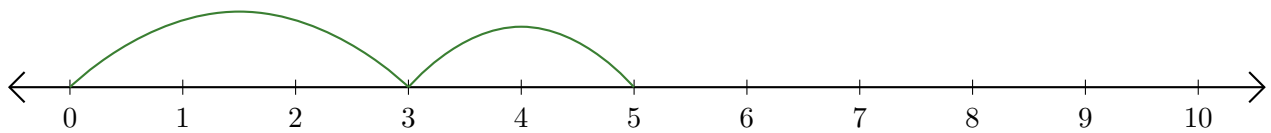
1. $\underline{\quad} + \underline{\quad} = \underline{\quad}$



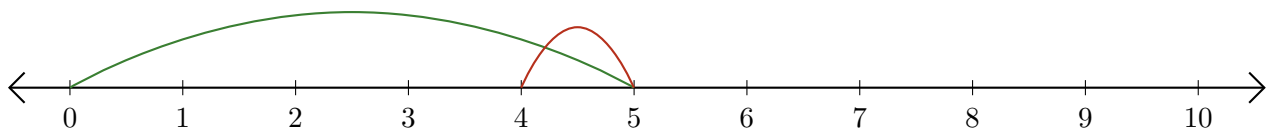
2. $\underline{\quad} - \underline{\quad} = \underline{\quad}$



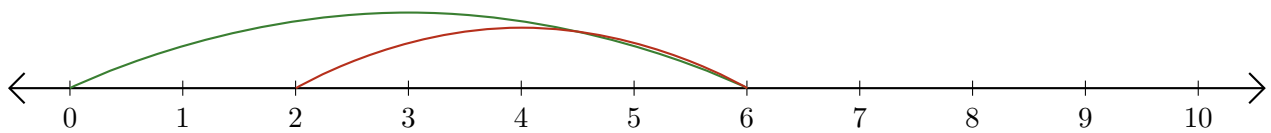
3. $\underline{\quad} + \underline{\quad} = \underline{\quad}$



4. $\underline{\quad} - \underline{\quad} = \underline{\quad}$



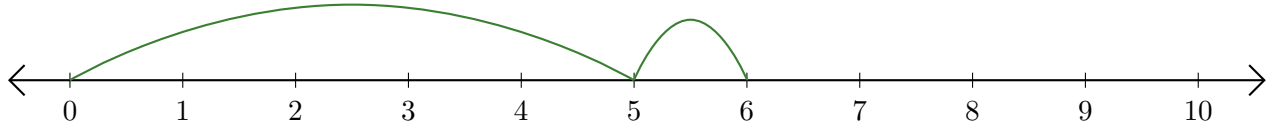
5. $\underline{\quad} - \underline{\quad} = \underline{\quad}$



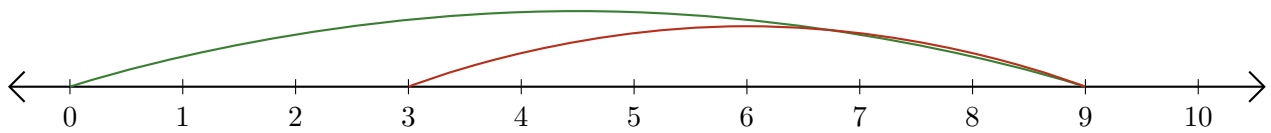
Leer Rectas Numéricas (I) Respuestas

Escriba la pregunta que representa cada recta numérica.

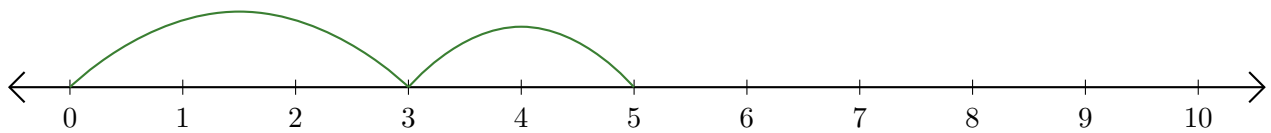
1. $\underline{5} + \underline{1} = \underline{6}$



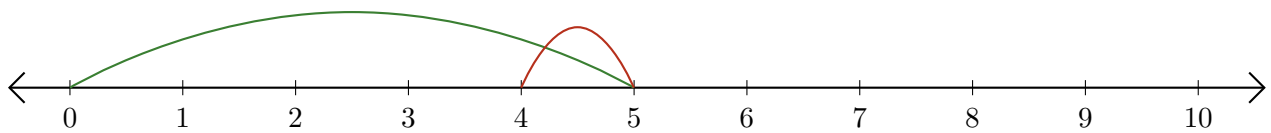
2. $\underline{9} - \underline{6} = \underline{3}$



3. $\underline{3} + \underline{2} = \underline{5}$



4. $\underline{5} - \underline{1} = \underline{4}$



5. $\underline{6} - \underline{4} = \underline{2}$

