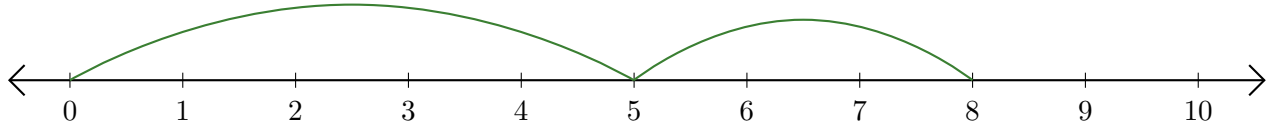


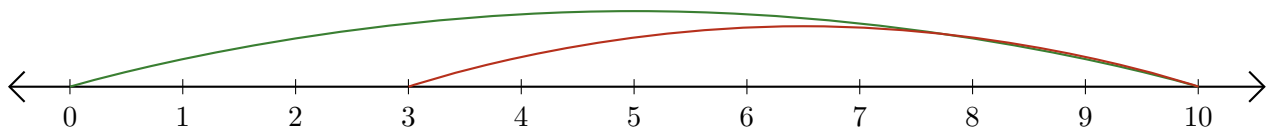
Leer Rectas Numéricas (J)

Escriba la pregunta que representa cada recta numérica.

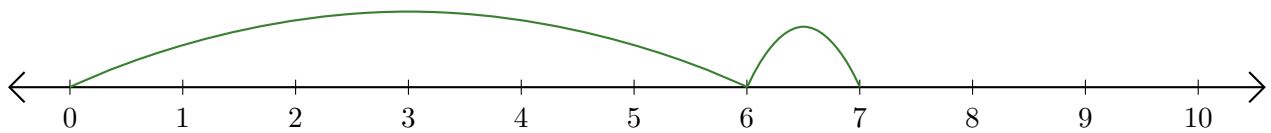
1. $\underline{\quad} + \underline{\quad} = \underline{\quad}$



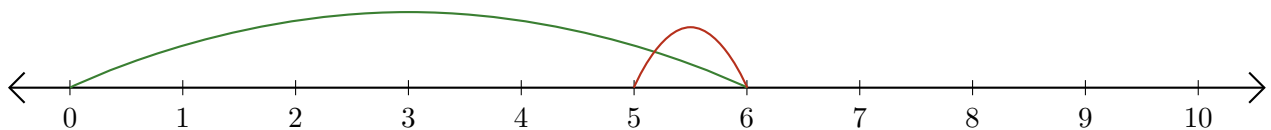
2. $\underline{\quad} - \underline{\quad} = \underline{\quad}$



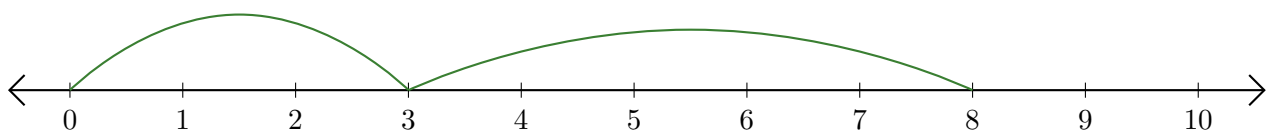
3. $\underline{\quad} + \underline{\quad} = \underline{\quad}$



4. $\underline{\quad} - \underline{\quad} = \underline{\quad}$



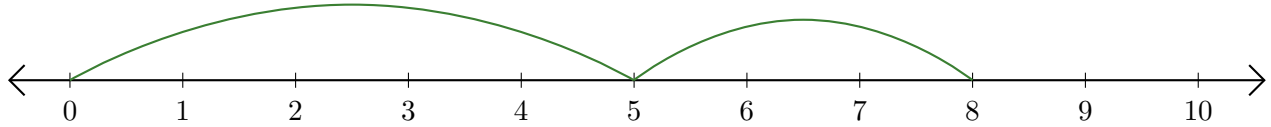
5. $\underline{\quad} + \underline{\quad} = \underline{\quad}$



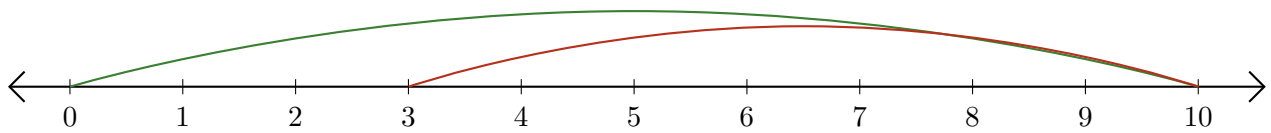
Leer Rectas Numéricas (J) Respuestas

Escriba la pregunta que representa cada recta numérica.

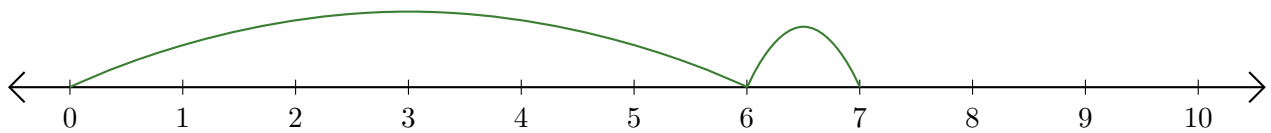
1. $\underline{5} + \underline{3} = \underline{8}$



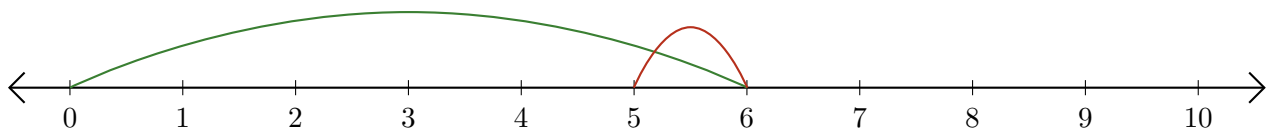
2. $\underline{10} - \underline{7} = \underline{3}$



3. $\underline{6} + \underline{1} = \underline{7}$



4. $\underline{6} - \underline{1} = \underline{5}$



5. $\underline{3} + \underline{5} = \underline{8}$

