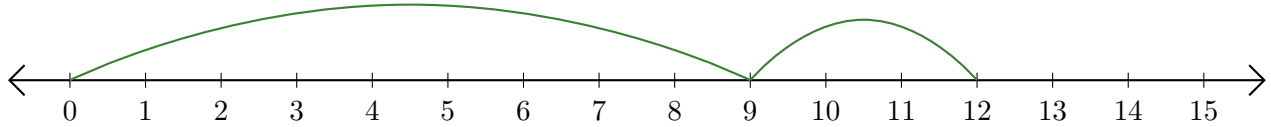


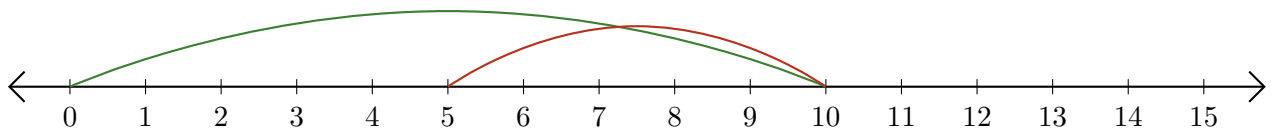
# Leer Rectas Numéricas (D)

Escriba la pregunta que representa cada recta numérica.

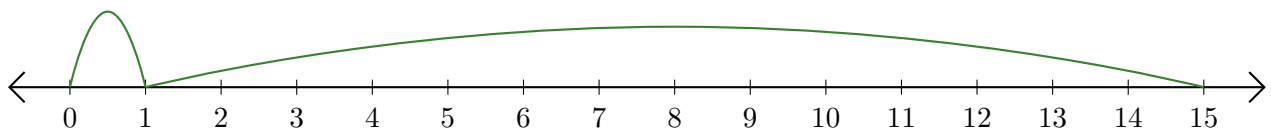
1.  $\underline{\quad} + \underline{\quad} = \underline{\quad}$



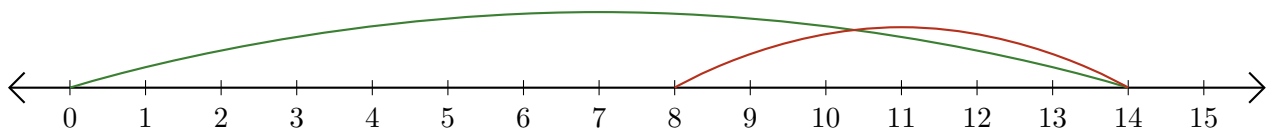
2.  $\underline{\quad} - \underline{\quad} = \underline{\quad}$



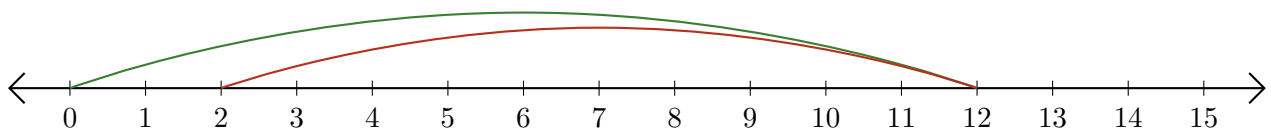
3.  $\underline{\quad} + \underline{\quad} = \underline{\quad}$



4.  $\underline{\quad} - \underline{\quad} = \underline{\quad}$



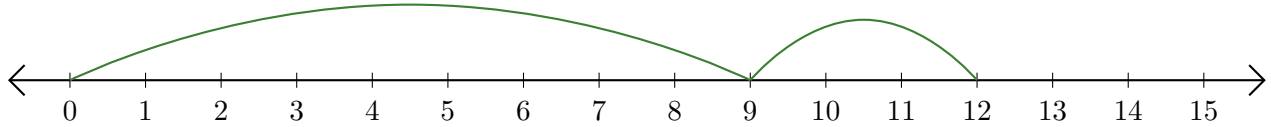
5.  $\underline{\quad} - \underline{\quad} = \underline{\quad}$



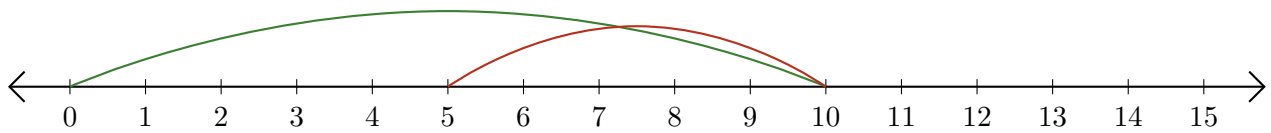
# Leer Rectas Numéricas (D) Respuestas

Escriba la pregunta que representa cada recta numérica.

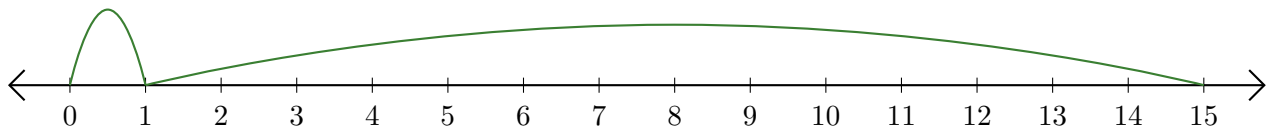
1.  $\underline{9} + \underline{3} = \underline{12}$



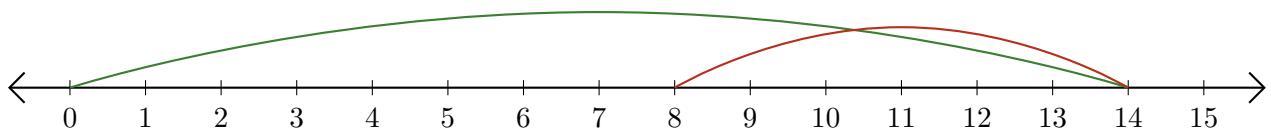
2.  $\underline{10} - \underline{5} = \underline{5}$



3.  $\underline{1} + \underline{14} = \underline{15}$



4.  $\underline{14} - \underline{6} = \underline{8}$



5.  $\underline{12} - \underline{10} = \underline{2}$

