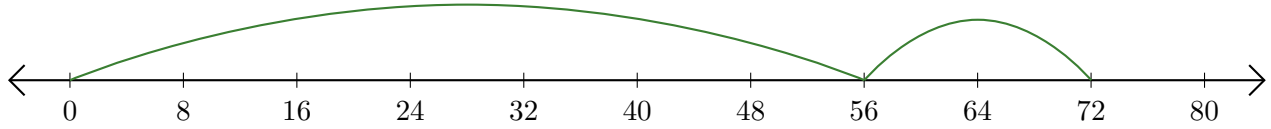


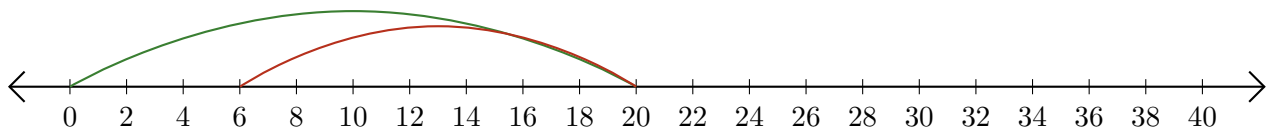
Leer Rectas Numéricas (B)

Escriba la pregunta que representa cada recta numérica.

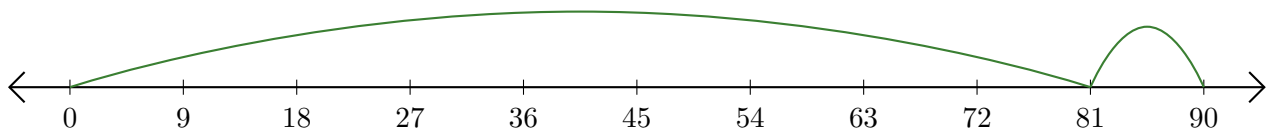
1. $\underline{\quad} + \underline{\quad} = \underline{\quad}$



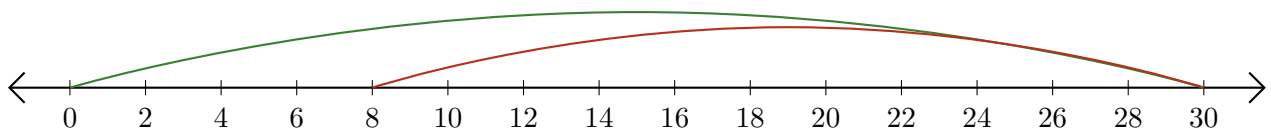
2. $\underline{\quad} - \underline{\quad} = \underline{\quad}$



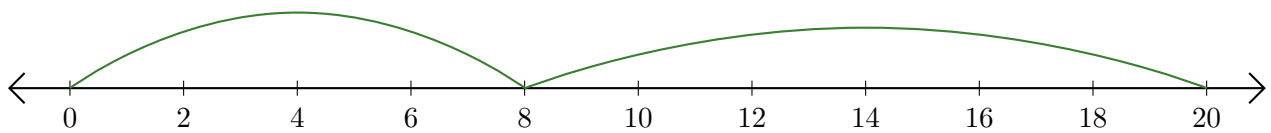
3. $\underline{\quad} + \underline{\quad} = \underline{\quad}$



4. $\underline{\quad} - \underline{\quad} = \underline{\quad}$



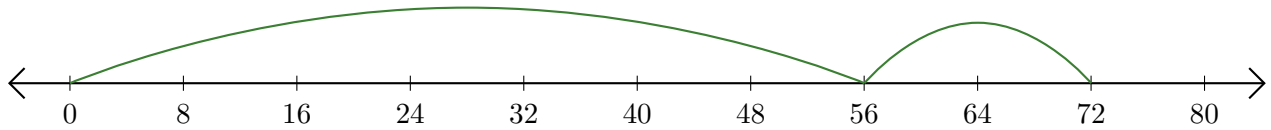
5. $\underline{\quad} + \underline{\quad} = \underline{\quad}$



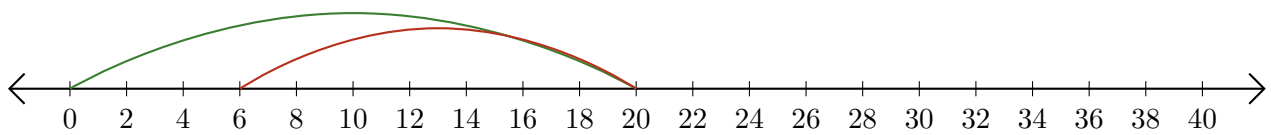
Leer Rectas Numéricas (B) Respuestas

Escriba la pregunta que representa cada recta numérica.

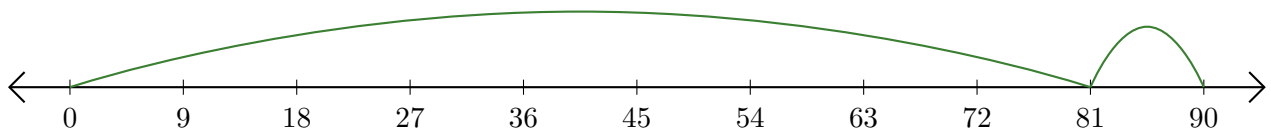
1. $\underline{56} + \underline{16} = \underline{72}$



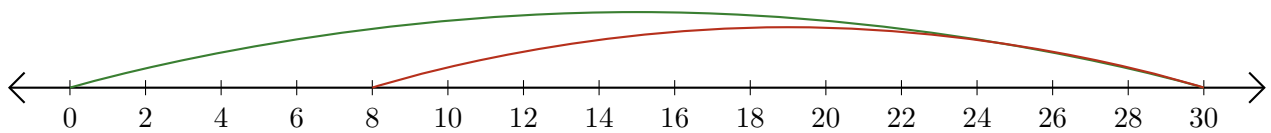
2. $\underline{20} - \underline{14} = \underline{6}$



3. $\underline{81} + \underline{9} = \underline{90}$



4. $\underline{30} - \underline{22} = \underline{8}$



5. $\underline{8} + \underline{12} = \underline{20}$

