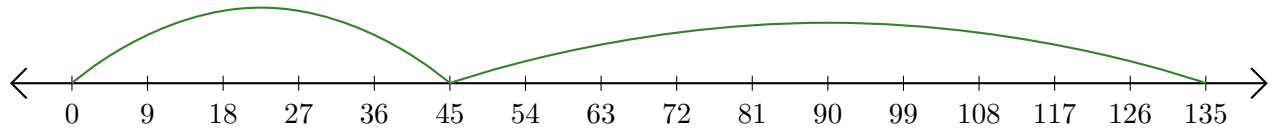


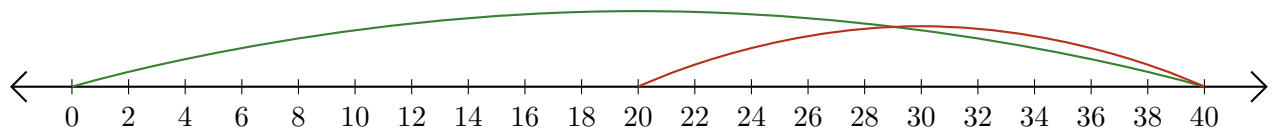
Leer Rectas Numéricas (C)

Escriba la pregunta que representa cada recta numérica.

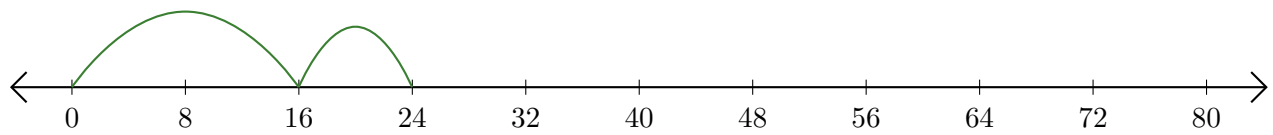
1. $\underline{\quad} + \underline{\quad} = \underline{\quad}$



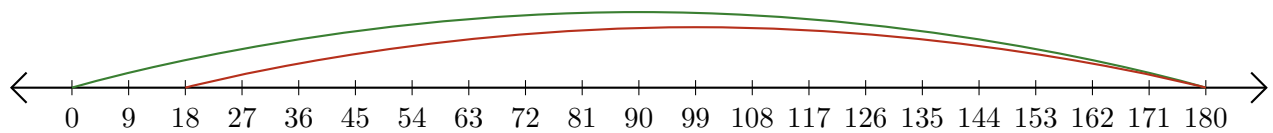
2. $\underline{\quad} - \underline{\quad} = \underline{\quad}$



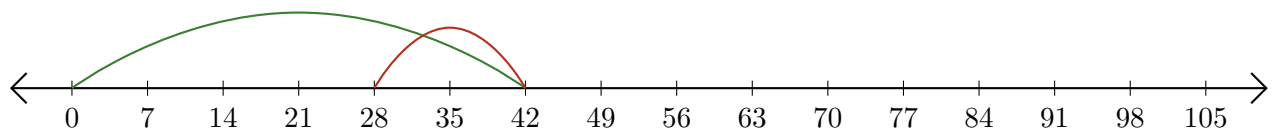
3. $\underline{\quad} + \underline{\quad} = \underline{\quad}$



4. $\underline{\quad} - \underline{\quad} = \underline{\quad}$



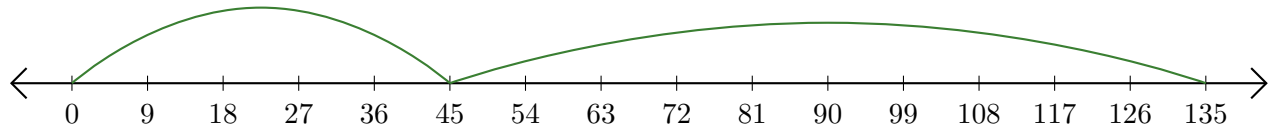
5. $\underline{\quad} - \underline{\quad} = \underline{\quad}$



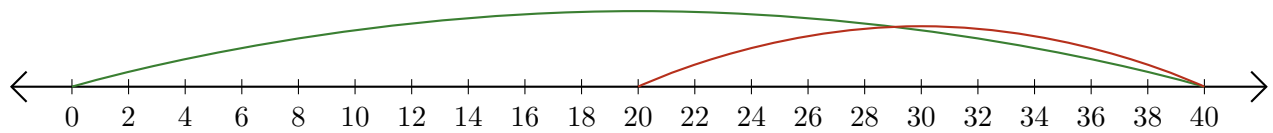
Leer Rectas Numéricas (C) Respuestas

Escriba la pregunta que representa cada recta numérica.

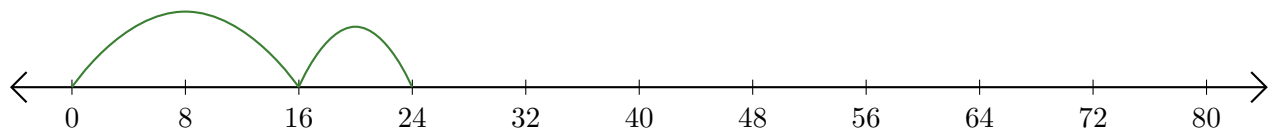
1. $\underline{45} + \underline{90} = \underline{135}$



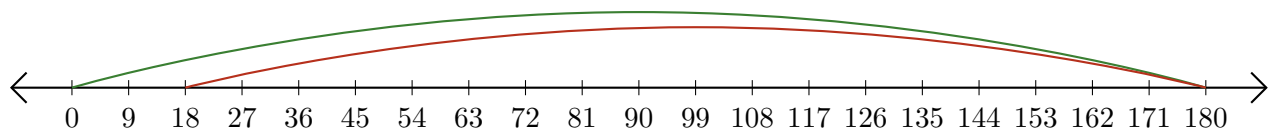
2. $\underline{40} - \underline{20} = \underline{20}$



3. $\underline{16} + \underline{8} = \underline{24}$



4. $\underline{180} - \underline{162} = \underline{18}$



5. $\underline{42} - \underline{14} = \underline{28}$

