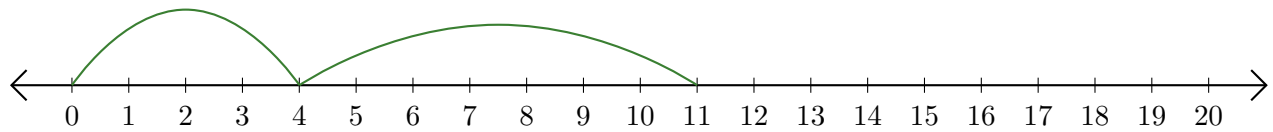


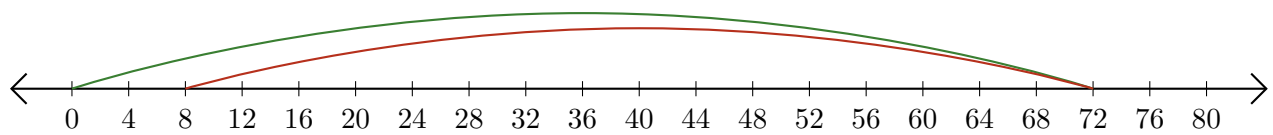
Leer Rectas Numéricas (D)

Escriba la pregunta que representa cada recta numérica.

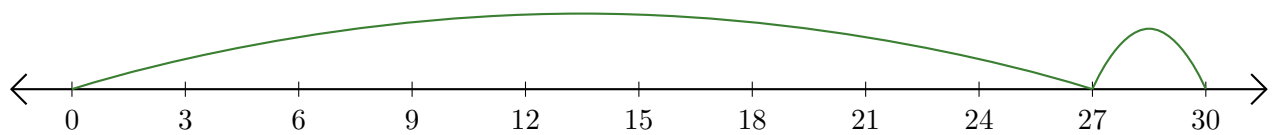
1. $\underline{\quad} + \underline{\quad} = \underline{\quad}$



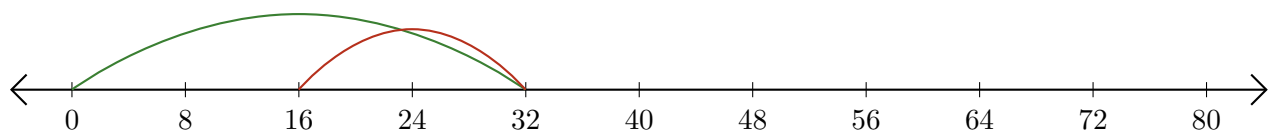
2. $\underline{\quad} - \underline{\quad} = \underline{\quad}$



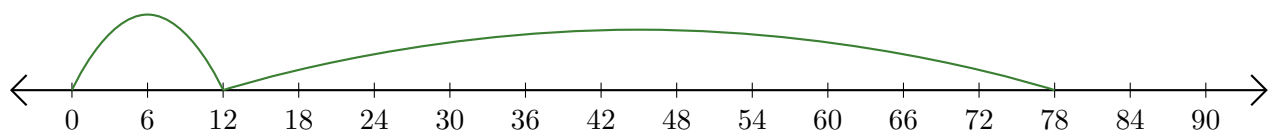
3. $\underline{\quad} + \underline{\quad} = \underline{\quad}$



4. $\underline{\quad} - \underline{\quad} = \underline{\quad}$



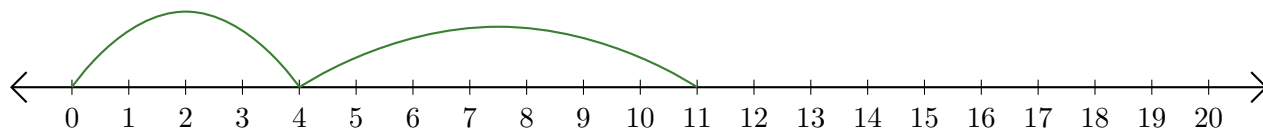
5. $\underline{\quad} + \underline{\quad} = \underline{\quad}$



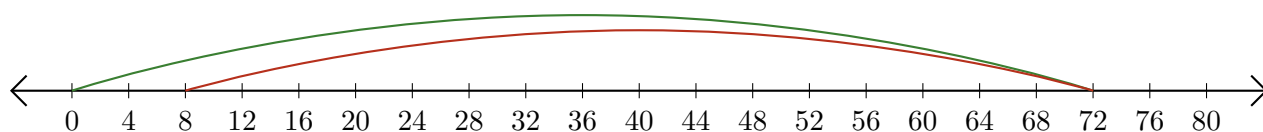
Leer Rectas Numéricas (D) Respuestas

Escriba la pregunta que representa cada recta numérica.

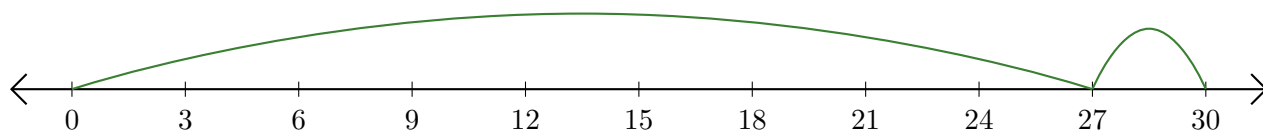
1. $\underline{4} + \underline{7} = \underline{11}$



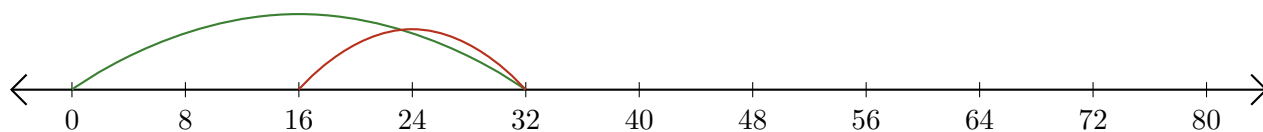
2. $\underline{72} - \underline{64} = \underline{8}$



3. $\underline{27} + \underline{3} = \underline{30}$



4. $\underline{32} - \underline{16} = \underline{16}$



5. $\underline{12} + \underline{66} = \underline{78}$

