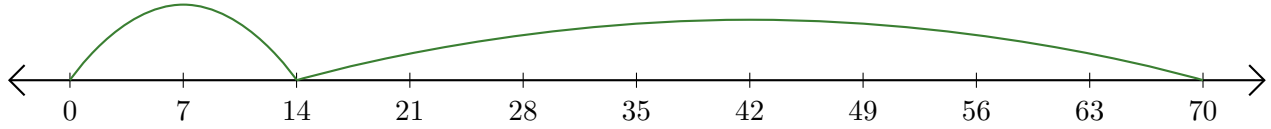


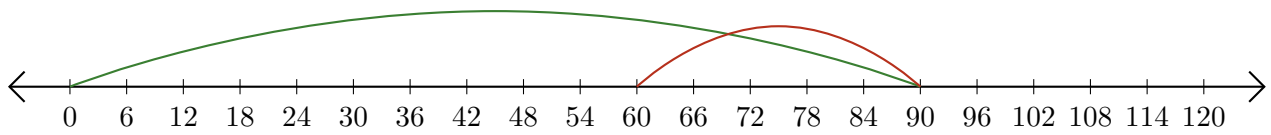
Leer Rectas Numéricas (E)

Escriba la pregunta que representa cada recta numérica.

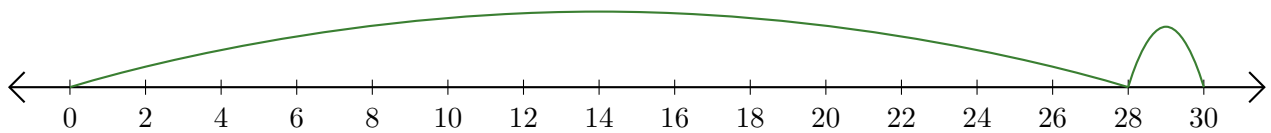
1. $\underline{\quad} + \underline{\quad} = \underline{\quad}$



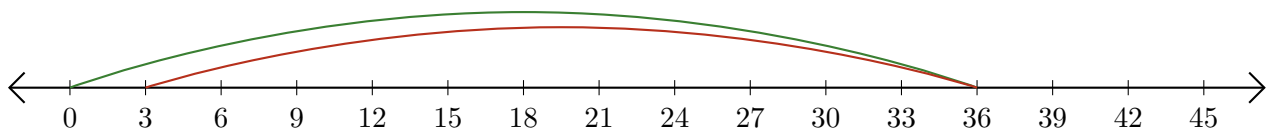
2. $\underline{\quad} - \underline{\quad} = \underline{\quad}$



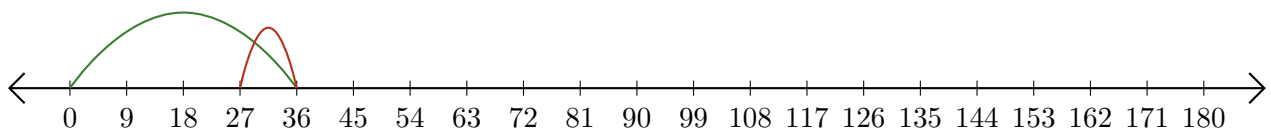
3. $\underline{\quad} + \underline{\quad} = \underline{\quad}$



4. $\underline{\quad} - \underline{\quad} = \underline{\quad}$



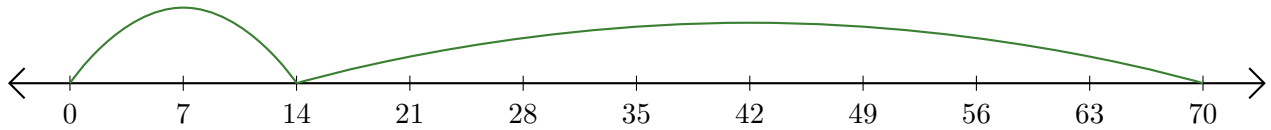
5. $\underline{\quad} - \underline{\quad} = \underline{\quad}$



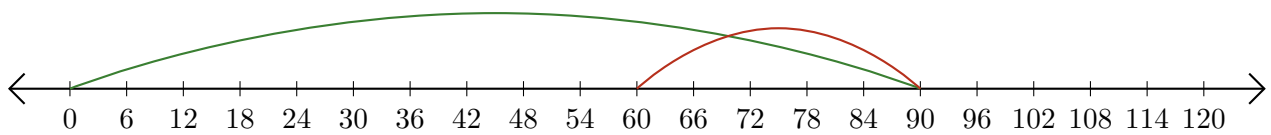
Leer Rectas Numéricas (E) Respuestas

Escriba la pregunta que representa cada recta numérica.

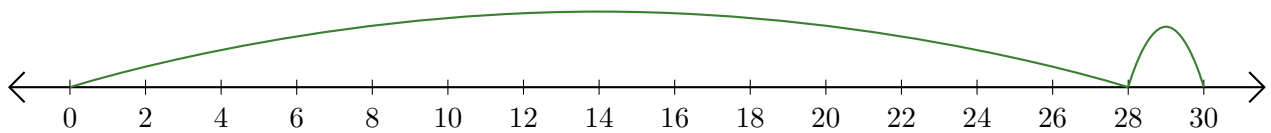
1. $\underline{14} + \underline{56} = \underline{70}$



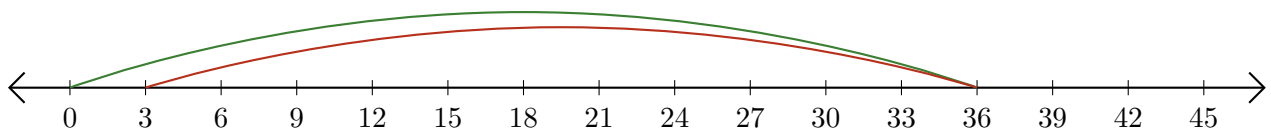
2. $\underline{90} - \underline{30} = \underline{60}$



3. $\underline{28} + \underline{2} = \underline{30}$



4. $\underline{36} - \underline{33} = \underline{3}$



5. $\underline{36} - \underline{9} = \underline{27}$

