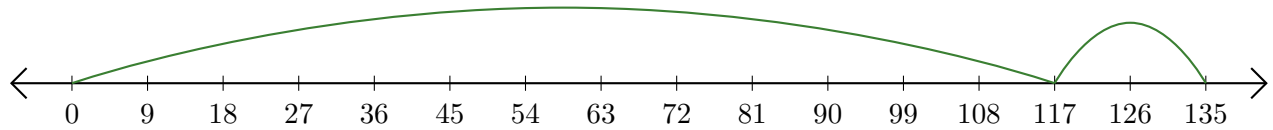


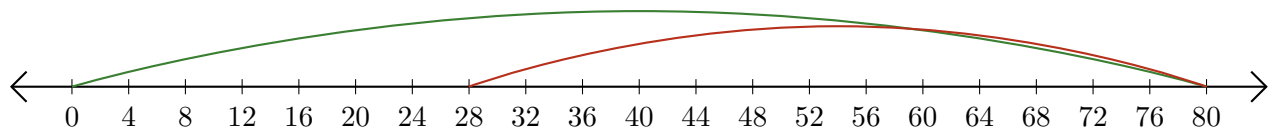
Leer Rectas Numéricas (G)

Escriba la pregunta que representa cada recta numérica.

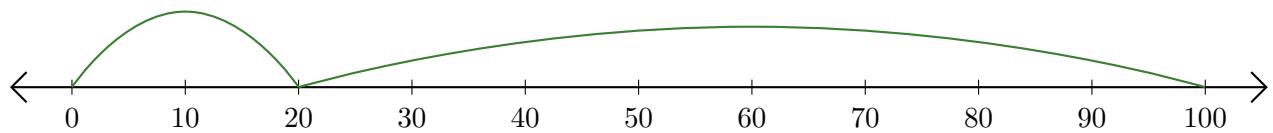
1. $\underline{\quad} + \underline{\quad} = \underline{\quad}$



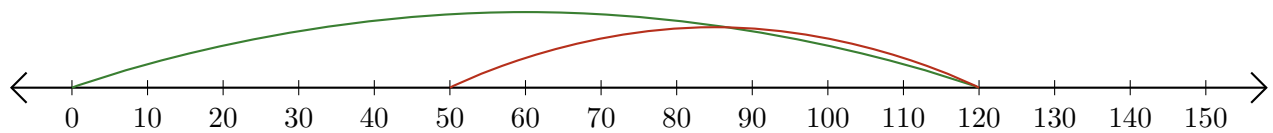
2. $\underline{\quad} - \underline{\quad} = \underline{\quad}$



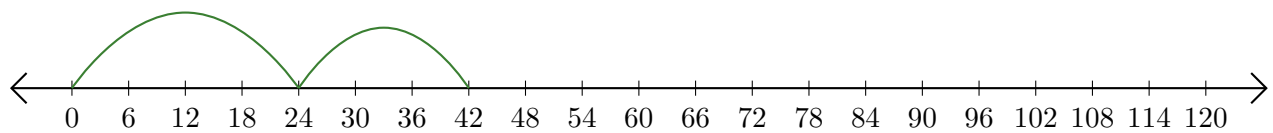
3. $\underline{\quad} + \underline{\quad} = \underline{\quad}$



4. $\underline{\quad} - \underline{\quad} = \underline{\quad}$



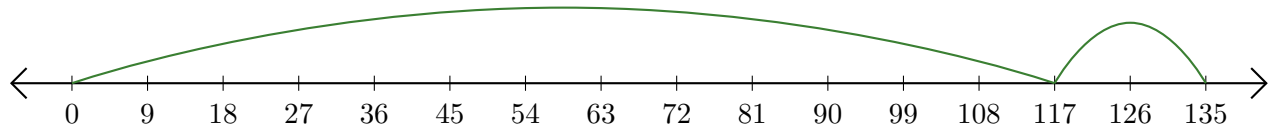
5. $\underline{\quad} + \underline{\quad} = \underline{\quad}$



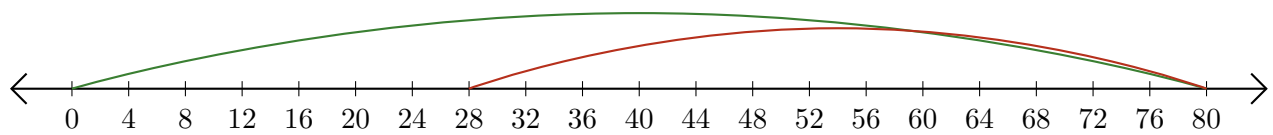
Leer Rectas Numéricas (G) Respuestas

Escriba la pregunta que representa cada recta numérica.

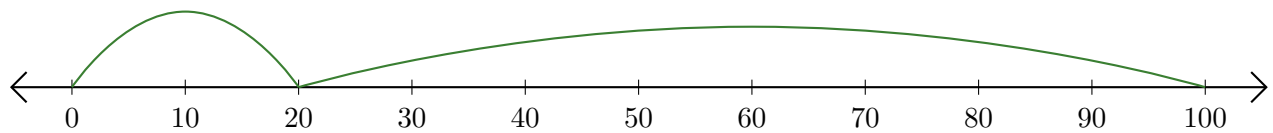
1. $\underline{117} + \underline{18} = \underline{135}$



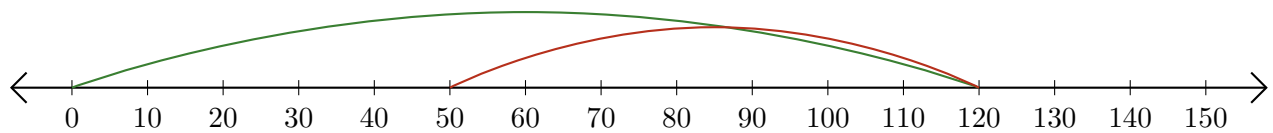
2. $\underline{80} - \underline{52} = \underline{28}$



3. $\underline{20} + \underline{80} = \underline{100}$



4. $\underline{120} - \underline{70} = \underline{50}$



5. $\underline{24} + \underline{18} = \underline{42}$

