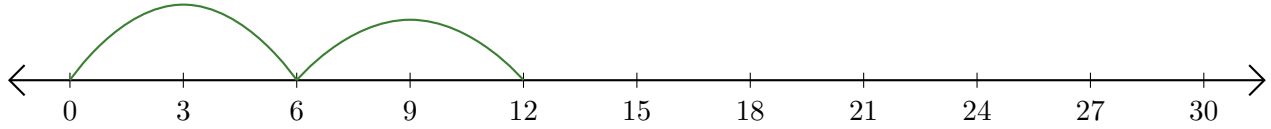


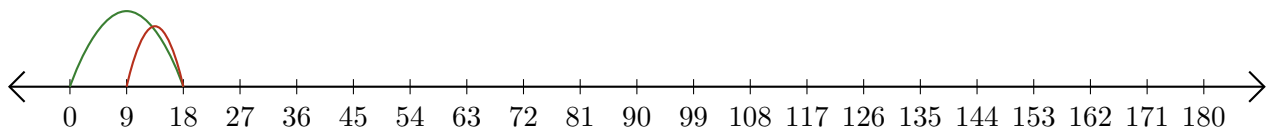
Leer Rectas Numéricas (H)

Escriba la pregunta que representa cada recta numérica.

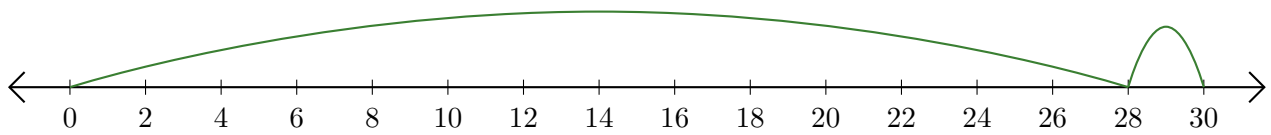
1. $\underline{\quad} + \underline{\quad} = \underline{\quad}$



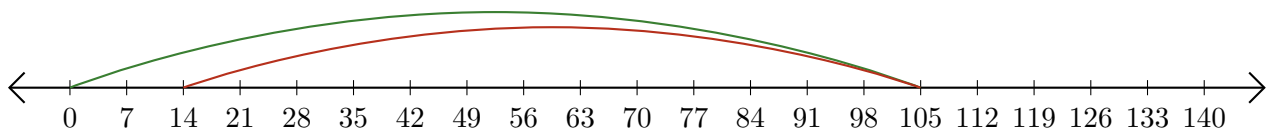
2. $\underline{\quad} - \underline{\quad} = \underline{\quad}$



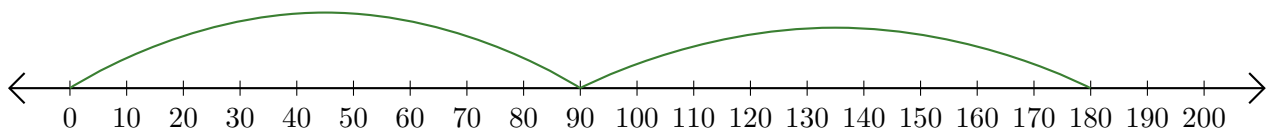
3. $\underline{\quad} + \underline{\quad} = \underline{\quad}$



4. $\underline{\quad} - \underline{\quad} = \underline{\quad}$



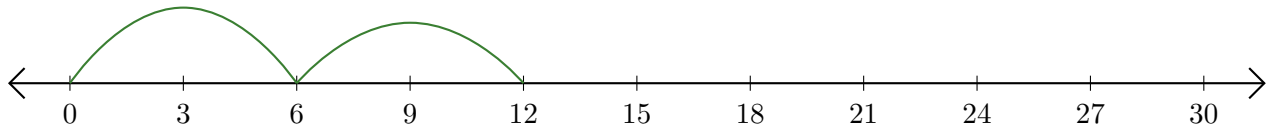
5. $\underline{\quad} + \underline{\quad} = \underline{\quad}$



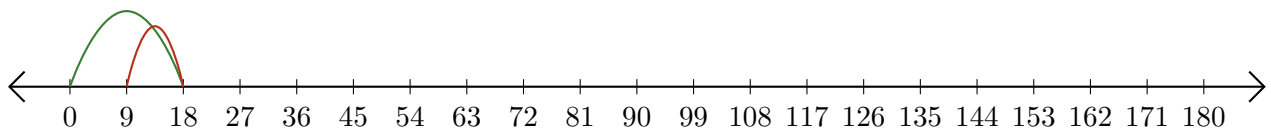
Leer Rectas Numéricas (H) Respuestas

Escriba la pregunta que representa cada recta numérica.

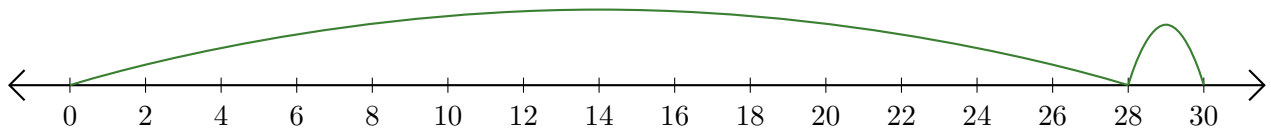
1. $\underline{6} + \underline{6} = \underline{12}$



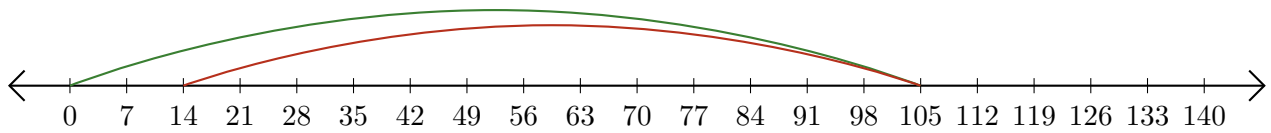
2. $\underline{18} - \underline{9} = \underline{9}$



3. $\underline{28} + \underline{2} = \underline{30}$



4. $\underline{105} - \underline{91} = \underline{14}$



5. $\underline{90} + \underline{90} = \underline{180}$

