

Factores Primos (B)

Use un diagrama de árbol para encontrar los factores primos de cada número.

16

20

48

26

45

48

30

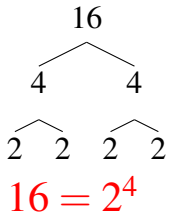
4

28

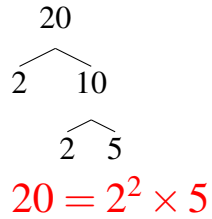
Factores Primos (B) Respuestas

Use un diagrama de árbol para encontrar los factores primos de cada número.

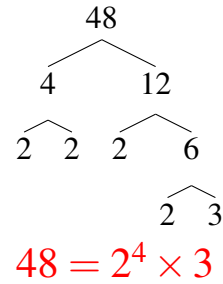
16



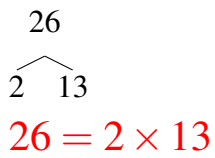
20



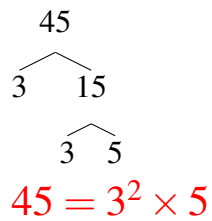
48



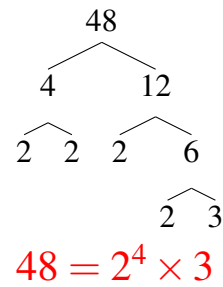
26



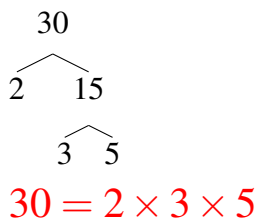
45



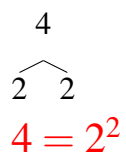
48



30



4



28

