

Factores Primos (C)

Use un diagrama de árbol para encontrar los factores primos de cada número.

18

40

16

12

15

36

33

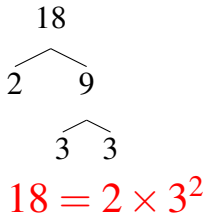
14

48

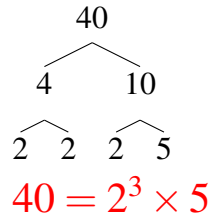
Factores Primos (C) Respuestas

Use un diagrama de árbol para encontrar los factores primos de cada número.

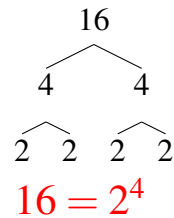
18



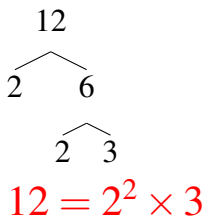
40



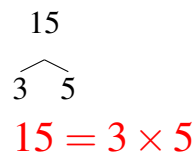
16



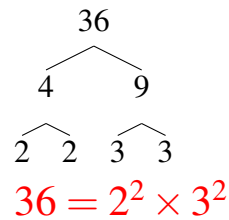
12



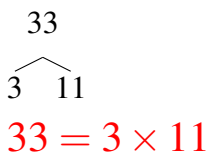
15



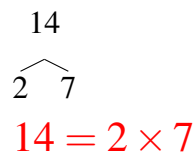
36



33



14



48

