

## Factores Primos (F)

Use un diagrama de árbol para encontrar los factores primos de cada número.

40

8

15

30

32

10

38

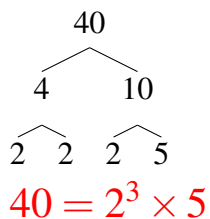
46

48

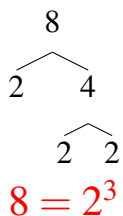
## Factores Primos (F) Respuestas

Use un diagrama de árbol para encontrar los factores primos de cada número.

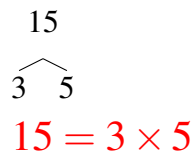
40



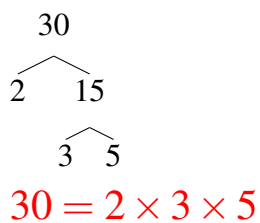
8



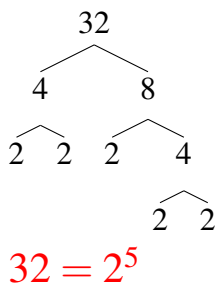
15



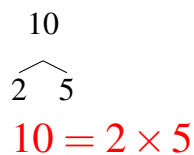
30



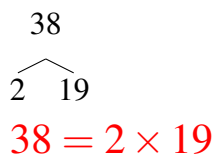
32



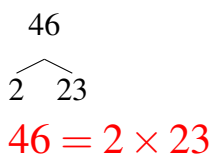
10



38



46



48

