

Factores Primos (J)

Use un diagrama de árbol para encontrar los factores primos de cada número.

15

22

28

28

25

4

46

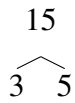
42

34

Factores Primos (J) Respuestas

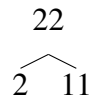
Use un diagrama de árbol para encontrar los factores primos de cada número.

15



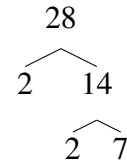
$$15 = 3 \times 5$$

22



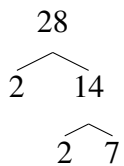
$$22 = 2 \times 11$$

28



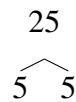
$$28 = 2^2 \times 7$$

28



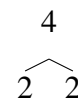
$$28 = 2^2 \times 7$$

25



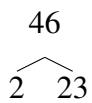
$$25 = 5^2$$

4



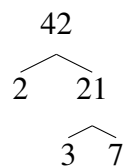
$$4 = 2^2$$

46



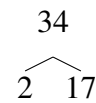
$$46 = 2 \times 23$$

42



$$42 = 2 \times 3 \times 7$$

34



$$34 = 2 \times 17$$