

Factores Primos (B)

Use un diagrama de árbol para encontrar los factores primos de cada número.

56

62

68

48

66

92

9

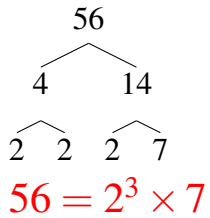
60

60

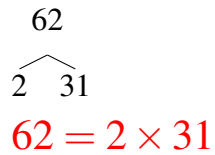
Factores Primos (B) Respuestas

Use un diagrama de árbol para encontrar los factores primos de cada número.

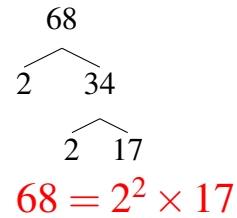
56



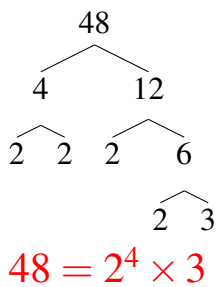
62



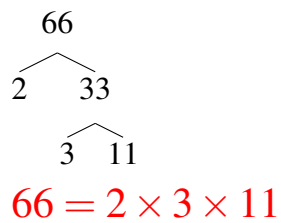
68



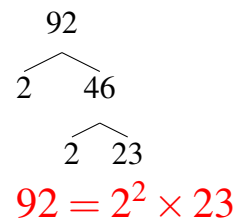
48



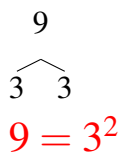
66



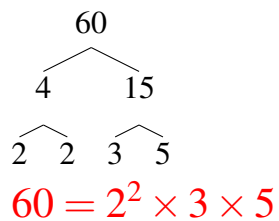
92



9



60



60

