

## Factores Primos (C)

Use un diagrama de árbol para encontrar los factores primos de cada número.

90

93

49

30

77

66

42

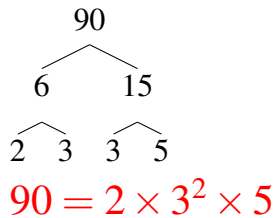
39

6

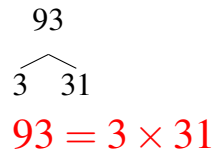
## Factores Primos (C) Respuestas

Use un diagrama de árbol para encontrar los factores primos de cada número.

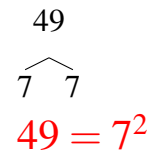
90



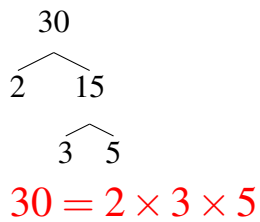
93



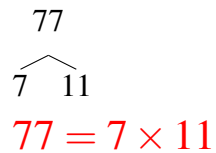
49



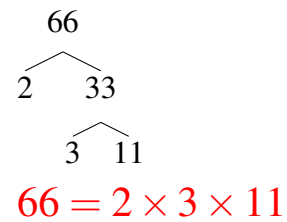
30



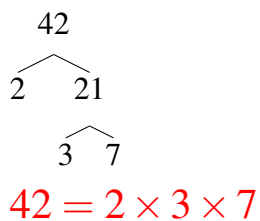
77



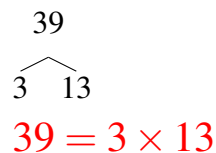
66



42



39



6

