

Factores Primos (G)

Use un diagrama de árbol para encontrar los factores primos de cada número.

4

20

76

96

6

94

90

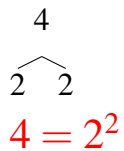
30

52

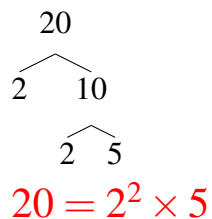
Factores Primos (G) Respuestas

Use un diagrama de árbol para encontrar los factores primos de cada número.

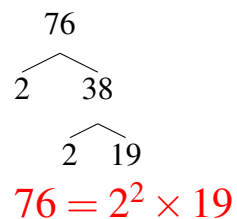
4



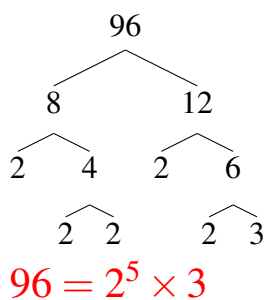
20



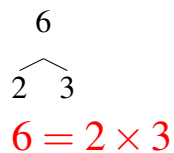
76



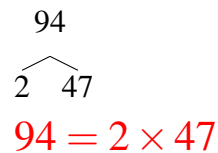
96



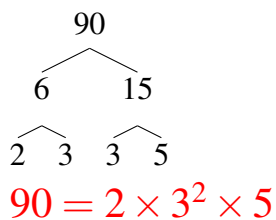
6



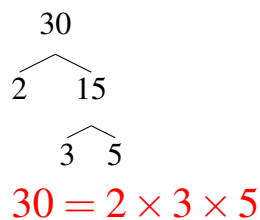
94



90



30



52

