

Factores Primos (A)

Use un diagrama de árbol para encontrar los factores primos de cada número.

74

57

65

66

85

4

76

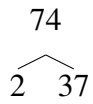
14

15

Factores Primos (A) Respuestas

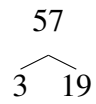
Use un diagrama de árbol para encontrar los factores primos de cada número.

74



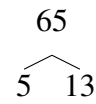
$$74 = 2 \times 37$$

57



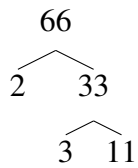
$$57 = 3 \times 19$$

65



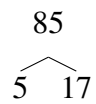
$$65 = 5 \times 13$$

66



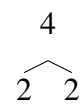
$$66 = 2 \times 3 \times 11$$

85



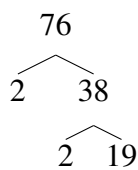
$$85 = 5 \times 17$$

4



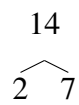
$$4 = 2^2$$

76



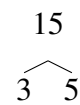
$$76 = 2^2 \times 19$$

14



$$14 = 2 \times 7$$

15



$$15 = 3 \times 5$$

Factores Primos (B)

Use un diagrama de árbol para encontrar los factores primos de cada número.

56

62

68

48

66

92

9

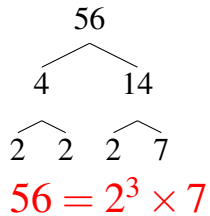
60

60

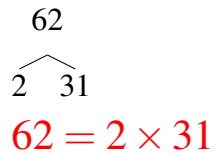
Factores Primos (B) Respuestas

Use un diagrama de árbol para encontrar los factores primos de cada número.

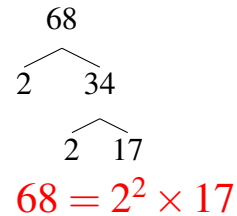
56



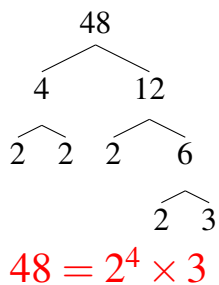
62



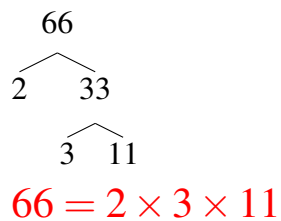
68



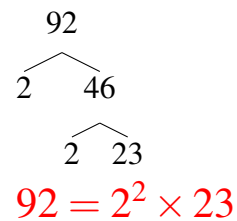
48



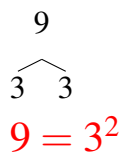
66



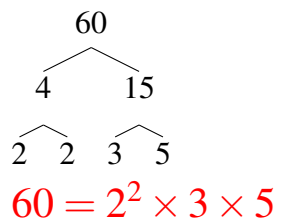
92



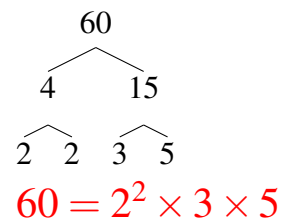
9



60



60



Factores Primos (C)

Use un diagrama de árbol para encontrar los factores primos de cada número.

90

93

49

30

77

66

42

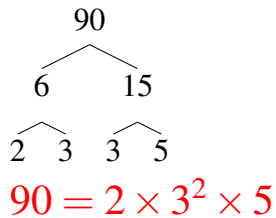
39

6

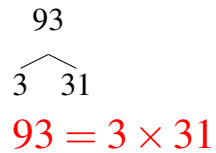
Factores Primos (C) Respuestas

Use un diagrama de árbol para encontrar los factores primos de cada número.

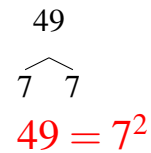
90



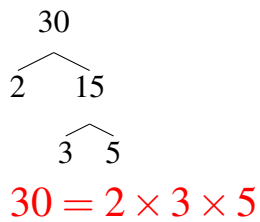
93



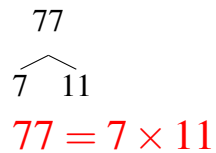
49



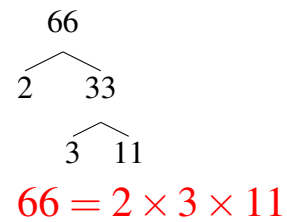
30



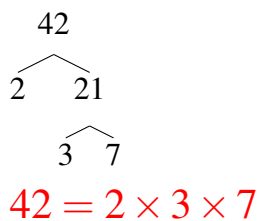
77



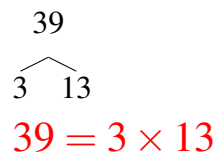
66



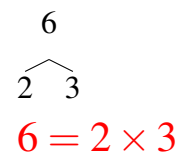
42



39



6



Factores Primos (D)

Use un diagrama de árbol para encontrar los factores primos de cada número.

24

9

38

84

80

12

24

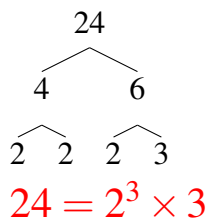
94

85

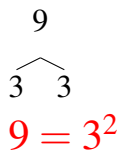
Factores Primos (D) Respuestas

Use un diagrama de árbol para encontrar los factores primos de cada número.

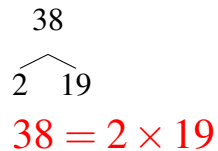
24



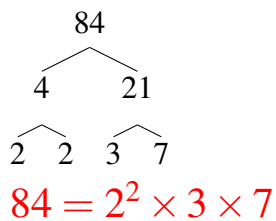
9



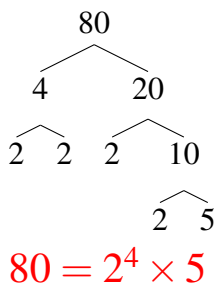
38



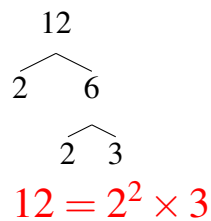
84



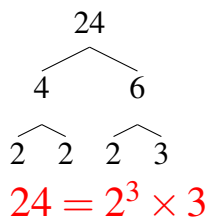
80



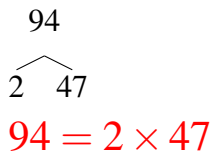
12



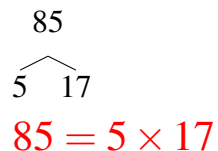
24



94



85



Factores Primos (E)

Use un diagrama de árbol para encontrar los factores primos de cada número.

28

24

15

95

25

96

15

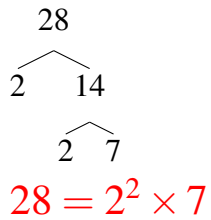
38

33

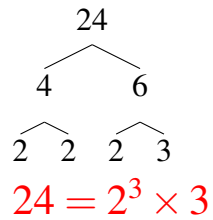
Factores Primos (E) Respuestas

Use un diagrama de árbol para encontrar los factores primos de cada número.

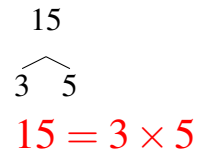
28



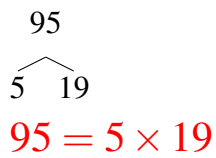
24



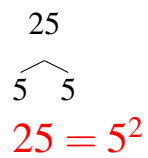
15



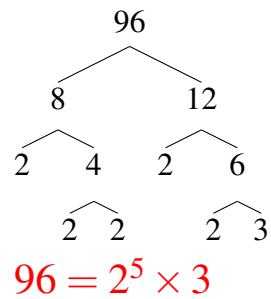
95



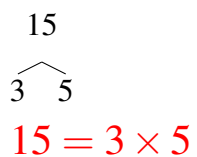
25



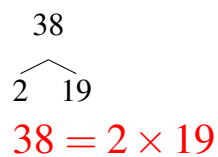
96



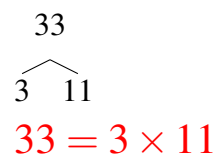
15



38



33



Factores Primos (F)

Use un diagrama de árbol para encontrar los factores primos de cada número.

81

6

10

36

16

12

96

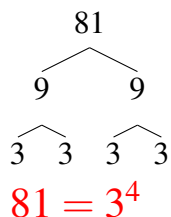
86

54

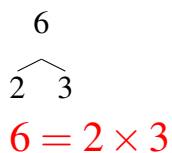
Factores Primos (F) Respuestas

Use un diagrama de árbol para encontrar los factores primos de cada número.

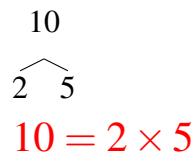
81



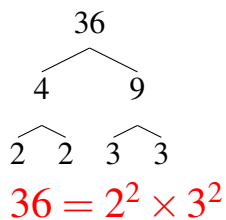
6



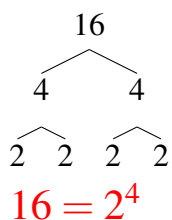
10



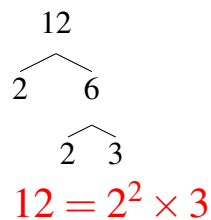
36



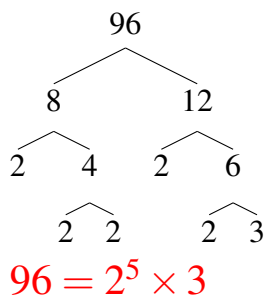
16



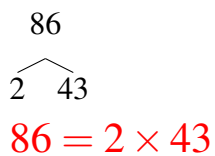
12



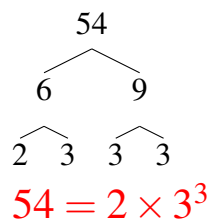
96



86



54



Factores Primos (G)

Use un diagrama de árbol para encontrar los factores primos de cada número.

4

20

76

96

6

94

90

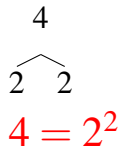
30

52

Factores Primos (G) Respuestas

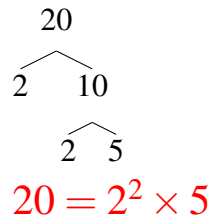
Use un diagrama de árbol para encontrar los factores primos de cada número.

4



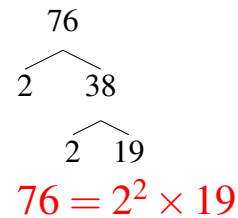
$$4 = 2^2$$

20



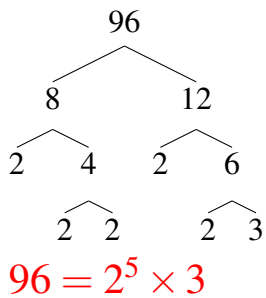
$$20 = 2^2 \times 5$$

76



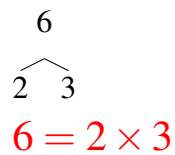
$$76 = 2^2 \times 19$$

96



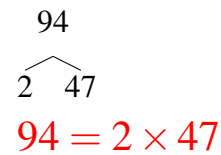
$$96 = 2^5 \times 3$$

6



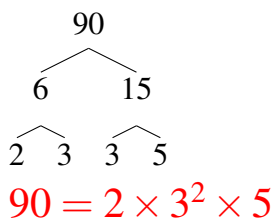
$$6 = 2 \times 3$$

94



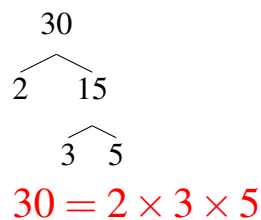
$$94 = 2 \times 47$$

90



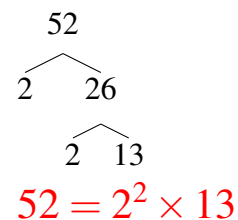
$$90 = 2 \times 3^2 \times 5$$

30



$$30 = 2 \times 3 \times 5$$

52



$$52 = 2^2 \times 13$$

Factores Primos (H)

Use un diagrama de árbol para encontrar los factores primos de cada número.

58

38

94

63

22

58

28

44

40

Factores Primos (H) Respuestas

Use un diagrama de árbol para encontrar los factores primos de cada número.

58

$$\begin{array}{c} 58 \\ \swarrow \quad \searrow \\ 2 \quad 29 \\ \hline 58 = 2 \times 29 \end{array}$$

38

$$\begin{array}{c} 38 \\ \swarrow \quad \searrow \\ 2 \quad 19 \\ \hline 38 = 2 \times 19 \end{array}$$

94

$$\begin{array}{c} 94 \\ \swarrow \quad \searrow \\ 2 \quad 47 \\ \hline 94 = 2 \times 47 \end{array}$$

63

$$\begin{array}{c} 63 \\ \swarrow \quad \searrow \\ 3 \quad 21 \\ \quad \swarrow \quad \searrow \\ \quad 3 \quad 7 \\ \hline 63 = 3^2 \times 7 \end{array}$$

22

$$\begin{array}{c} 22 \\ \swarrow \quad \searrow \\ 2 \quad 11 \\ \hline 22 = 2 \times 11 \end{array}$$

58

$$\begin{array}{c} 58 \\ \swarrow \quad \searrow \\ 2 \quad 29 \\ \hline 58 = 2 \times 29 \end{array}$$

28

$$\begin{array}{c} 28 \\ \swarrow \quad \searrow \\ 2 \quad 14 \\ \quad \swarrow \quad \searrow \\ \quad 2 \quad 7 \\ \hline 28 = 2^2 \times 7 \end{array}$$

44

$$\begin{array}{c} 44 \\ \swarrow \quad \searrow \\ 2 \quad 22 \\ \quad \swarrow \quad \searrow \\ \quad 2 \quad 11 \\ \hline 44 = 2^2 \times 11 \end{array}$$

40

$$\begin{array}{c} 40 \\ \swarrow \quad \searrow \\ 4 \quad 10 \\ \swarrow \quad \searrow \quad \swarrow \quad \searrow \\ 2 \quad 2 \quad 2 \quad 5 \\ \hline 40 = 2^3 \times 5 \end{array}$$

Factores Primos (I)

Use un diagrama de árbol para encontrar los factores primos de cada número.

68

32

27

56

76

4

88

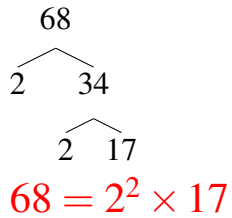
93

21

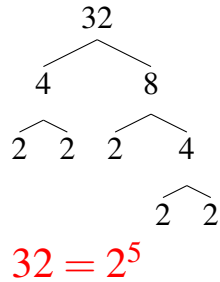
Factores Primos (I) Respuestas

Use un diagrama de árbol para encontrar los factores primos de cada número.

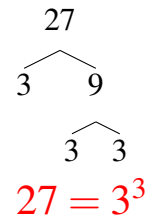
68



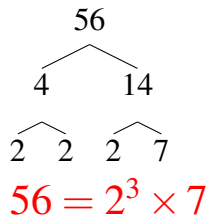
32



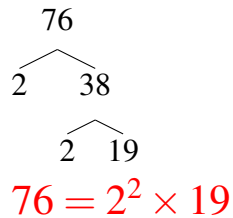
27



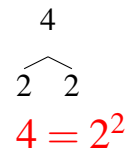
56



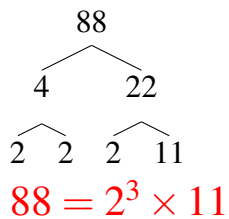
76



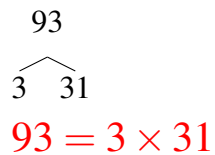
4



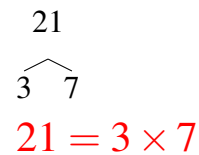
88



93



21



Factores Primos (J)

Use un diagrama de árbol para encontrar los factores primos de cada número.

93

50

18

72

35

20

12

56

38

Factores Primos (J) Respuestas

Use un diagrama de árbol para encontrar los factores primos de cada número.

93

$$\begin{array}{c} 93 \\ \swarrow \quad \searrow \\ 3 \quad 31 \\ \hline 93 = 3 \times 31 \end{array}$$

50

$$\begin{array}{c} 50 \\ \swarrow \quad \searrow \\ 2 \quad 25 \\ \quad \swarrow \quad \searrow \\ \quad 5 \quad 5 \\ \hline 50 = 2 \times 5^2 \end{array}$$

18

$$\begin{array}{c} 18 \\ \swarrow \quad \searrow \\ 2 \quad 9 \\ \quad \swarrow \quad \searrow \\ \quad 3 \quad 3 \\ \hline 18 = 2 \times 3^2 \end{array}$$

72

$$\begin{array}{c} 72 \\ \swarrow \quad \searrow \\ 4 \quad 18 \\ \swarrow \quad \searrow \quad \swarrow \quad \searrow \\ 2 \quad 2 \quad 2 \quad 9 \\ \quad \quad \quad \swarrow \quad \searrow \\ \quad \quad \quad 3 \quad 3 \\ \hline 72 = 2^3 \times 3^2 \end{array}$$

35

$$\begin{array}{c} 35 \\ \swarrow \quad \searrow \\ 5 \quad 7 \\ \hline 35 = 5 \times 7 \end{array}$$

20

$$\begin{array}{c} 20 \\ \swarrow \quad \searrow \\ 2 \quad 10 \\ \quad \swarrow \quad \searrow \\ \quad 2 \quad 5 \\ \hline 20 = 2^2 \times 5 \end{array}$$

12

$$\begin{array}{c} 12 \\ \swarrow \quad \searrow \\ 2 \quad 6 \\ \quad \swarrow \quad \searrow \\ \quad 2 \quad 3 \\ \hline 12 = 2^2 \times 3 \end{array}$$

56

$$\begin{array}{c} 56 \\ \swarrow \quad \searrow \\ 4 \quad 14 \\ \swarrow \quad \searrow \quad \swarrow \quad \searrow \\ 2 \quad 2 \quad 2 \quad 7 \\ \hline 56 = 2^3 \times 7 \end{array}$$

38

$$\begin{array}{c} 38 \\ \swarrow \quad \searrow \\ 2 \quad 19 \\ \hline 38 = 2 \times 19 \end{array}$$