

## Factores Primos (B)

Use un diagrama de árbol para encontrar los factores primos de cada número.

36

91

138

18

86

34

51

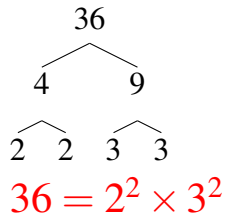
78

52

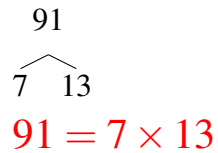
## Factores Primos (B) Respuestas

Use un diagrama de árbol para encontrar los factores primos de cada número.

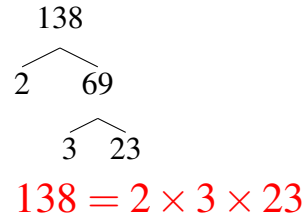
36



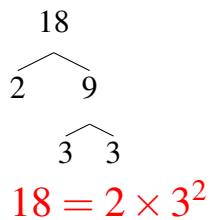
91



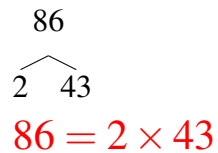
138



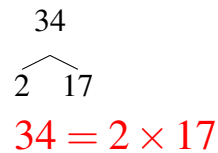
18



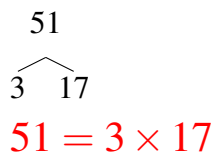
86



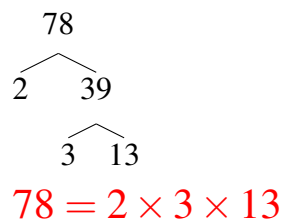
34



51



78



52

