

Factores Primos (D)

Use un diagrama de árbol para encontrar los factores primos de cada número.

135

99

44

34

44

143

124

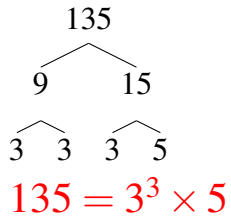
15

15

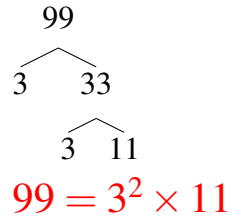
Factores Primos (D) Respuestas

Use un diagrama de árbol para encontrar los factores primos de cada número.

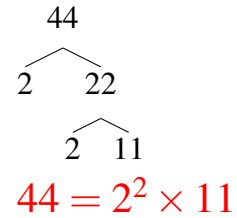
135



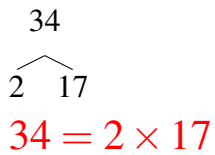
99



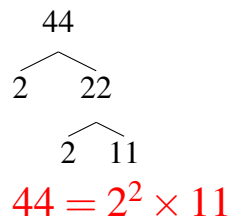
44



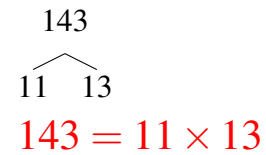
34



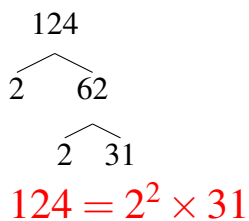
44



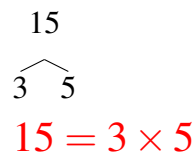
143



124



15



15

