

Factores Primos (G)

Use un diagrama de árbol para encontrar los factores primos de cada número.

125

74

21

55

64

135

21

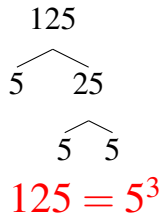
48

88

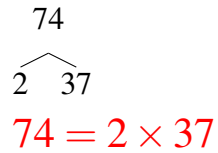
Factores Primos (G) Respuestas

Use un diagrama de árbol para encontrar los factores primos de cada número.

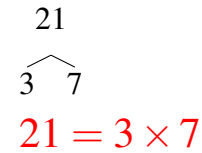
125



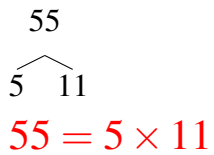
74



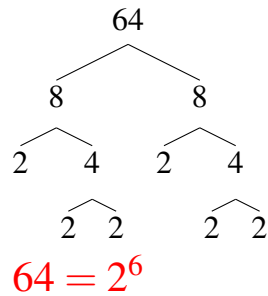
21



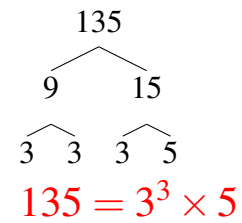
55



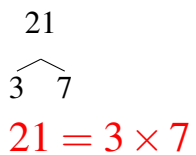
64



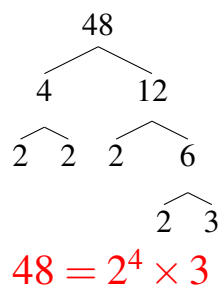
135



21



48



88

