

## Factores Primos (J)

Use un diagrama de árbol para encontrar los factores primos de cada número.

8

138

30

42

54

40

20

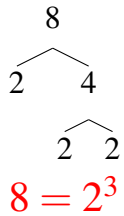
114

142

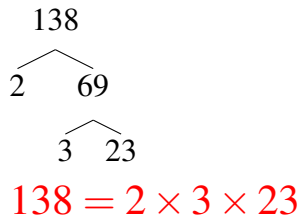
## Factores Primos (J) Respuestas

Use un diagrama de árbol para encontrar los factores primos de cada número.

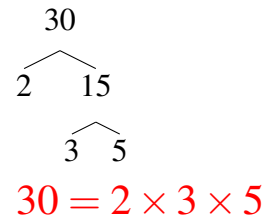
8



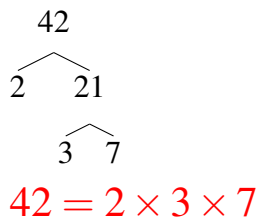
138



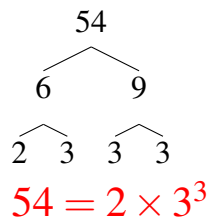
30



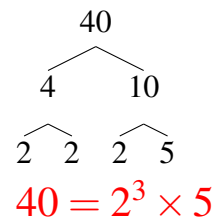
42



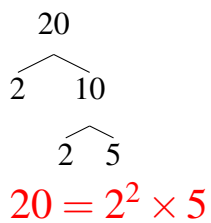
54



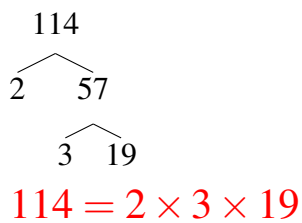
40



20



114



142

