

Factores Primos (A)

Use un diagrama de árbol para encontrar los factores primos de cada número.

48

136

92

182

161

48

70

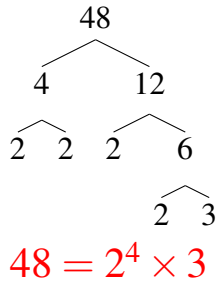
185

189

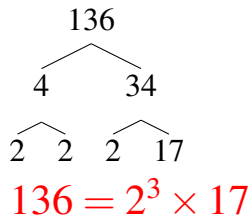
Factores Primos (A) Respuestas

Use un diagrama de árbol para encontrar los factores primos de cada número.

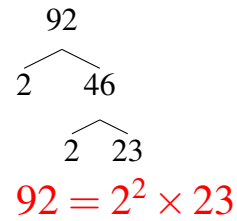
48



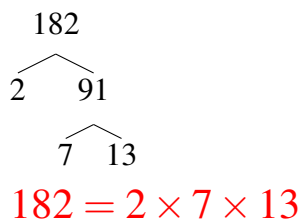
136



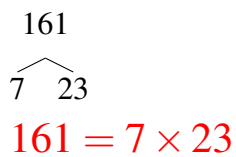
92



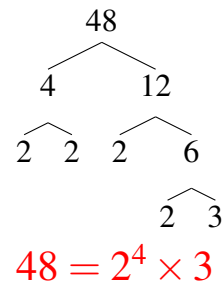
182



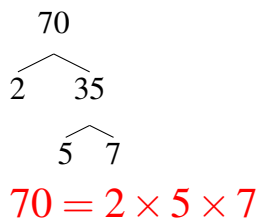
161



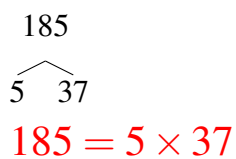
48



70



185



189

