

Factores Primos (C)

Use un diagrama de árbol para encontrar los factores primos de cada número.

185

117

183

130

171

70

81

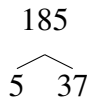
146

141

Factores Primos (C) Respuestas

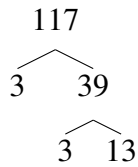
Use un diagrama de árbol para encontrar los factores primos de cada número.

185



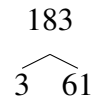
$$185 = 5 \times 37$$

117



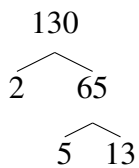
$$117 = 3^2 \times 13$$

183



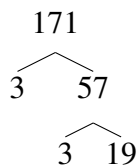
$$183 = 3 \times 61$$

130



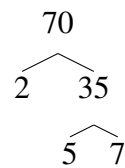
$$130 = 2 \times 5 \times 13$$

171



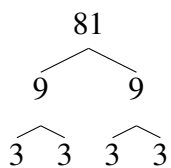
$$171 = 3^2 \times 19$$

70



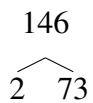
$$70 = 2 \times 5 \times 7$$

81



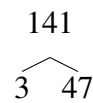
$$81 = 3^4$$

146



$$146 = 2 \times 73$$

141



$$141 = 3 \times 47$$