

Factores Primos (B)

Use un diagrama de árbol para encontrar los factores primos de cada número.

212

206

66

129

198

63

220

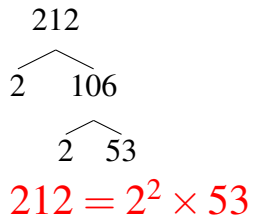
122

230

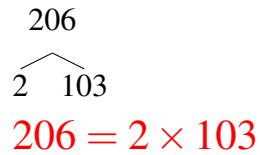
Factores Primos (B) Respuestas

Use un diagrama de árbol para encontrar los factores primos de cada número.

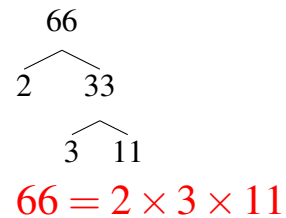
212



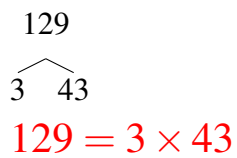
206



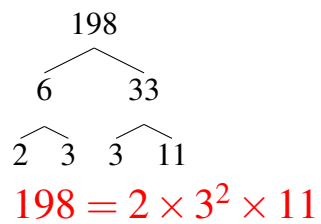
66



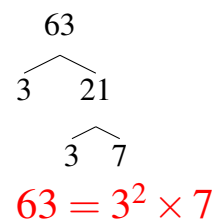
129



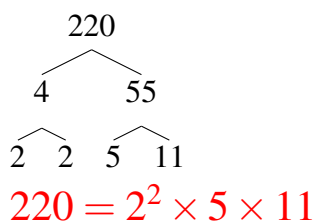
198



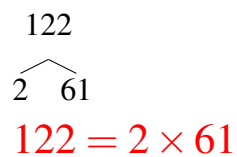
63



220



122



230

