

Factores Primos (D)

Use un diagrama de árbol para encontrar los factores primos de cada número.

162

94

183

68

68

207

200

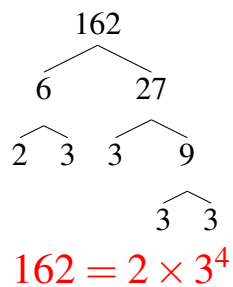
145

100

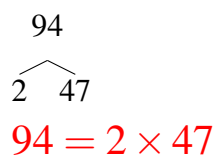
Factores Primos (D) Respuestas

Use un diagrama de árbol para encontrar los factores primos de cada número.

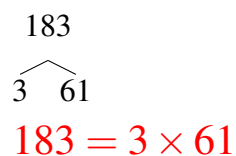
162



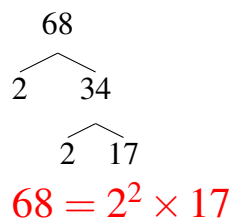
94



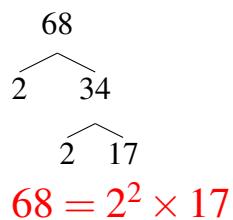
183



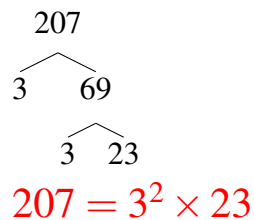
68



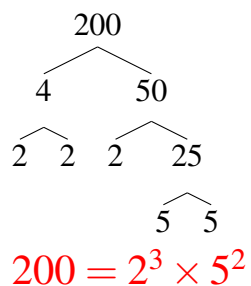
68



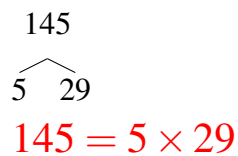
207



200



145



100

