

## Factores Primos (F)

Use un diagrama de árbol para encontrar los factores primos de cada número.

105

232

204

57

135

88

52

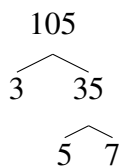
51

118

## Factores Primos (F) Respuestas

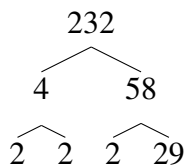
Use un diagrama de árbol para encontrar los factores primos de cada número.

105



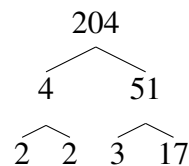
$$105 = 3 \times 5 \times 7$$

232



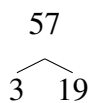
$$232 = 2^3 \times 29$$

204



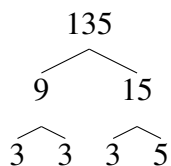
$$204 = 2^2 \times 3 \times 17$$

57



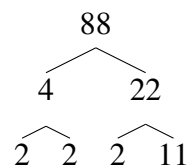
$$57 = 3 \times 19$$

135



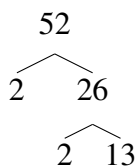
$$135 = 3^3 \times 5$$

88



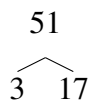
$$88 = 2^3 \times 11$$

52



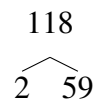
$$52 = 2^2 \times 13$$

51



$$51 = 3 \times 17$$

118



$$118 = 2 \times 59$$