

Factores Primos (H)

Use un diagrama de árbol para encontrar los factores primos de cada número.

55

216

123

117

136

60

182

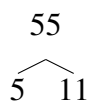
86

234

Factores Primos (H) Respuestas

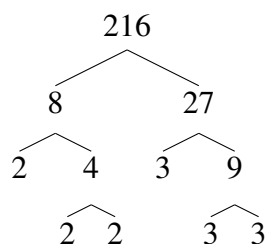
Use un diagrama de árbol para encontrar los factores primos de cada número.

55



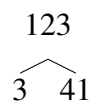
$$55 = 5 \times 11$$

216



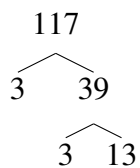
$$216 = 2^3 \times 3^3$$

123



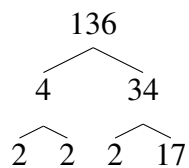
$$123 = 3 \times 41$$

117



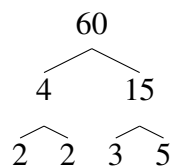
$$117 = 3^2 \times 13$$

136



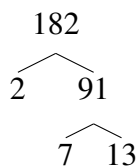
$$136 = 2^3 \times 17$$

60



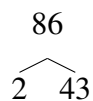
$$60 = 2^2 \times 3 \times 5$$

182



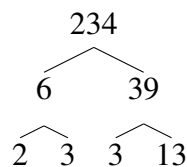
$$182 = 2 \times 7 \times 13$$

86



$$86 = 2 \times 43$$

234



$$234 = 2 \times 3^2 \times 13$$