

Contar Autos en Intervalos de a 7 (7)

Rellene los espacios.



7



14









42







63













105











140




147













182









Contar Autos en Intervalos de a 7 (7) Respuestas

Rellene los espacios.



7



14



21



28



35



42



49



56



63



70



77



84



91



98



105



112



119




126



133




140



147



154



161



168




175



182



189



196



203



210