

Contar Autos en Intervalos de 7 (F)

Rellene los espacios.



7





21





35











70









































196



203



Contar Autos en Intervalos de a 7 (F) Respuestas

Rellene los espacios.



7



14



21



28



35



42



49



56



63



70



77



84



91



98



105



112



119




126



133



140




147



154



161



168




175




182



189



196



203



210